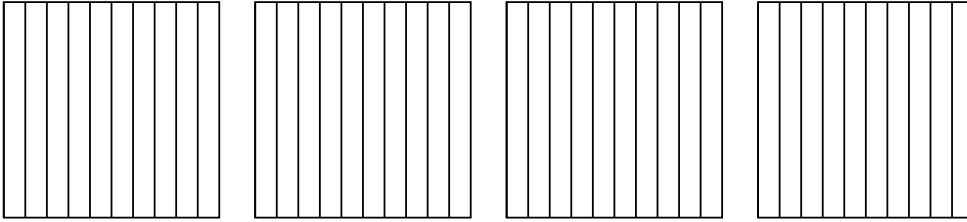


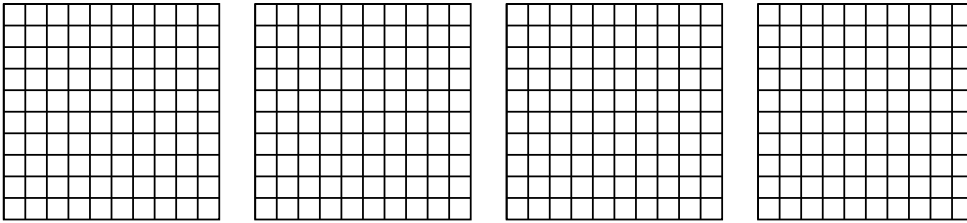


Use the visual model to solve each problem.


1)  $4 \times 0.5 =$



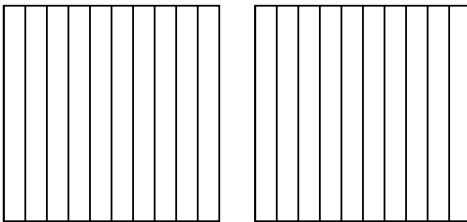
2)  $4 \times 0.92 =$



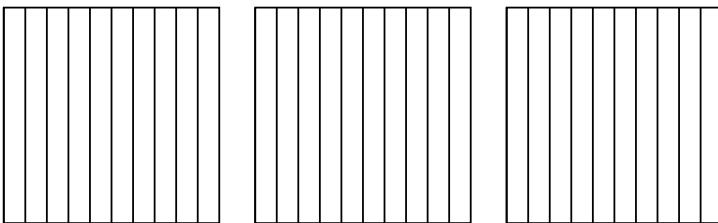
3)  $3 \times 0.36 =$



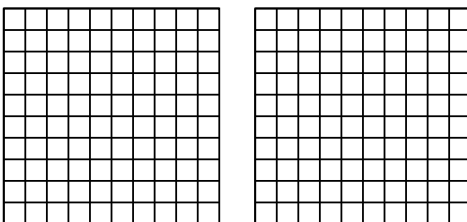
4)  $2 \times 0.2 =$



5)  $3 \times 0.6 =$



6)  $2 \times 0.44 =$



Answers

1. \_\_\_\_\_

2. \_\_\_\_\_

3. \_\_\_\_\_

4. \_\_\_\_\_

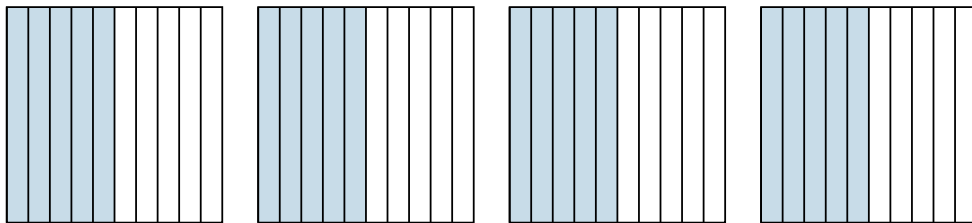
5. \_\_\_\_\_

6. \_\_\_\_\_

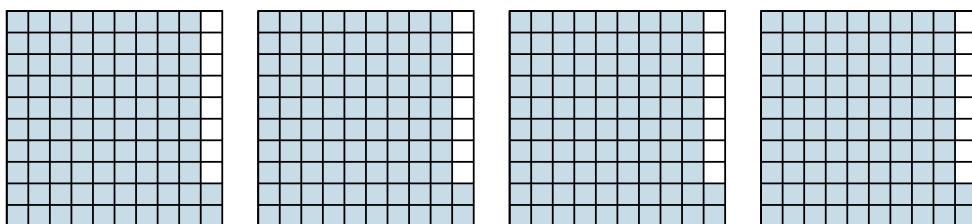


Use the visual model to solve each problem.

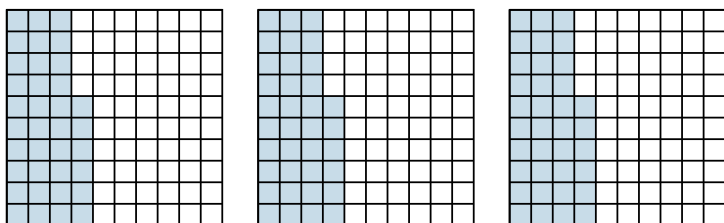
1)  $4 \times 0.5 =$



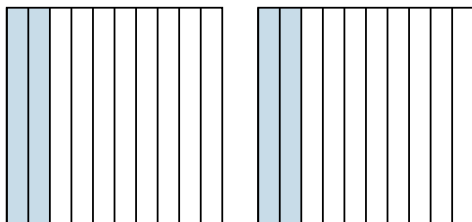
2)  $4 \times 0.92 =$



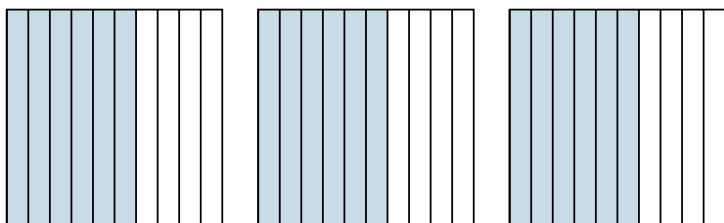
3)  $3 \times 0.36 =$



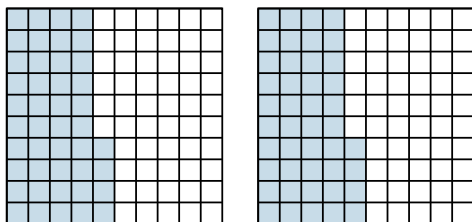
4)  $2 \times 0.2 =$



5)  $3 \times 0.6 =$



6)  $2 \times 0.44 =$



**Answers**

1.  $\frac{20}{10} = 2$

2.  $\frac{368}{100} = 3.68$

3.  $\frac{108}{100} = 1.08$

4.  $\frac{4}{10} = 0.4$

5.  $\frac{18}{10} = 1.8$

6.  $\frac{88}{100} = 0.88$