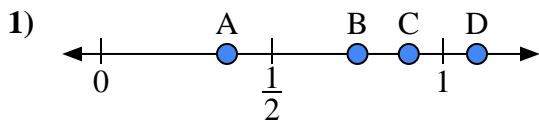


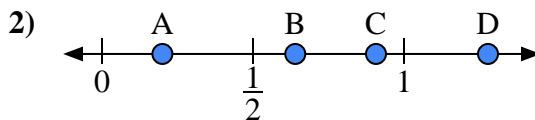


Use the number lines to answer the questions.

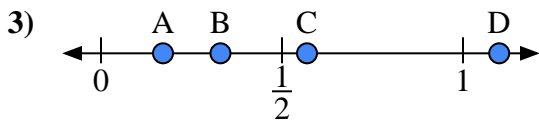
**Answers**



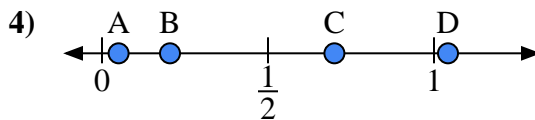
- a) Which letter best represents the location of 0.90?
- b) Which letter best represents the location of 0.75?



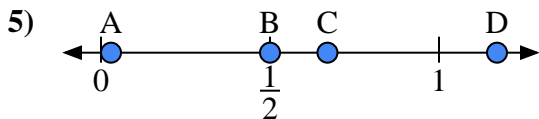
- a) Which letter best represents the location of 0.2?
- b) Which letter best represents the location of 0.64?



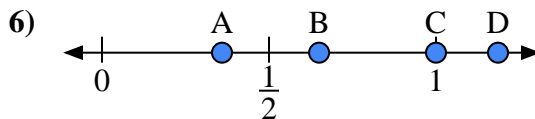
- a) Which letter best represents the location of 1.10?
- b) Which letter best represents the location of 0.33?



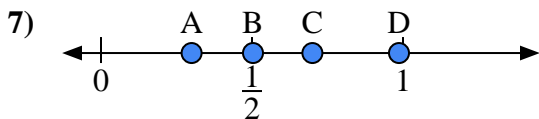
- a) Which letter best represents the location of 0.70?
- b) Which letter best represents the location of 0.05?



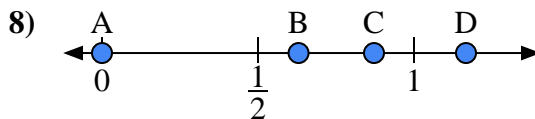
- a) Which letter best represents the location of 0.50?
- b) Which letter best represents the location of 0.67?



- a) Which letter best represents the location of 1.00?
- b) Which letter best represents the location of 0.65?



- a) Which letter best represents the location of 0.3?
- b) Which letter best represents the location of 0.70?

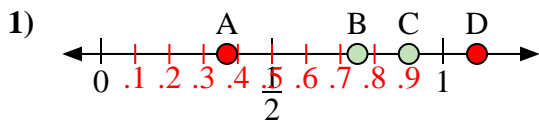


- a) Which letter best represents the location of 0.00?
- b) Which letter best represents the location of 0.63?

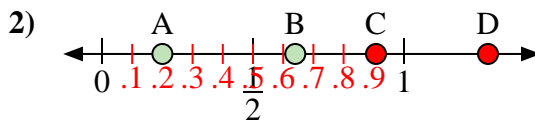
- 1. \_\_\_\_\_
- 2. \_\_\_\_\_
- 3. \_\_\_\_\_
- 4. \_\_\_\_\_
- 5. \_\_\_\_\_
- 6. \_\_\_\_\_
- 7. \_\_\_\_\_
- 8. \_\_\_\_\_



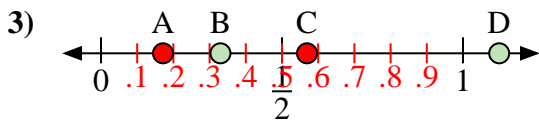
Use the number lines to answer the questions.



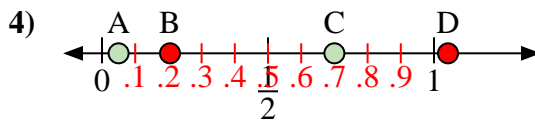
- a) Which letter best represents the location of 0.90?
- b) Which letter best represents the location of 0.75?



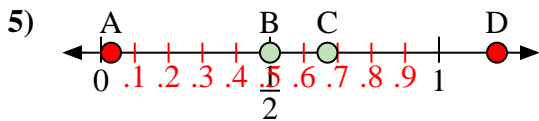
- a) Which letter best represents the location of 0.2?
- b) Which letter best represents the location of 0.64?



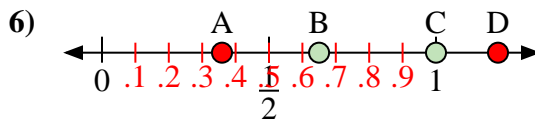
- a) Which letter best represents the location of 1.10?
- b) Which letter best represents the location of 0.33?



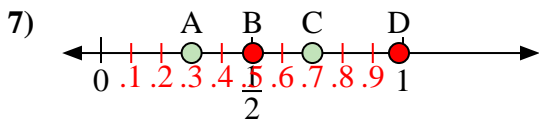
- a) Which letter best represents the location of 0.70?
- b) Which letter best represents the location of 0.05?



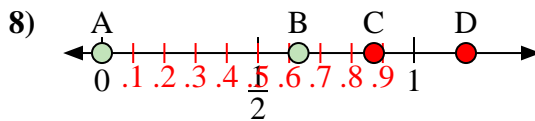
- a) Which letter best represents the location of 0.50?
- b) Which letter best represents the location of 0.67?



- a) Which letter best represents the location of 1.00?
- b) Which letter best represents the location of 0.65?



- a) Which letter best represents the location of 0.3?
- b) Which letter best represents the location of 0.70?



- a) Which letter best represents the location of 0.00?
- b) Which letter best represents the location of 0.63?

**Answers**

- 1. C B
- 2. A B
- 3. D B
- 4. C A
- 5. B C
- 6. C B
- 7. A C
- 8. A B