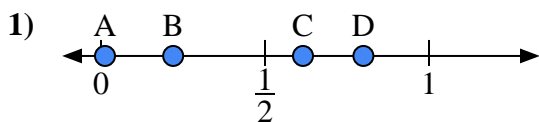


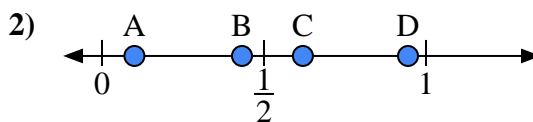


Use the number lines to answer the questions.

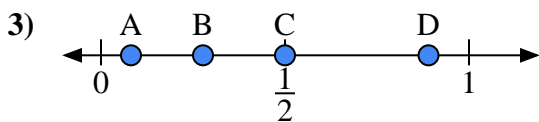
Answers



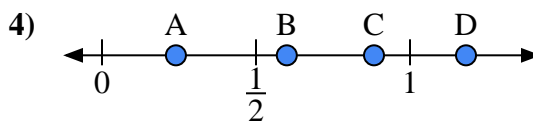
- a) Which letter best represents the location of 0.80?
- b) Which letter best represents the location of 0.22?



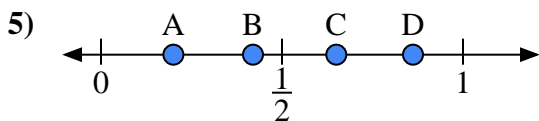
- a) Which letter best represents the location of 0.1?
- b) Which letter best represents the location of 0.62?



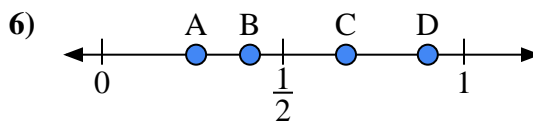
- a) Which letter best represents the location of 0.5?
- b) Which letter best represents the location of 0.89?



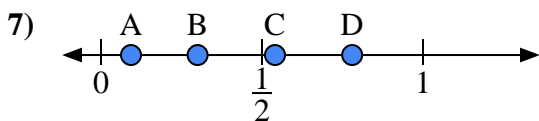
- a) Which letter best represents the location of 0.6?
- b) Which letter best represents the location of 0.24?



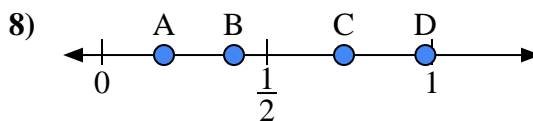
- a) Which letter best represents the location of 0.20?
- b) Which letter best represents the location of 0.65?



- a) Which letter best represents the location of 0.90?
- b) Which letter best represents the location of 0.26?



- a) Which letter best represents the location of 0.3?
- b) Which letter best represents the location of 0.78?

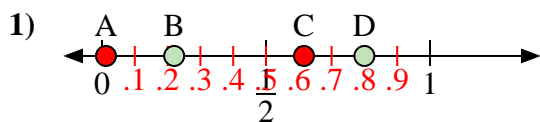


- a) Which letter best represents the location of 0.40?
- b) Which letter best represents the location of 0.98?

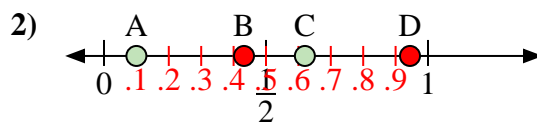
- 1. _____
- 2. _____
- 3. _____
- 4. _____
- 5. _____
- 6. _____
- 7. _____
- 8. _____



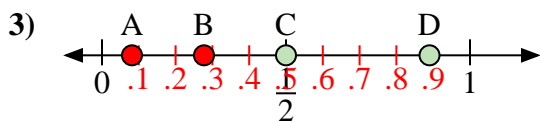
Use the number lines to answer the questions.



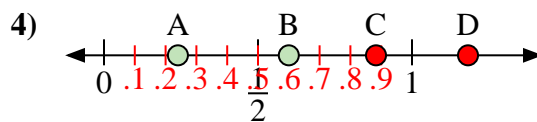
- a) Which letter best represents the location of 0.80?
- b) Which letter best represents the location of 0.22?



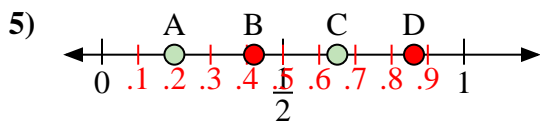
- a) Which letter best represents the location of 0.1?
- b) Which letter best represents the location of 0.62?



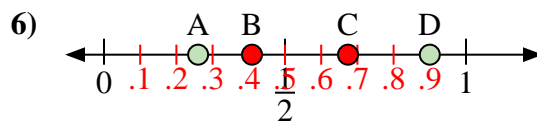
- a) Which letter best represents the location of 0.5?
- b) Which letter best represents the location of 0.89?



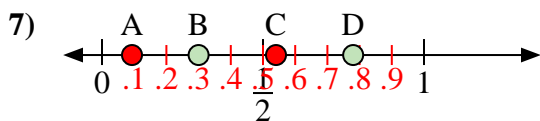
- a) Which letter best represents the location of 0.6?
- b) Which letter best represents the location of 0.24?



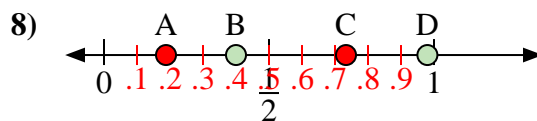
- a) Which letter best represents the location of 0.20?
- b) Which letter best represents the location of 0.65?



- a) Which letter best represents the location of 0.90?
- b) Which letter best represents the location of 0.26?



- a) Which letter best represents the location of 0.3?
- b) Which letter best represents the location of 0.78?



- a) Which letter best represents the location of 0.40?
- b) Which letter best represents the location of 0.98?

Answers

- 1. D B
- 2. A C
- 3. C D
- 4. B A
- 5. A C
- 6. D A
- 7. B D
- 8. B D