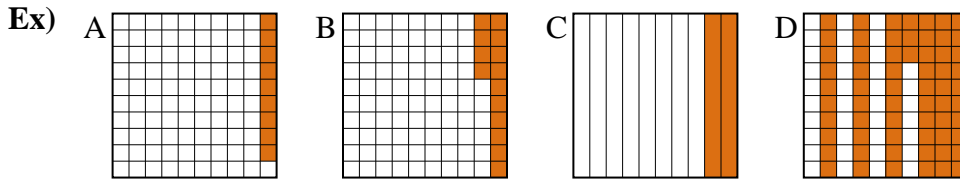




Put the boxes in order from least to greatest based on the shaded amount.

Answers



small 0.09 - A
0.14 - B
0.2 - C
 large 0.63 - D

Ex. A,B,C,D

1. _____

2. _____

3. _____

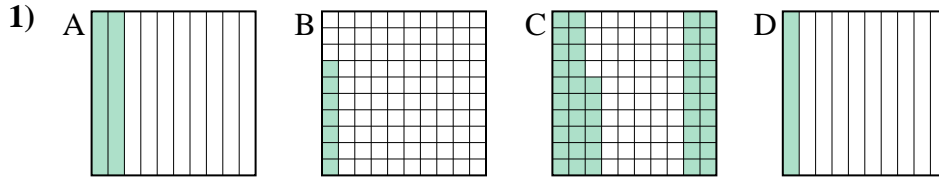
4. _____

5. _____

6. _____

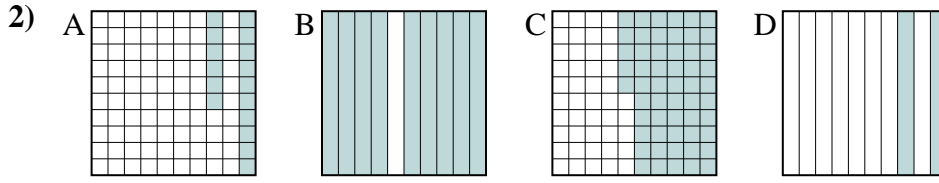
7. _____

8. _____



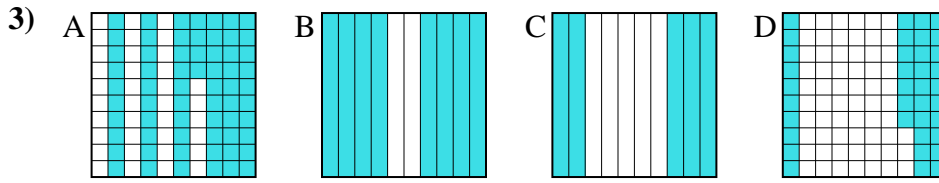
small _____

 large _____



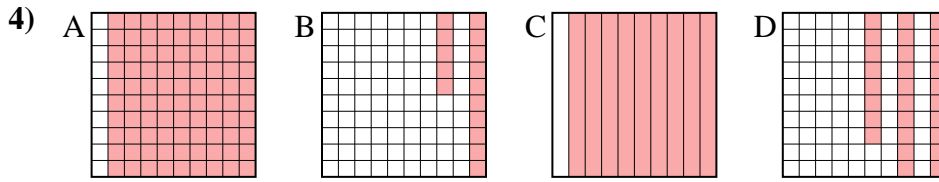
small _____

 large _____



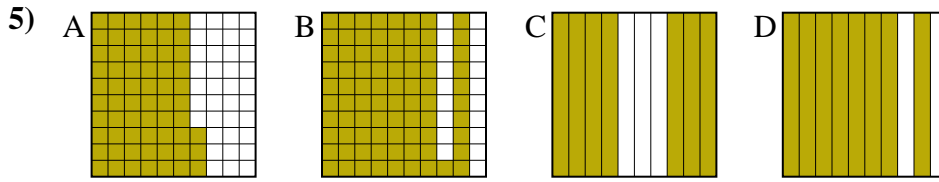
small _____

 large _____



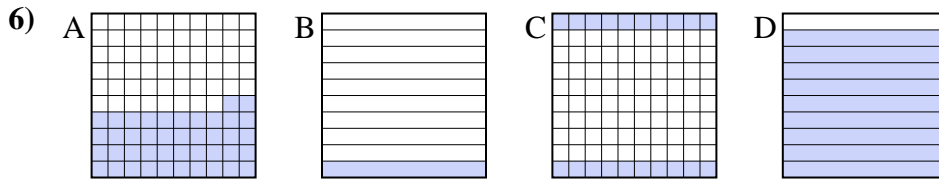
small _____

 large _____



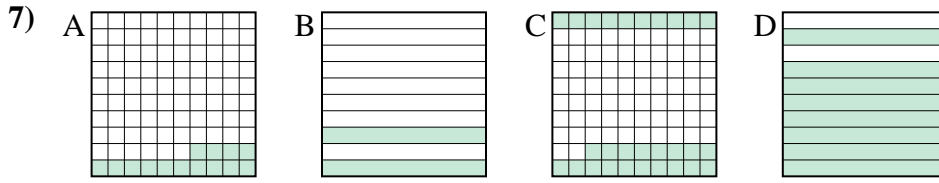
small _____

 large _____



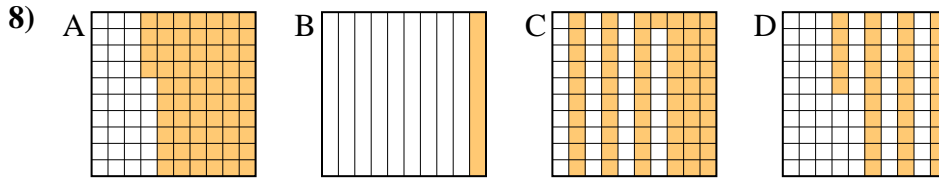
small _____

 large _____



small _____

 large _____



small _____

 large _____



Put the boxes in order from least to greatest based on the shaded amount.

Ex) A B C D small $\frac{0.09}{0.14} - A$
 $\frac{0.2}{0.63} - C$ large

1) A B C D small $\frac{0.07}{0.1} - B$
 $\frac{0.2}{0.46} - A$ large

2) A B C D small $\frac{0.16}{0.2} - A$
 $\frac{0.55}{0.9} - C$ large

3) A B C D small $\frac{0.37}{0.5} - D$
 $\frac{0.64}{0.8} - A$ large

4) A B C D small $\frac{0.15}{0.28} - B$
 $\frac{0.9}{0.9} - A$ large

5) A B C D small $\frac{0.63}{0.7} - A$
 $\frac{0.8}{0.81} - D$ large

6) A B C D small $\frac{0.1}{0.2} - B$
 $\frac{0.42}{0.9} - A$ large

7) A B C D small $\frac{0.14}{0.2} - A$
 $\frac{0.28}{0.8} - C$ large

8) A B C D small $\frac{0.1}{0.35} - B$
 $\frac{0.61}{0.64} - C$ large

Answers

- Ex. A,B,C,D
1. B,D,A,C
2. A,D,C,B
3. D,C,A,B
4. B,D,A,A
5. A,C,D,B
6. B,C,A,D
7. A,B,C,D
8. B,D,C,A