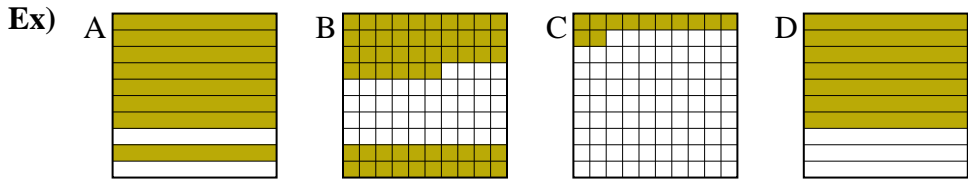




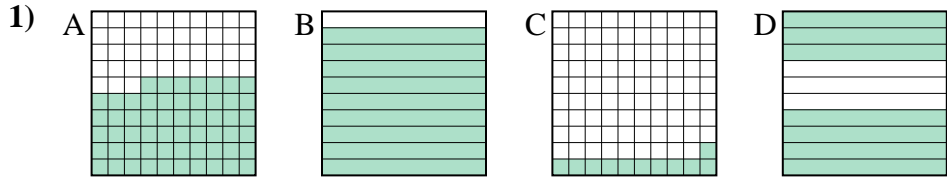
Put the boxes in order from least to greatest based on the shaded amount.

Answers



small 0.12 - C
0.56 - B
0.7 - D
 large 0.8 - A

Ex. C,B,D,A



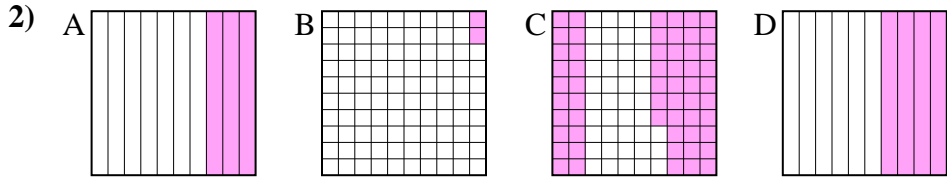
small _____

 large _____

1. _____

2. _____

3. _____

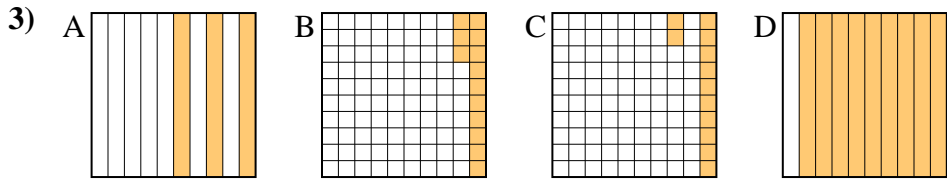


small _____

 large _____

4. _____

5. _____



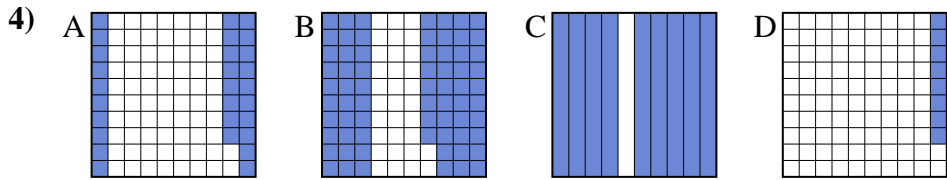
small _____

 large _____

6. _____

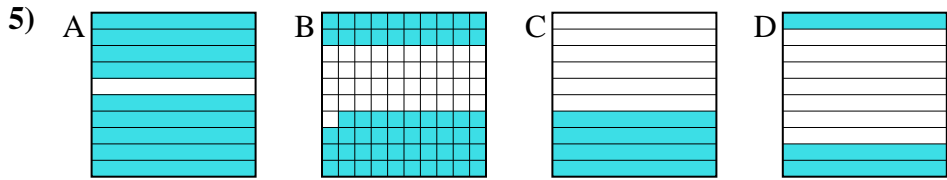
7. _____

8. _____



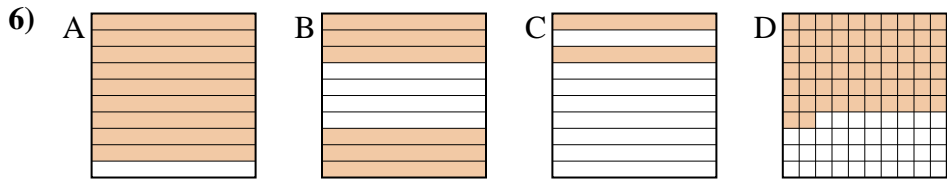
small _____

 large _____



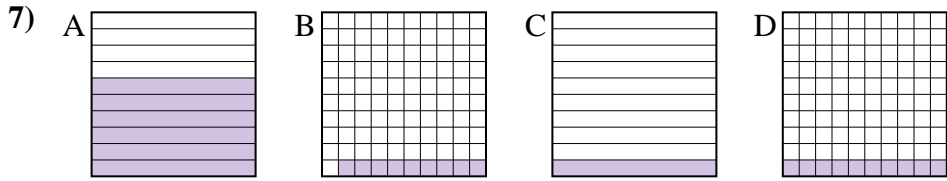
small _____

 large _____



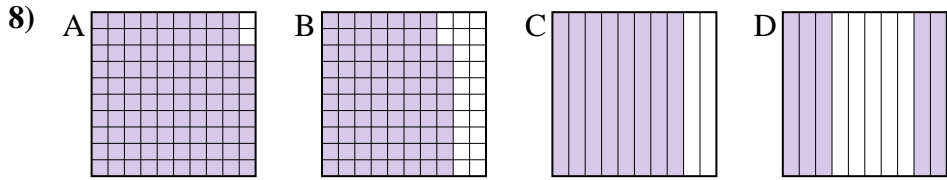
small _____

 large _____



small _____

 large _____



small _____

 large _____



Put the boxes in order from least to greatest based on the shaded amount.

Ex) A B C D

small $\frac{0.12 - C}{0.56 - B}$
large $\frac{0.7 - D}{0.8 - A}$

1) A B C D

small $\frac{0.11 - C}{0.57 - A}$
large $\frac{0.7 - D}{0.9 - B}$

2) A B C D

small $\frac{0.02 - B}{0.3 - A}$
large $\frac{0.4 - D}{0.57 - C}$

3) A B C D

small $\frac{0.12 - C}{0.13 - B}$
large $\frac{0.3 - A}{0.9 - D}$

4) A B C D

small $\frac{0.08 - D}{0.28 - A}$
large $\frac{0.68 - B}{0.9 - C}$

5) A B C D

small $\frac{0.3 - D}{0.4 - C}$
large $\frac{0.59 - B}{0.9 - A}$

6) A B C D

small $\frac{0.2 - C}{0.6 - B}$
large $\frac{0.62 - D}{0.9 - A}$

7) A B C D

small $\frac{0.09 - B}{0.1 - C}$
large $\frac{0.1 - C}{0.6 - A}$

8) A B C D

small $\frac{0.5 - D}{0.78 - B}$
large $\frac{0.8 - C}{0.98 - A}$

Answers

Ex. C,B,D,A

1. C,A,D,B

2. B,A,D,C

3. C,B,A,D

4. D,A,B,C

5. D,C,B,A

6. C,B,D,A

7. B,C,C,A

8. D,B,C,A