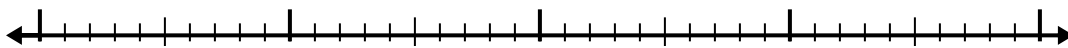


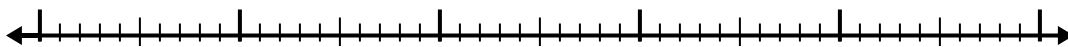


Use the number line to solve each problem.


1)  $7 - 2.6 =$



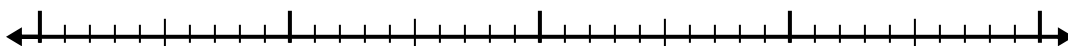
2)  $6.2 - 2.7 =$



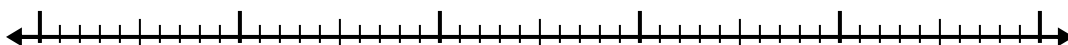
3)  $2.5 - 1.2 =$



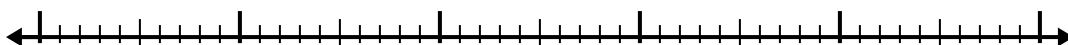
4)  $5.2 - 1.9 =$



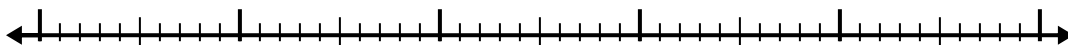
5)  $12.3 - 3.4 =$




6)  $11 - 2.7 =$



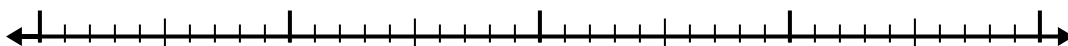
7)  $8 - 2.7 =$



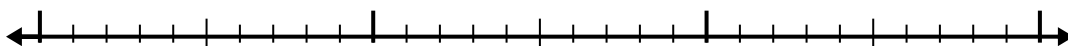
8)  $5 - 3.1 =$



9)  $10.9 - 2.3 =$



10)  $5.1 - 1.1 =$

**Answers**

1. \_\_\_\_\_

2. \_\_\_\_\_

3. \_\_\_\_\_

4. \_\_\_\_\_

5. \_\_\_\_\_

6. \_\_\_\_\_

7. \_\_\_\_\_

8. \_\_\_\_\_

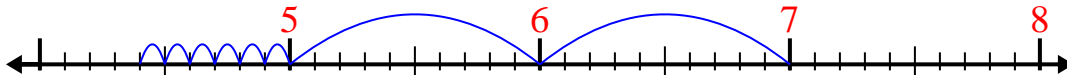
9. \_\_\_\_\_

10. \_\_\_\_\_

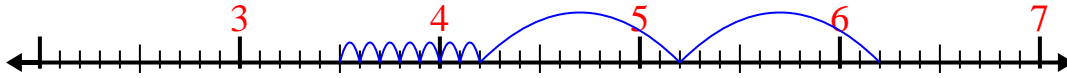


Use the number line to solve each problem.

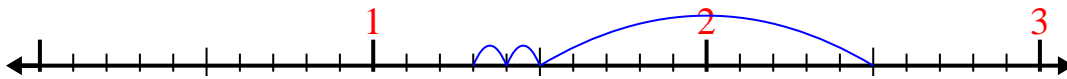
1)  $7 - 2.6 =$



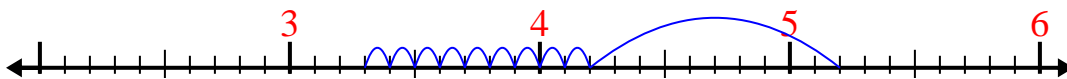
2)  $6.2 - 2.7 =$



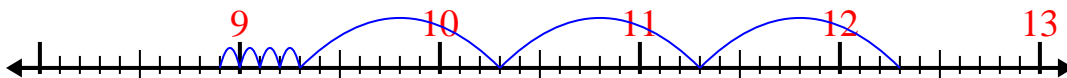
3)  $2.5 - 1.2 =$



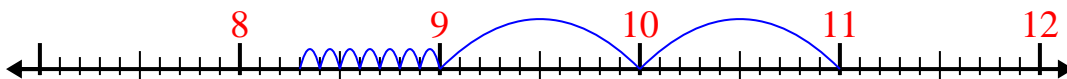
4)  $5.2 - 1.9 =$



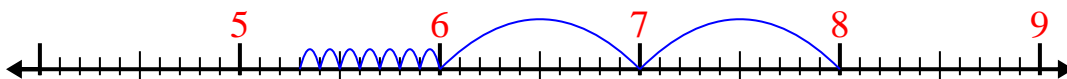
5)  $12.3 - 3.4 =$



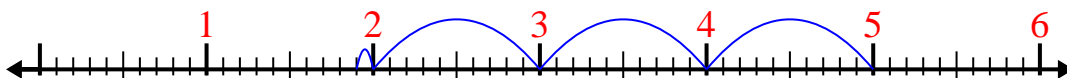
6)  $11 - 2.7 =$



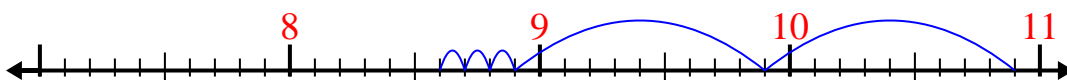
7)  $8 - 2.7 =$



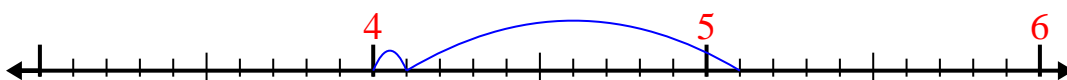
8)  $5 - 3.1 =$



9)  $10.9 - 2.3 =$



10)  $5.1 - 1.1 =$

Answers1. 4.42. 3.53. 1.34. 3.35. 8.96. 8.37. 5.38. 1.99. 8.610. 4