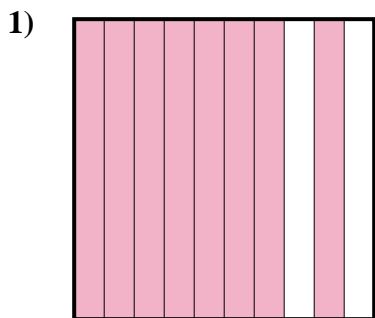


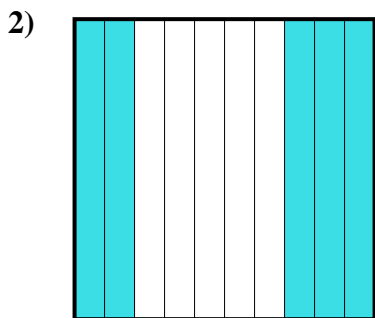


Determine which letter best represents the amount shaded of the whole.


Answers



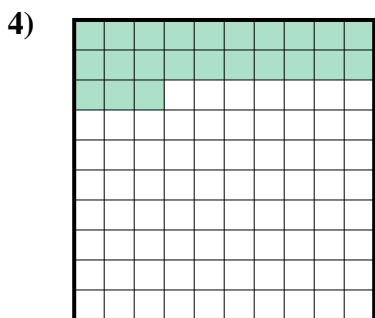
- A. 8
- B. 800.0
- C. 80
- D. 0.8



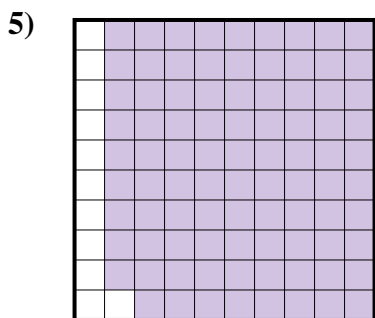
- A. 500.0
- B. 0.5
- C. 0.05
- D. 5



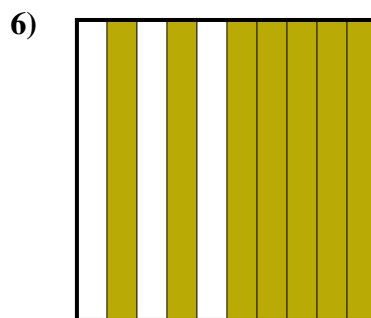
- A. 1
- B. 0.1
- C. 100.00
- D. 100.0



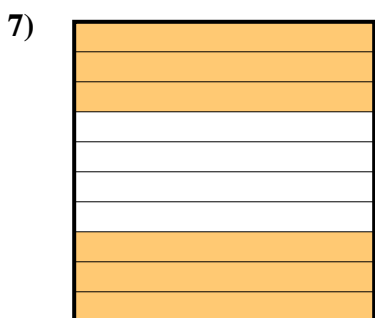
- A. 0.023
- B. 230.0
- C. 2.3
- D. 0.23




- A. 0.89
- B. 0.089
- C. 8.9
- D. 890.0



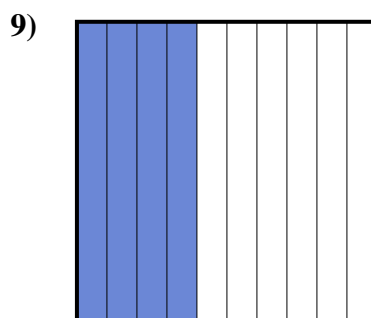
- A. 70
- B. 700.0
- C. 0.07
- D. 0.7



- A. 60
- B. 0.06
- C. 0.6
- D. 600.00



- A. 300.0
- B. 0.3
- C. 30
- D. 300.00



- A. 0.4
- B. 0.04
- C. 400.0
- D. 400.00

1. _____

2. _____

3. _____

4. _____

5. _____

6. _____

7. _____

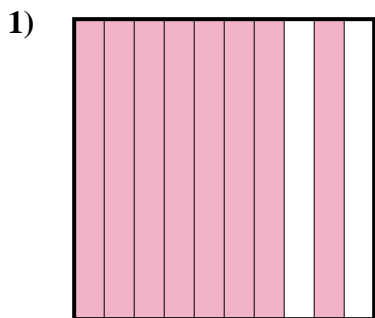
8. _____

9. _____

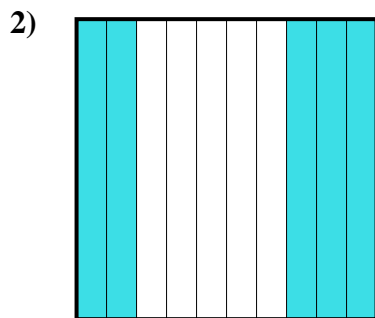


Determine which letter best represents the amount shaded of the whole.


Answers



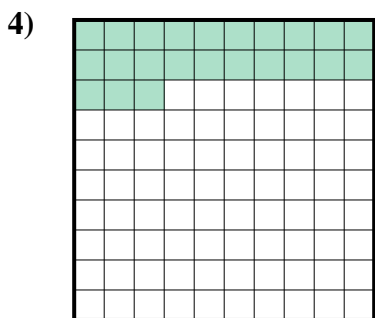
- A. 8
- B. 800.0
- C. 80
- D. 0.8



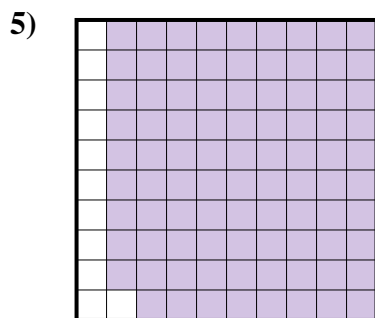
- A. 500.0
- B. 0.5
- C. 0.05
- D. 5



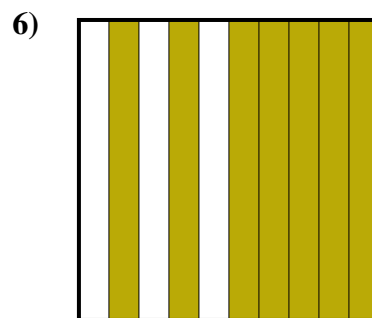
- A. 1
- B. 0.1
- C. 100.00
- D. 100.0



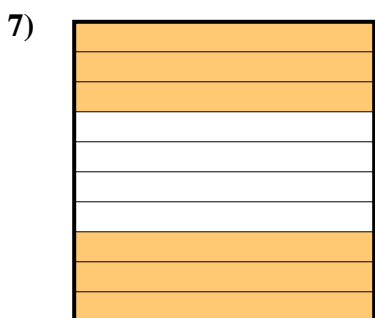
- A. 0.023
- B. 230.0
- C. 2.3
- D. 0.23




- A. 0.89
- B. 0.089
- C. 8.9
- D. 890.0



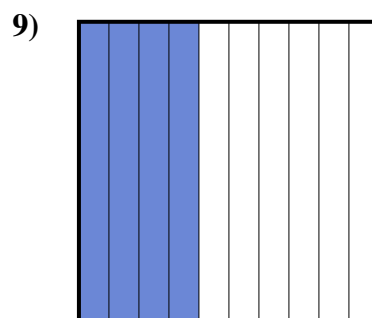
- A. 70
- B. 700.0
- C. 0.07
- D. 0.7



- A. 60
- B. 0.06
- C. 0.6
- D. 600.00



- A. 300.0
- B. 0.3
- C. 30
- D. 300.00



- A. 0.4
- B. 0.04
- C. 400.0
- D. 400.00

- 1. **D**
- 2. **B**
- 3. **B**
- 4. **D**
- 5. **A**
- 6. **D**
- 7. **C**
- 8. **B**
- 9. **A**