





Determine which letter best represents the amount shaded of the whole.


Answers



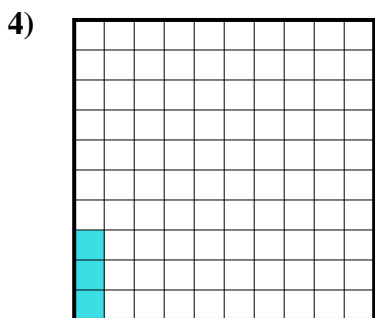
- A. 6
- B. 0.6
- C. 0.06
- D. 600.00



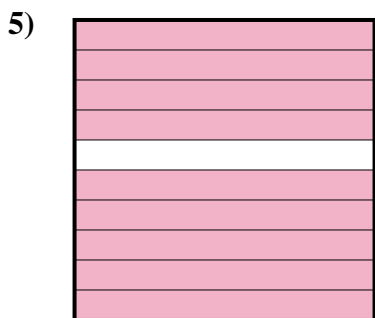
- A. 0.08
- B. 8
- C. 80
- D. 0.8



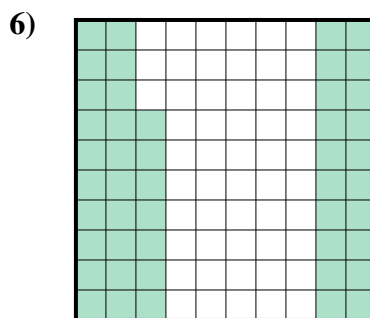
- A. 70
- B. 0.07
- C. 700.00
- D. 0.7



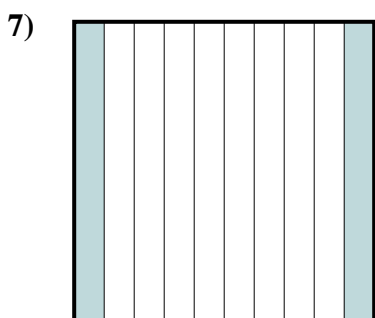
- A. 0.3
- B. 0.003
- C. 0.03
- D. 3



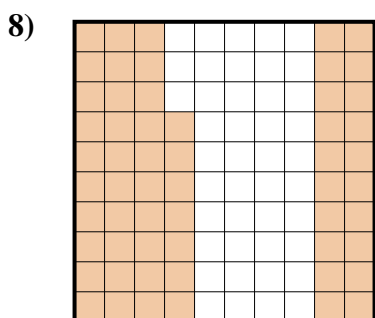
- A. 0.9
- B. 90
- C. 0.09
- D. 900.00




- A. 470.00
- B. 0.47
- C. 4.7
- D. 47



- A. 200.0
- B. 200.00
- C. 20
- D. 0.2



- A. 5.7
- B. 0.57
- C. 57
- D. 0.057



- A. 0.5
- B. 500.00
- C. 5
- D. 0.05

1. _____

2. _____

3. _____

4. _____

5. _____

6. _____


7. _____

8. _____


9. _____




Determine which letter best represents the amount shaded of the whole.



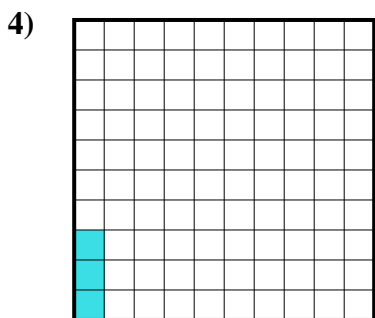
- A. 6
- B. 0.6
- C. 0.06
- D. 600.00



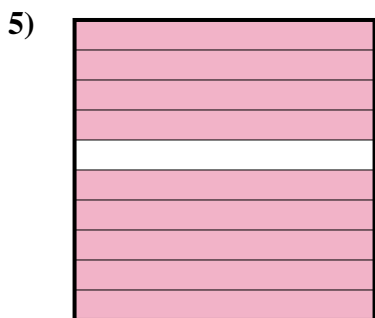
- A. 0.08
- B. 8
- C. 80
- D. 0.8



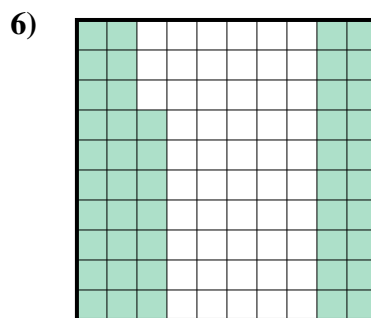
- A. 70
- B. 0.07
- C. 700.00
- D. 0.7



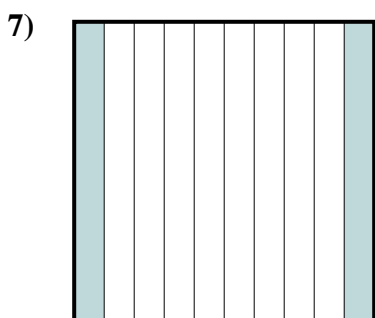
- A. 0.3
- B. 0.003
- C. 0.03
- D. 3



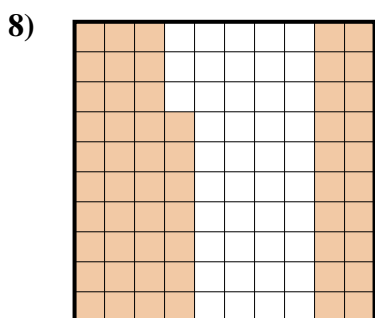
- A. 0.9
- B. 90
- C. 0.09
- D. 900.00




- A. 470.00
- B. 0.47
- C. 4.7
- D. 47



- A. 200.0
- B. 200.00
- C. 20
- D. 0.2



- A. 5.7
- B. 0.57
- C. 57
- D. 0.057



- A. 0.5
- B. 500.00
- C. 5
- D. 0.05

Answers

- 1. **B**
- 2. **D**
- 3. **D**
- 4. **C**
- 5. **A**
- 6. **B**
- 7. **D**
- 8. **B**
- 9. **A**