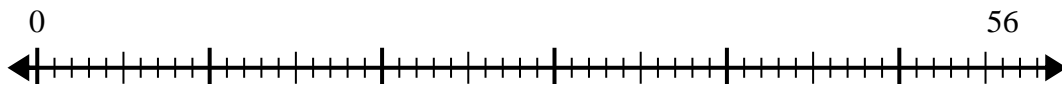




Use the number line to solve the division problem.

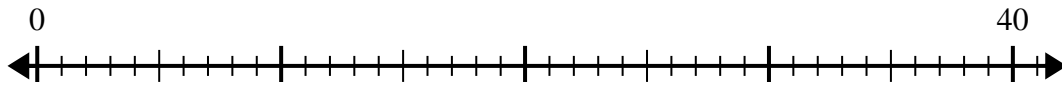
Answers

1)  $56 \div 7 =$



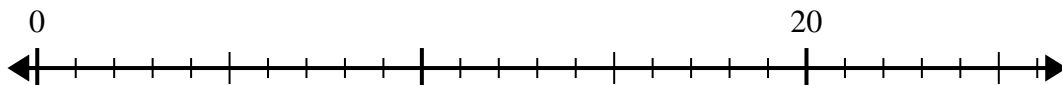
1. \_\_\_\_\_

2)  $40 \div 5 =$



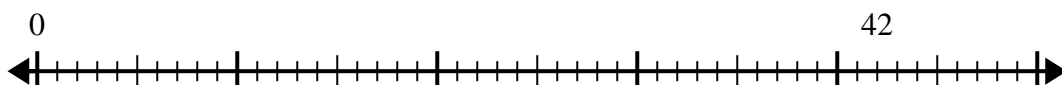
2. \_\_\_\_\_

3)  $20 \div 4 =$



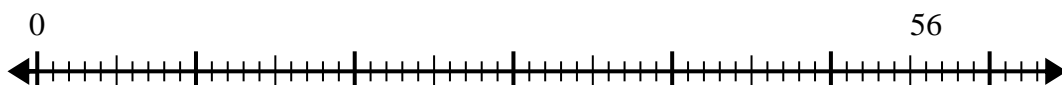
3. \_\_\_\_\_

4)  $42 \div 7 =$



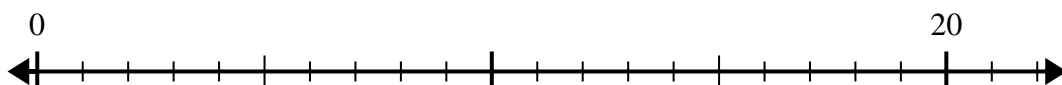
4. \_\_\_\_\_

5)  $56 \div 8 =$



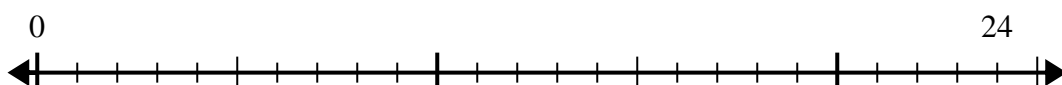
5. \_\_\_\_\_

6)  $20 \div 5 =$



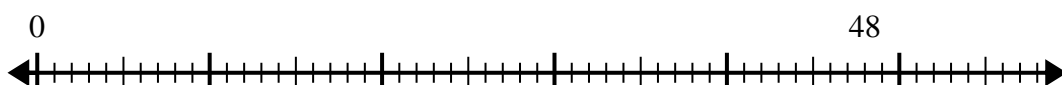
6. \_\_\_\_\_

7)  $24 \div 4 =$



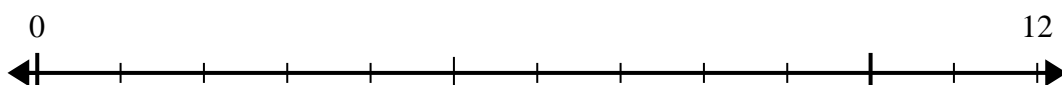
7. \_\_\_\_\_

8)  $48 \div 8 =$



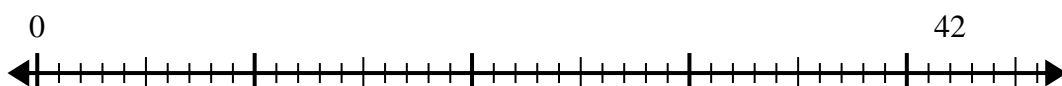
8. \_\_\_\_\_

9)  $12 \div 4 =$



9. \_\_\_\_\_

10)  $42 \div 6 =$

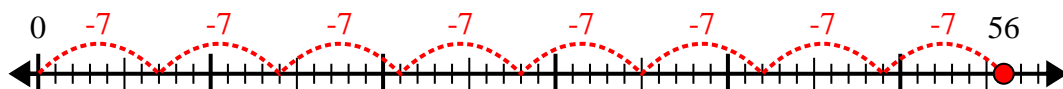


10. \_\_\_\_\_

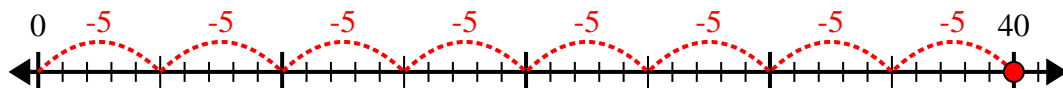


Use the number line to solve the division problem.

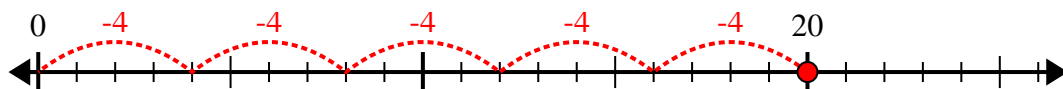
1)  $56 \div 7 =$



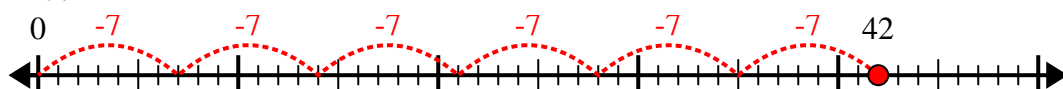
2)  $40 \div 5 =$



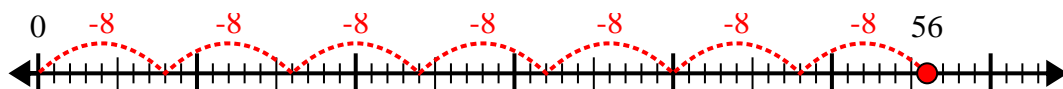
3)  $20 \div 4 =$



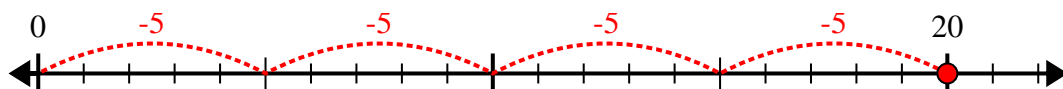
4)  $42 \div 7 =$



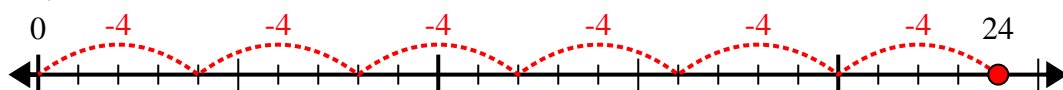
5)  $56 \div 8 =$



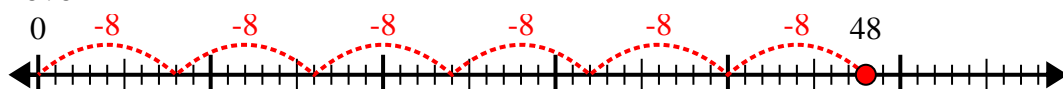
6)  $20 \div 5 =$



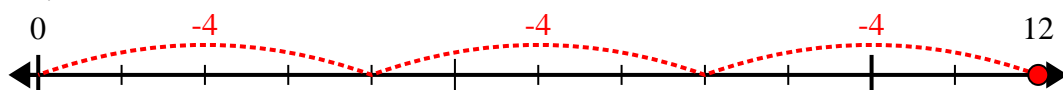
7)  $24 \div 4 =$



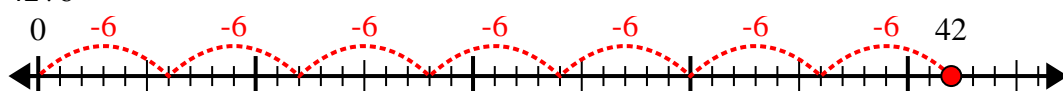
8)  $48 \div 8 =$



9)  $12 \div 4 =$



10)  $42 \div 6 =$



Answers

1. 8

2. 8

3. 5

4. 6

5. 7

6. 4

7. 6

8. 6

9. 3

10. 7