

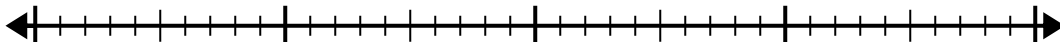


Use the number line to solve the division problem.

1)  $30 \div 6 =$

0

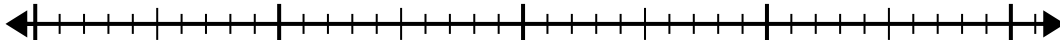
30



2)  $32 \div 4 =$

0

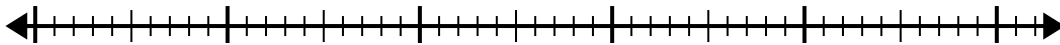
32



3)  $42 \div 7 =$

0

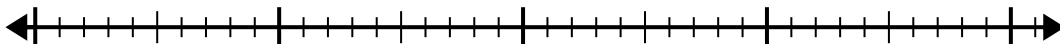
42



4)  $40 \div 5 =$

0

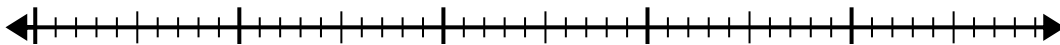
40



5)  $40 \div 8 =$

0

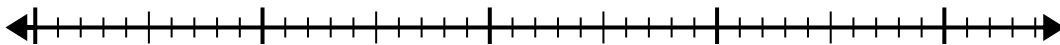
40



6)  $42 \div 6 =$

0

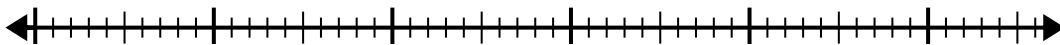
42



7)  $48 \div 6 =$

0

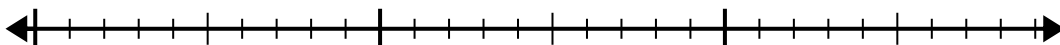
48



8)  $20 \div 4 =$

0

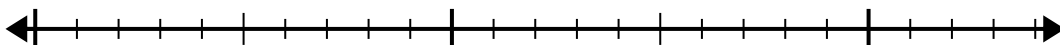
20



9)  $20 \div 5 =$

0

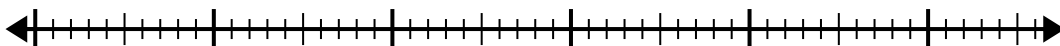
20



10)  $56 \div 8 =$

0

56

**Answers**

1. \_\_\_\_\_

2. \_\_\_\_\_

3. \_\_\_\_\_

4. \_\_\_\_\_

5. \_\_\_\_\_

6. \_\_\_\_\_

7. \_\_\_\_\_

8. \_\_\_\_\_

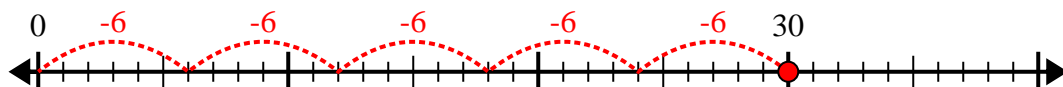
9. \_\_\_\_\_

10. \_\_\_\_\_

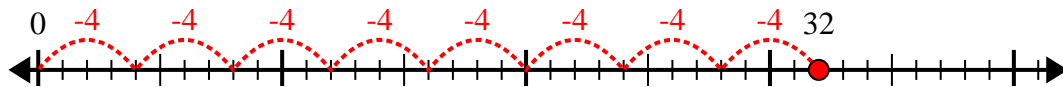


Use the number line to solve the division problem.

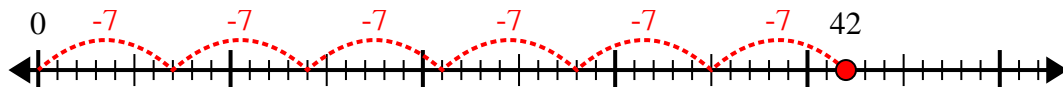
1)  $30 \div 6 =$



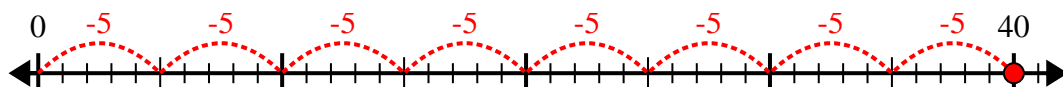
2)  $32 \div 4 =$



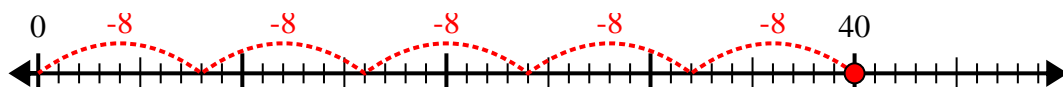
3)  $42 \div 7 =$



4)  $40 \div 5 =$



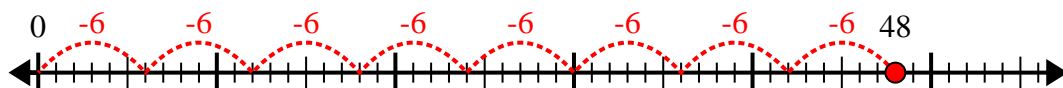
5)  $40 \div 8 =$



6)  $42 \div 6 =$



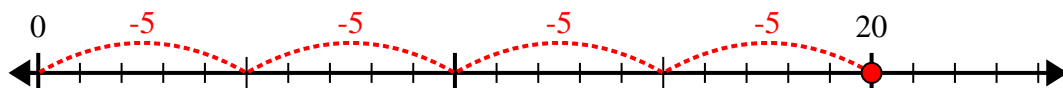
7)  $48 \div 6 =$



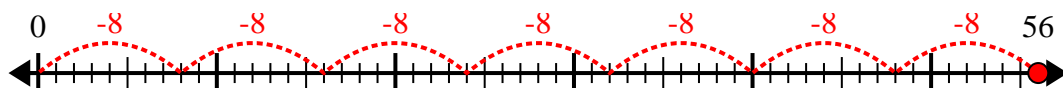
8)  $20 \div 4 =$



9)  $20 \div 5 =$



10)  $56 \div 8 =$



Answers

1. 5

2. 8

3. 6

4. 8

5. 5

6. 7

7. 8

8. 5

9. 4

10. 7