

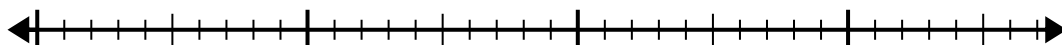


Use the number line to solve the division problem.

1) $30 \div 6 =$

0

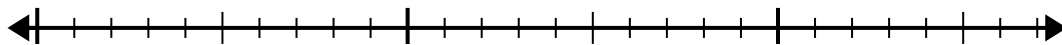
30



2) $18 \div 6 =$

0

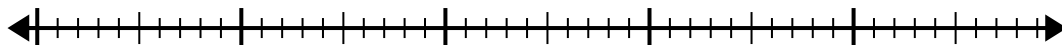
18



3) $40 \div 5 =$

0

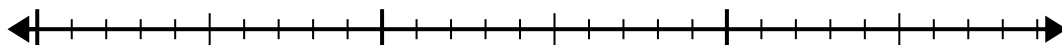
40



4) $20 \div 5 =$

0

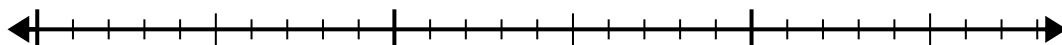
20



5) $20 \div 4 =$

0

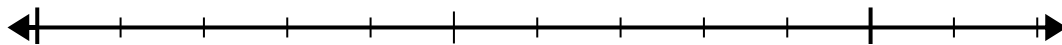
20



6) $12 \div 4 =$

0

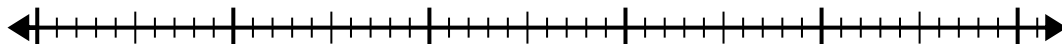
12



7) $42 \div 7 =$

0

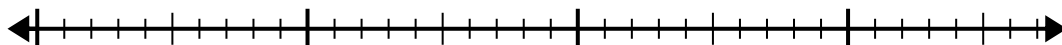
42



8) $32 \div 4 =$

0

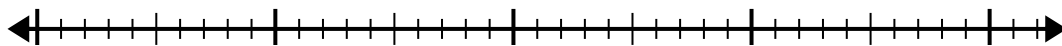
32



9) $35 \div 7 =$

0

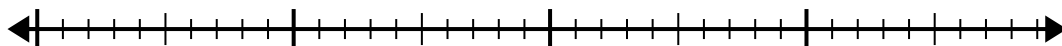
35



10) $32 \div 8 =$

0

32

**Answers**

1. _____

2. _____

3. _____

4. _____

5. _____

6. _____

7. _____

8. _____

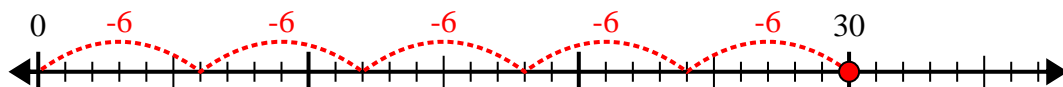
9. _____

10. _____

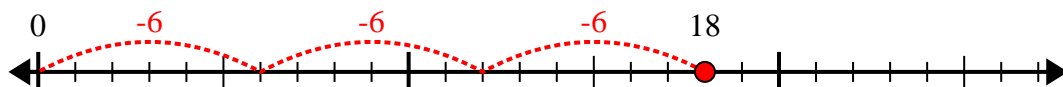


Use the number line to solve the division problem.

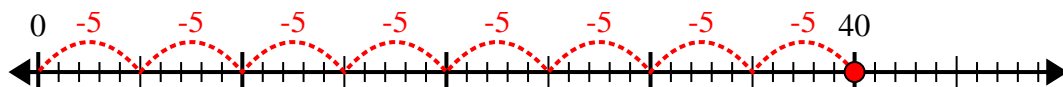
1) $30 \div 6 =$



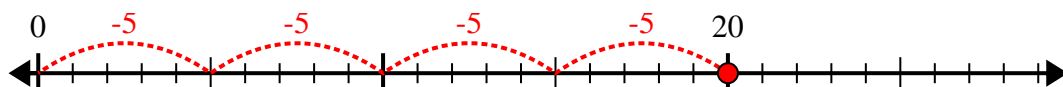
2) $18 \div 6 =$



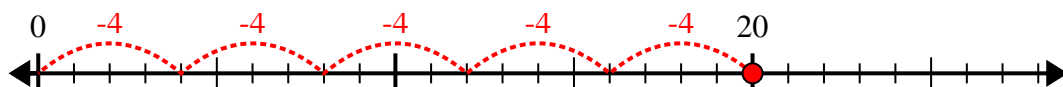
3) $40 \div 5 =$



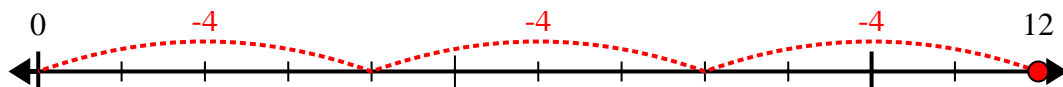
4) $20 \div 5 =$



5) $20 \div 4 =$



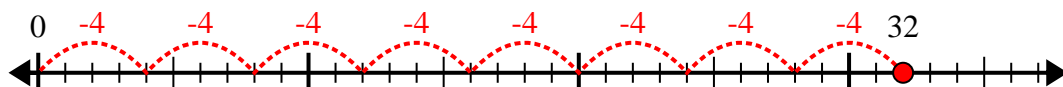
6) $12 \div 4 =$



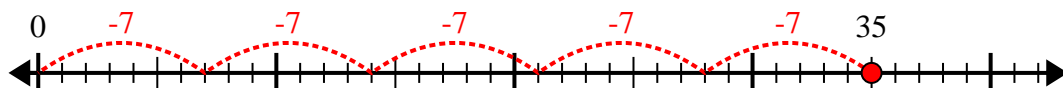
7) $42 \div 7 =$



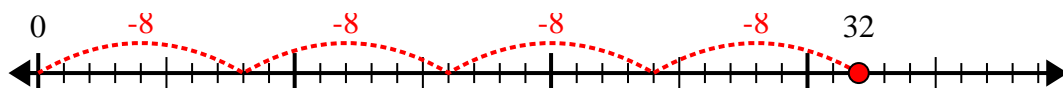
8) $32 \div 4 =$



9) $35 \div 7 =$



10) $32 \div 8 =$



Answers

1. 5

2. 3

3. 8

4. 4

5. 5

6. 3

7. 6

8. 8

9. 5

10. 4