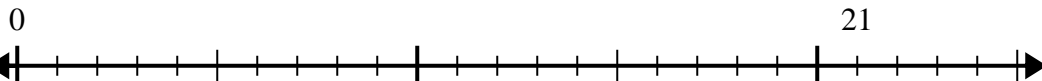


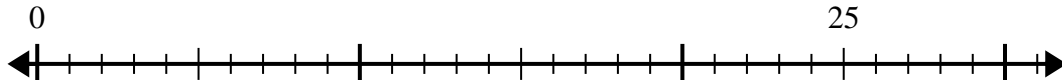


Use the number line to solve the division problem.

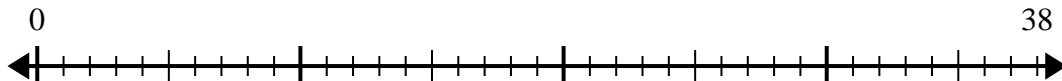
1) $21 \div 5 =$



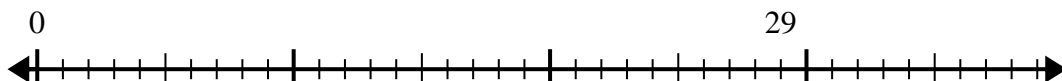
2) $25 \div 6 =$



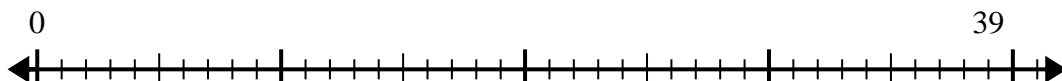
3) $38 \div 8 =$



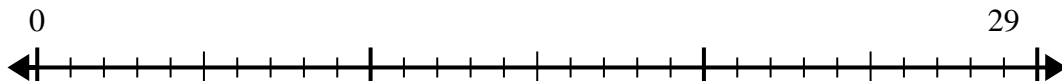
4) $29 \div 7 =$



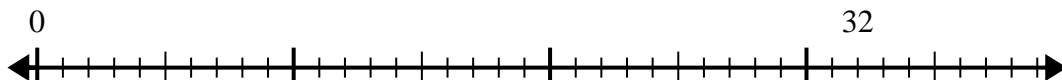
5) $39 \div 5 =$



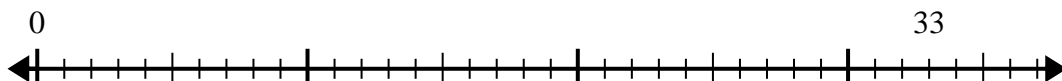
6) $29 \div 4 =$



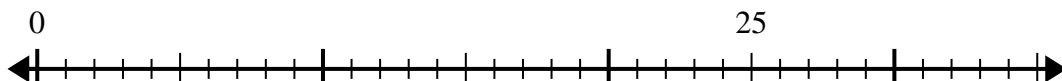
7) $32 \div 6 =$



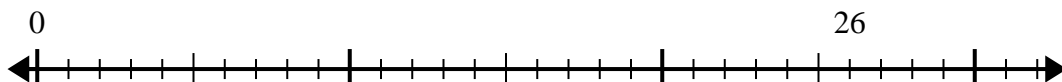
8) $33 \div 4 =$



9) $25 \div 4 =$



10) $26 \div 7 =$



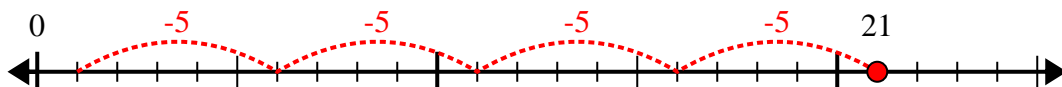
Answers

- 1. _____
- 2. _____
- 3. _____
- 4. _____
- 5. _____
- 6. _____
- 7. _____
- 8. _____
- 9. _____
- 10. _____

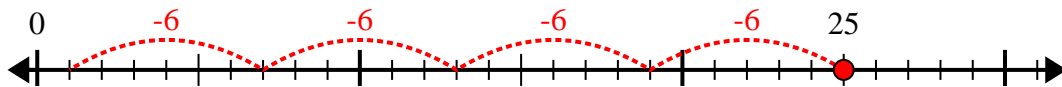


Use the number line to solve the division problem.

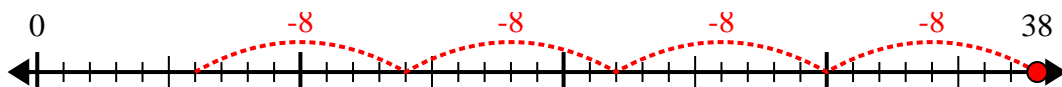
1) $21 \div 5 =$



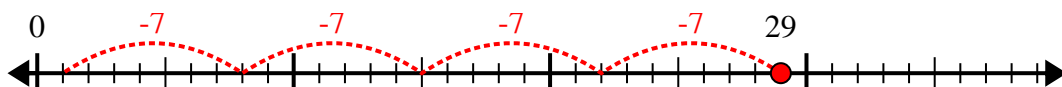
2) $25 \div 6 =$



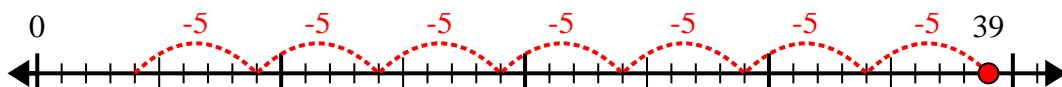
3) $38 \div 8 =$



4) $29 \div 7 =$



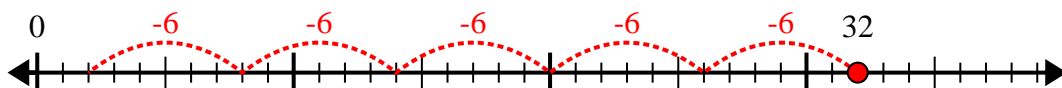
5) $39 \div 5 =$



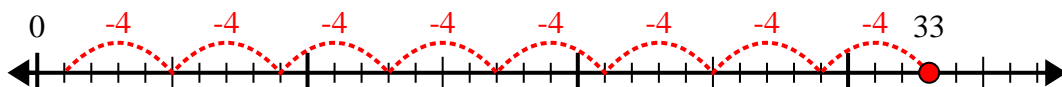
6) $29 \div 4 =$



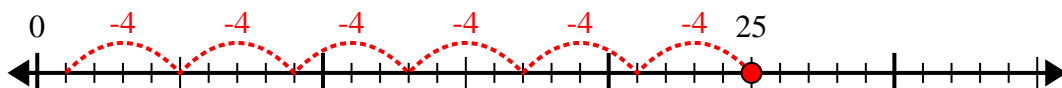
7) $32 \div 6 =$



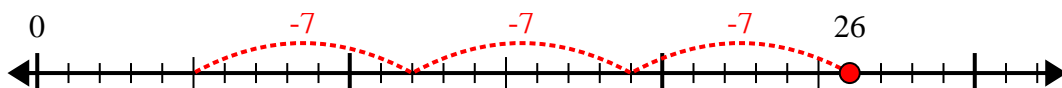
8) $33 \div 4 =$



9) $25 \div 4 =$



10) $26 \div 7 =$



Answers

1. 4r1

2. 4r1

3. 4r6

4. 4r1

5. 7r4

6. 7r1

7. 5r2

8. 8r1

9. 6r1

10. 3r5