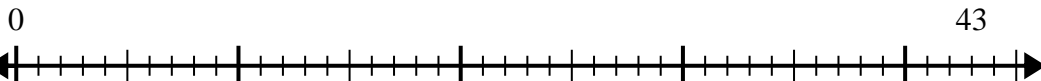


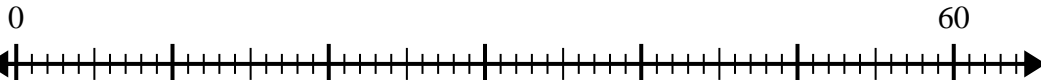


Use the number line to solve the division problem.

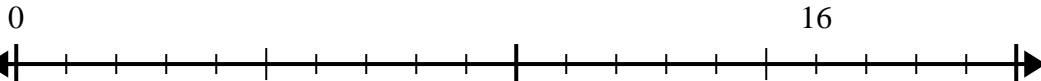
1)  $43 \div 5 =$



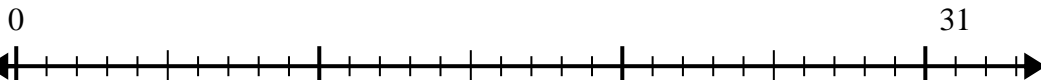
2)  $60 \div 7 =$



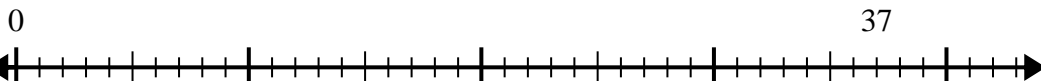
3)  $16 \div 5 =$



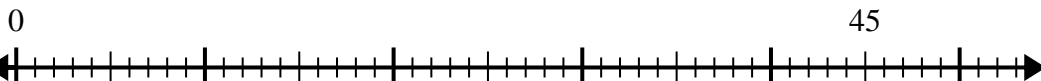
4)  $31 \div 4 =$



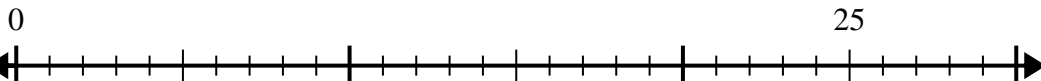
5)  $37 \div 7 =$



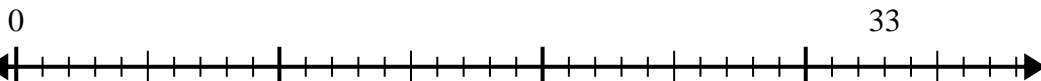
6)  $45 \div 8 =$



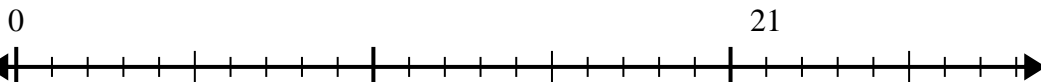
7)  $25 \div 4 =$



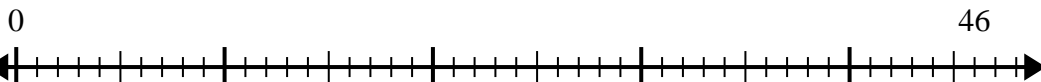
8)  $33 \div 5 =$



9)  $21 \div 4 =$



10)  $46 \div 6 =$



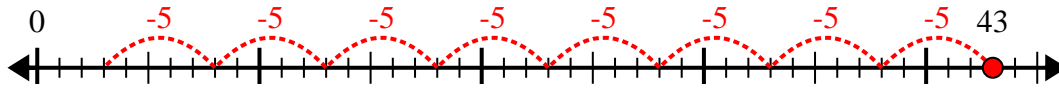
Answers

1. \_\_\_\_\_
2. \_\_\_\_\_
3. \_\_\_\_\_
4. \_\_\_\_\_
5. \_\_\_\_\_
6. \_\_\_\_\_
7. \_\_\_\_\_
8. \_\_\_\_\_
9. \_\_\_\_\_
10. \_\_\_\_\_

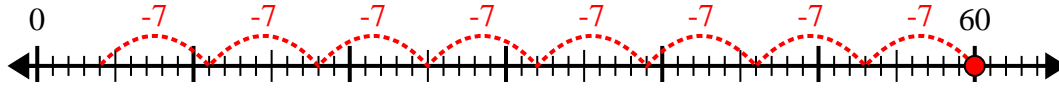


Use the number line to solve the division problem.

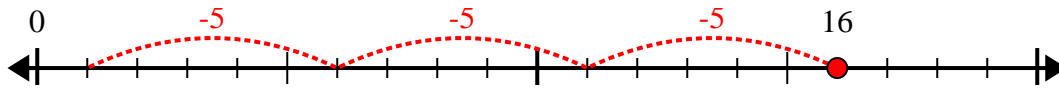
1)  $43 \div 5 =$



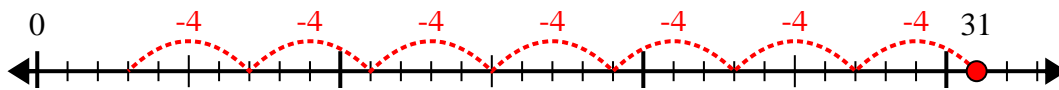
2)  $60 \div 7 =$



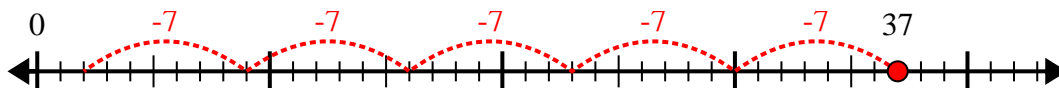
3)  $16 \div 5 =$



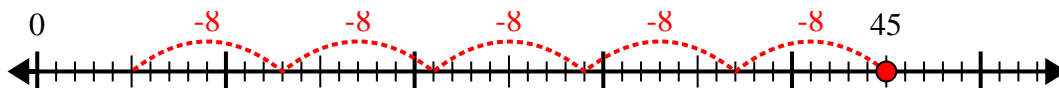
4)  $31 \div 4 =$



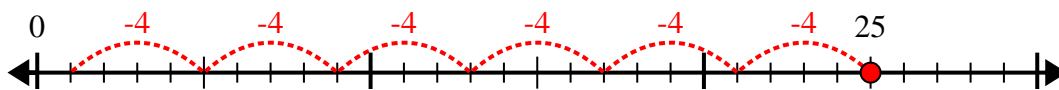
5)  $37 \div 7 =$



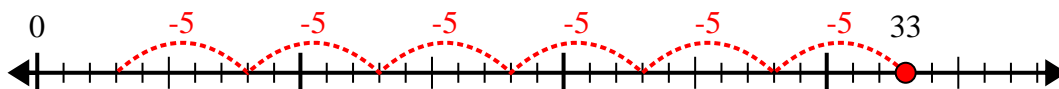
6)  $45 \div 8 =$



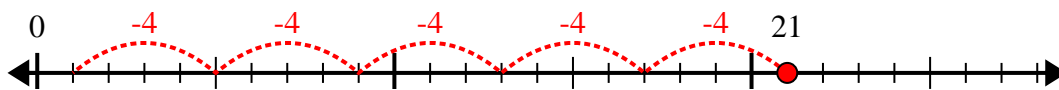
7)  $25 \div 4 =$



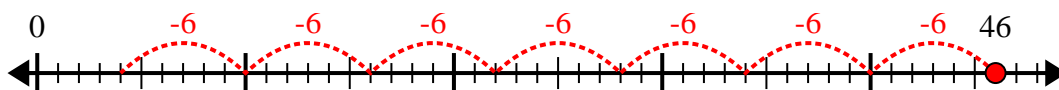
8)  $33 \div 5 =$



9)  $21 \div 4 =$



10)  $46 \div 6 =$



Answers

1. 8r3

2. 8r4

3. 3r1

4. 7r3

5. 5r2

6. 5r5

7. 6r1

8. 6r3

9. 5r1

10. 7r4