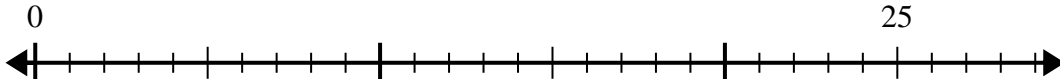


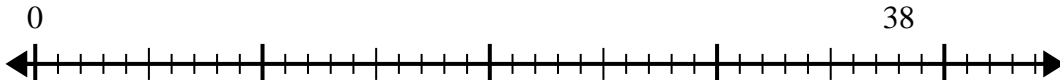


Use the number line to solve the division problem.

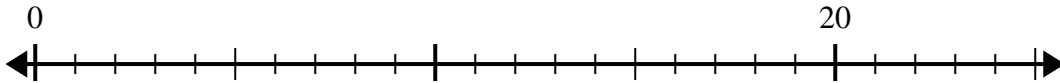
1) $25 \div 6 =$
0



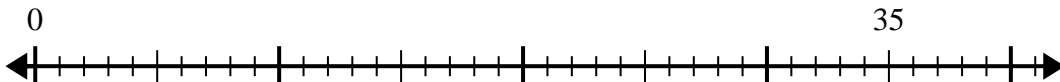
2) $38 \div 7 =$
0



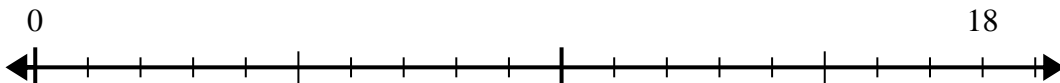
3) $20 \div 6 =$
0



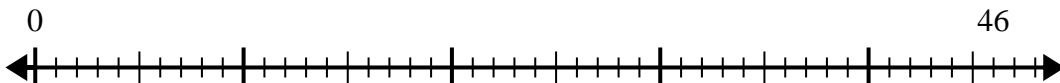
4) $35 \div 6 =$
0



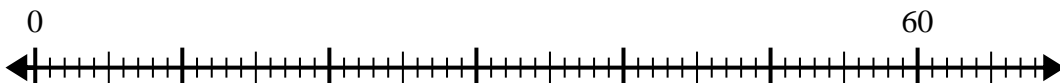
5) $18 \div 5 =$
0



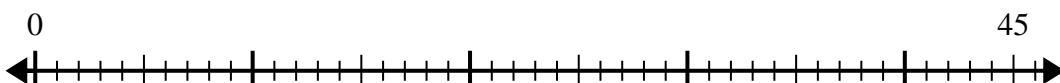
6) $46 \div 6 =$
0



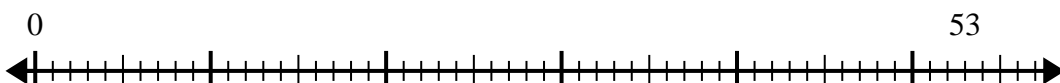
7) $60 \div 8 =$
0



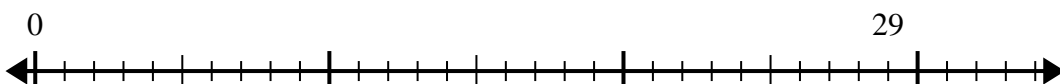
8) $45 \div 7 =$
0



9) $53 \div 8 =$
0



10) $29 \div 4 =$
0



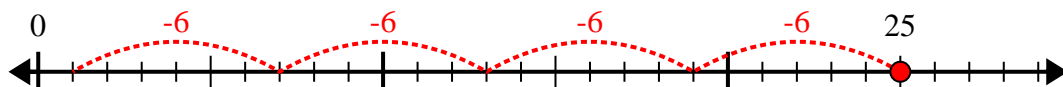
Answers

- 1. _____
- 2. _____
- 3. _____
- 4. _____
- 5. _____
- 6. _____
- 7. _____
- 8. _____
- 9. _____
- 10. _____

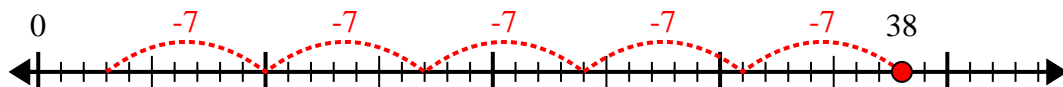


Use the number line to solve the division problem.

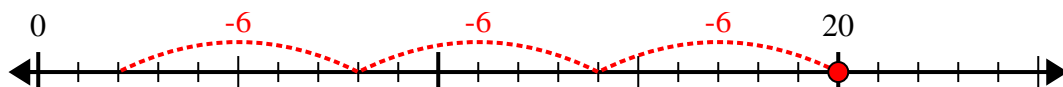
1) $25 \div 6 =$



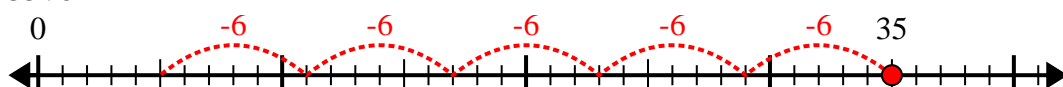
2) $38 \div 7 =$



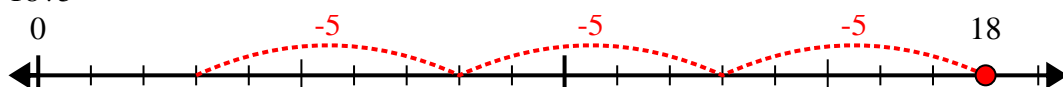
3) $20 \div 6 =$



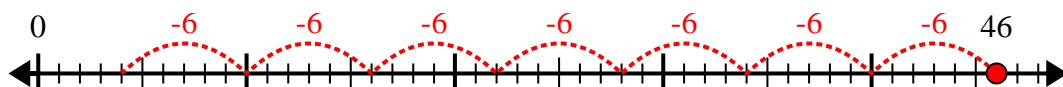
4) $35 \div 6 =$



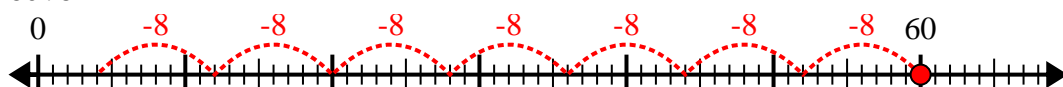
5) $18 \div 5 =$



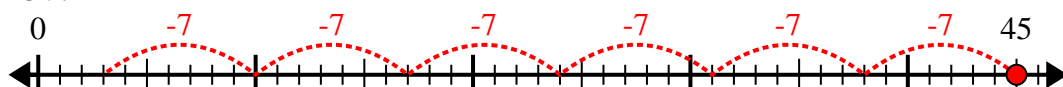
6) $46 \div 6 =$



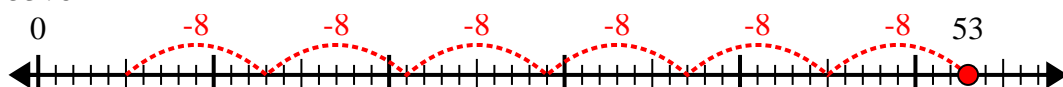
7) $60 \div 8 =$



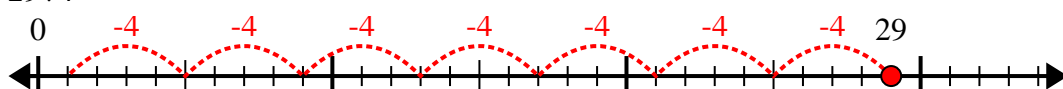
8) $45 \div 7 =$



9) $53 \div 8 =$



10) $29 \div 4 =$



Answers

1. 4r1

2. 5r3

3. 3r2

4. 5r5

5. 3r3

6. 7r4

7. 7r4

8. 6r3

9. 6r5

10. 7r1