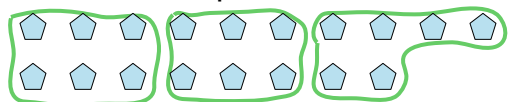




Use the shapes provided to answer the questions.

Answers


Ex) How many groups of 6 can you make with the 18 shapes below?



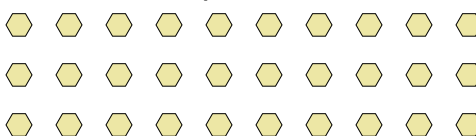
1) How many groups of 7 can you make with the 28 shapes below?




2) How many groups of 4 can you make with the 32 shapes below?



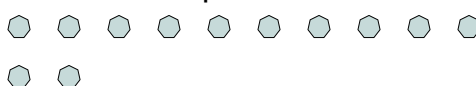
3) How many groups of 6 can you make with the 30 shapes below?



4) How many groups of 5 can you make with the 35 shapes below?



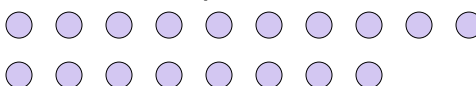
5) How many groups of 3 can you make with the 12 shapes below?




6) How many groups of 4 can you make with the 28 shapes below?




7) How many groups of 9 can you make with the 18 shapes below?




8) How many groups of 5 can you make with the 15 shapes below?




9) How many groups of 7 can you make with the 35 shapes below?



10) How many groups of 6 can you make with the 36 shapes below?



11) How many groups of 9 can you make with the 18 shapes below?

Ex. 3

1. _____

2. _____

3. _____

4. _____

5. _____

6. _____

7. _____

8. _____

9. _____

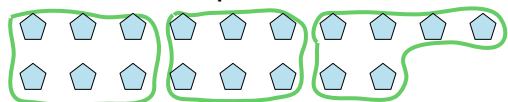
10. _____

11. _____




Use the shapes provided to answer the questions.


- Ex) How many groups of 6 can you make with the 18 shapes below?



- 2) How many groups of 4 can you make with the 32 shapes below?




- 4) How many groups of 5 can you make with the 35 shapes below?




- 6) How many groups of 4 can you make with the 28 shapes below?



- 8) How many groups of 5 can you make with the 15 shapes below?



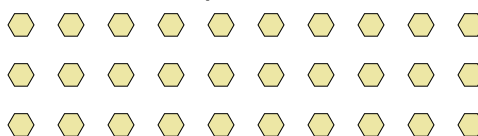
- 10) How many groups of 6 can you make with the 36 shapes below?



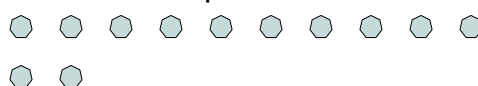
- 1) How many groups of 7 can you make with the 28 shapes below?



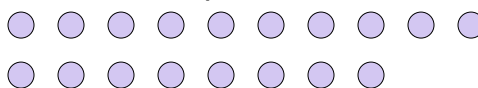
- 3) How many groups of 6 can you make with the 30 shapes below?




- 5) How many groups of 3 can you make with the 12 shapes below?



- 7) How many groups of 9 can you make with the 18 shapes below?



- 9) How many groups of 7 can you make with the 35 shapes below?



- 11) How many groups of 9 can you make with the 18 shapes below?

**Answers**Ex. 31. 42. 83. 54. 75. 46. 77. 28. 39. 510. 611. 2