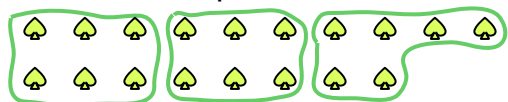





Use the shapes provided to answer the questions.

Answers

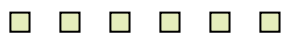
- Ex) How many groups of 6 can you make with the 18 shapes below?




- 1) How many groups of 8 can you make with the 40 shapes below?



- 2) How many groups of 2 can you make with the 6 shapes below?



- 3) How many groups of 3 can you make with the 27 shapes below?




- 4) How many groups of 8 can you make with the 16 shapes below?



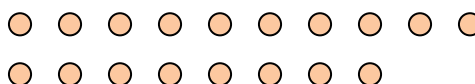
- 5) How many groups of 9 can you make with the 27 shapes below?



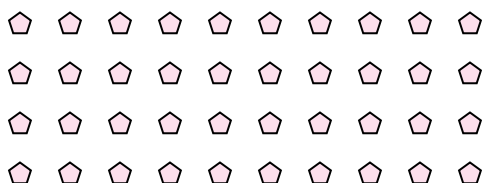
- 6) How many groups of 7 can you make with the 28 shapes below?



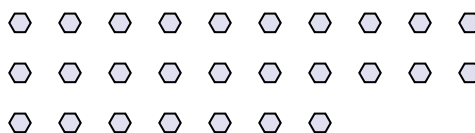
- 7) How many groups of 6 can you make with the 18 shapes below?



- 8) How many groups of 2 can you make with the 40 shapes below?



- 9) How many groups of 9 can you make with the 27 shapes below?



- 10) How many groups of 6 can you make with the 12 shapes below?



- 11) How many groups of 3 can you make with the 6 shapes below?

Ex. 3

1. _____

2. _____

3. _____

4. _____

5. _____

6. _____

7. _____

8. _____

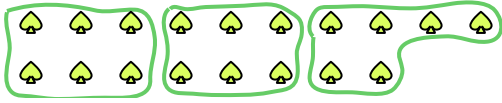

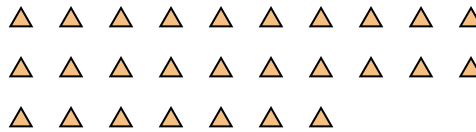

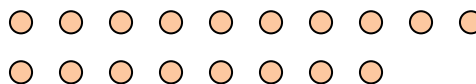
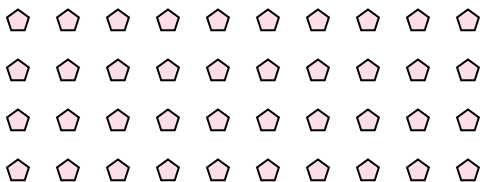
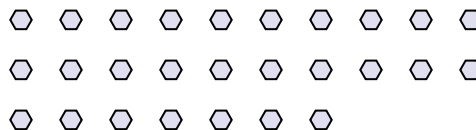
9. _____

10. _____

11. _____



Use the shapes provided to answer the questions.

Ex) How many groups of 6 can you make with the 18 shapes below?**1)** How many groups of 8 can you make with the 40 shapes below?**2)** How many groups of 2 can you make with the 6 shapes below?**3)** How many groups of 3 can you make with the 27 shapes below?**4)** How many groups of 8 can you make with the 16 shapes below?**5)** How many groups of 9 can you make with the 27 shapes below?**6)** How many groups of 7 can you make with the 28 shapes below?**7)** How many groups of 6 can you make with the 18 shapes below?**8)** How many groups of 2 can you make with the 40 shapes below?**9)** How many groups of 9 can you make with the 27 shapes below?**10)** How many groups of 6 can you make with the 12 shapes below?**11)** How many groups of 3 can you make with the 6 shapes below?**Answers**Ex. 31. 52. 33. 94. 25. 36. 47. 38. 209. 310. 211. 2