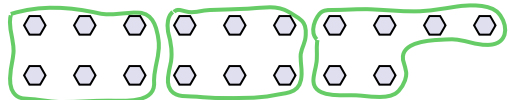






Use the shapes provided to answer the questions.

Ex) How many groups of 6 can you make with the 18 shapes below?




1) How many groups of 3 can you make with the 27 shapes below?

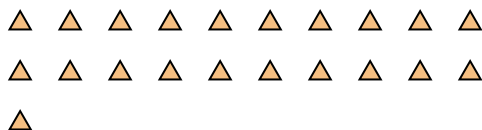


Ex. 3

2) How many groups of 3 can you make with the 33 shapes below?



3) How many groups of 7 can you make with the 21 shapes below?



1. 9

2. 11


3. 3

4. 2

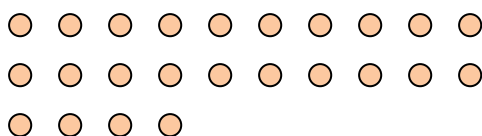
5. 3

6. 10

4) How many groups of 7 can you make with the 14 shapes below?



5) How many groups of 8 can you make with the 24 shapes below?

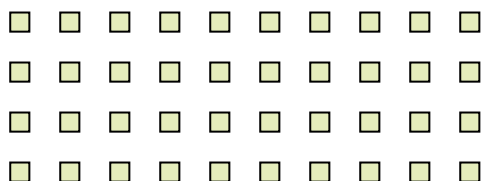


7. 4


8. 4

9. 4

6) How many groups of 4 can you make with the 40 shapes below?




7) How many groups of 8 can you make with the 32 shapes below?



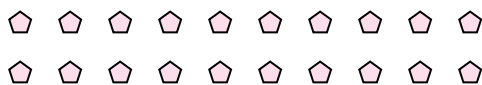
10. 3

11. 3

8) How many groups of 7 can you make with the 28 shapes below?



9) How many groups of 5 can you make with the 20 shapes below?



10) How many groups of 4 can you make with the 12 shapes below?



11) How many groups of 7 can you make with the 21 shapes below?

