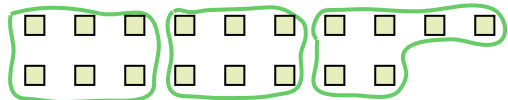







Use the shapes provided to answer the questions.

Ex) How many groups of 6 can you make with the 18 shapes below?




1) How many groups of 3 can you make with the 30 shapes below?




Ex. 3

2) How many groups of 4 can you make with the 28 shapes below?



3) How many groups of 2 can you make with the 40 shapes below?



1. 10

2. 7

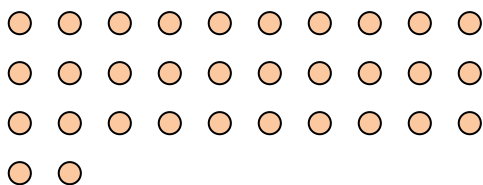
3. 20

4. 8

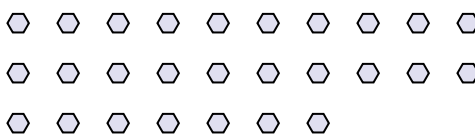
5. 3

6. 6

4) How many groups of 4 can you make with the 32 shapes below?



5) How many groups of 9 can you make with the 27 shapes below?



7. 12


8. 6

9. 9

6) How many groups of 6 can you make with the 36 shapes below?




7) How many groups of 3 can you make with the 36 shapes below?



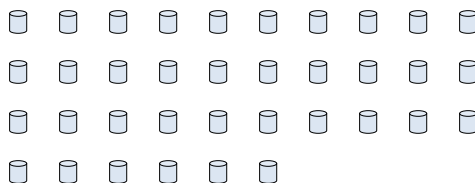
10. 19

11. 2


8) How many groups of 6 can you make with the 36 shapes below?



9) How many groups of 4 can you make with the 36 shapes below?



10) How many groups of 2 can you make with the 38 shapes below?



11) How many groups of 7 can you make with the 14 shapes below?

