



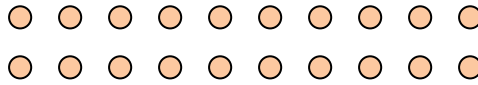
Use the shapes provided to answer the questions.

**Answers**

Ex) How many groups of 6 can you make with the 18 shapes below?



1) How many groups of 5 can you make with the 20 shapes below?




Ex. 3

2) How many groups of 3 can you make with the 9 shapes below?



3) How many groups of 9 can you make with the 18 shapes below?



1. \_\_\_\_\_

2. \_\_\_\_\_

3. \_\_\_\_\_

4. \_\_\_\_\_

5. \_\_\_\_\_

6. \_\_\_\_\_

7. \_\_\_\_\_

8. \_\_\_\_\_

9. \_\_\_\_\_

10. \_\_\_\_\_

11. \_\_\_\_\_


4) How many groups of 9 can you make with the 18 shapes below?



5) How many groups of 5 can you make with the 10 shapes below?



6) How many groups of 4 can you make with the 40 shapes below?



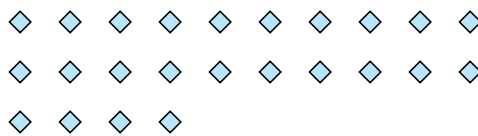
7) How many groups of 3 can you make with the 12 shapes below?




8) How many groups of 6 can you make with the 36 shapes below?



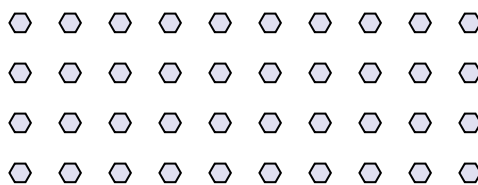
9) How many groups of 4 can you make with the 24 shapes below?



10) How many groups of 8 can you make with the 32 shapes below?



11) How many groups of 2 can you make with the 40 shapes below?



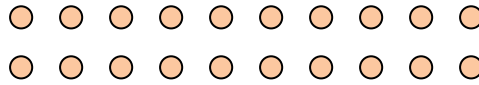


Use the shapes provided to answer the questions.

Ex) How many groups of 6 can you make with the 18 shapes below?




1) How many groups of 5 can you make with the 20 shapes below?



2) How many groups of 3 can you make with the 9 shapes below?



3) How many groups of 9 can you make with the 18 shapes below?



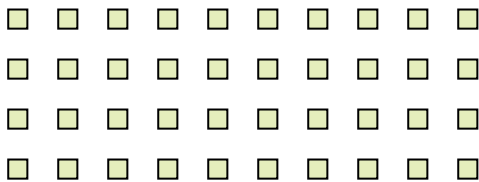
4) How many groups of 9 can you make with the 18 shapes below?



5) How many groups of 5 can you make with the 10 shapes below?



6) How many groups of 4 can you make with the 40 shapes below?



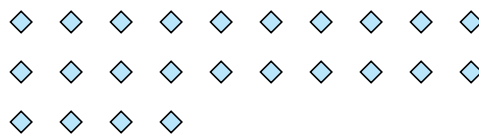
7) How many groups of 3 can you make with the 12 shapes below?




8) How many groups of 6 can you make with the 36 shapes below?



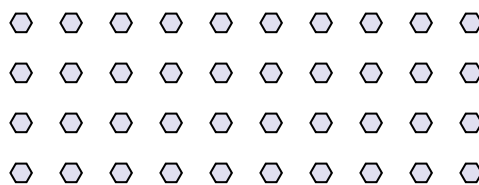
9) How many groups of 4 can you make with the 24 shapes below?



10) How many groups of 8 can you make with the 32 shapes below?



11) How many groups of 2 can you make with the 40 shapes below?



Answers

Ex. 3

1. 4

2. 3

3. 2

4. 2

5. 2

6. 10

7. 4

8. 6

9. 6

10. 4

11. 20