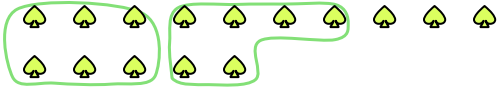





Use the shapes provided to answer the questions.

Answers

Ex) There are 15 shapes below. How many groups of 6 can you make with them? How many will you have left over?

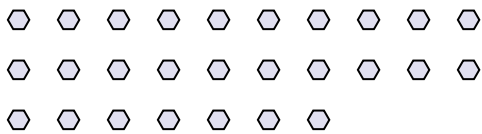


1) There are 16 shapes below. How many groups of 7 can you make with them? How many will you have left over?

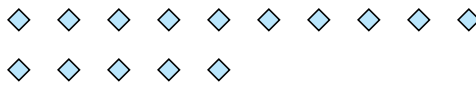


Ex. 2 3

2) There are 27 shapes below. How many groups of 5 can you make with them? How many will you have left over?



3) There are 15 shapes below. How many groups of 8 can you make with them? How many will you have left over?



1. _____

2. _____

3. _____

4. _____

5. _____

6. _____

7. _____

4) There are 23 shapes below. How many groups of 2 can you make with them? How many will you have left over?



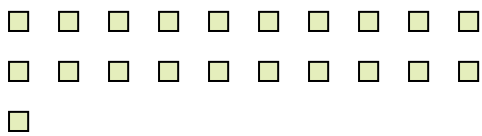
5) There are 11 shapes below. How many groups of 2 can you make with them? How many will you have left over?



8. _____

9. _____

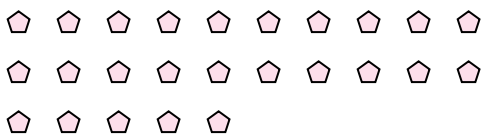
6) There are 21 shapes below. How many groups of 7 can you make with them? How many will you have left over?




7) There are 26 shapes below. How many groups of 5 can you make with them? How many will you have left over?



8) There are 25 shapes below. How many groups of 8 can you make with them? How many will you have left over?



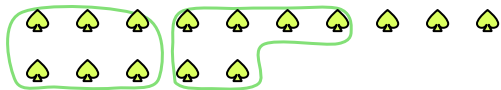
9) There are 30 shapes below. How many groups of 3 can you make with them? How many will you have left over?






Use the shapes provided to answer the questions.

Ex) There are 15 shapes below. How many groups of 6 can you make with them? How many will you have left over?



1) There are 16 shapes below. How many groups of 7 can you make with them? How many will you have left over?



Answers

Ex. 2 3

1. 2 2

2. 5 2

3. 1 7

4. 11 1

5. 5 1

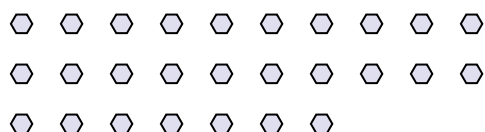
6. 3 0

7. 5 1

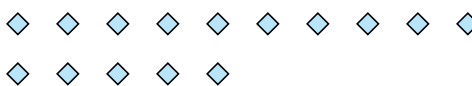
8. 3 1

9. 10 0

2) There are 27 shapes below. How many groups of 5 can you make with them? How many will you have left over?



3) There are 15 shapes below. How many groups of 8 can you make with them? How many will you have left over?



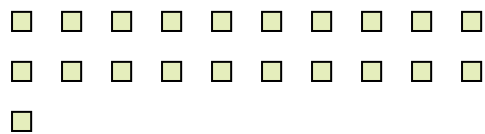
4) There are 23 shapes below. How many groups of 2 can you make with them? How many will you have left over?



5) There are 11 shapes below. How many groups of 2 can you make with them? How many will you have left over?



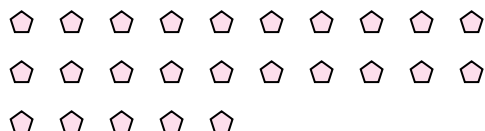
6) There are 21 shapes below. How many groups of 7 can you make with them? How many will you have left over?



7) There are 26 shapes below. How many groups of 5 can you make with them? How many will you have left over?



8) There are 25 shapes below. How many groups of 8 can you make with them? How many will you have left over?



9) There are 30 shapes below. How many groups of 3 can you make with them? How many will you have left over?

