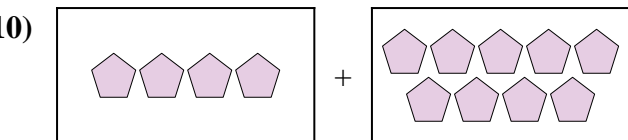
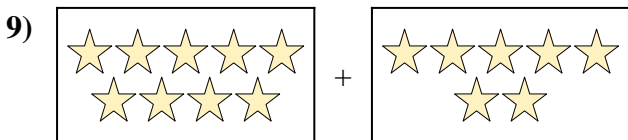
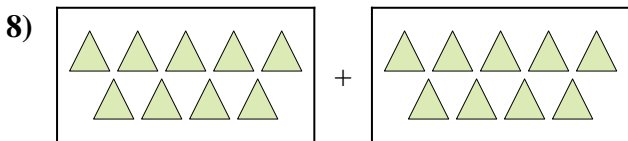

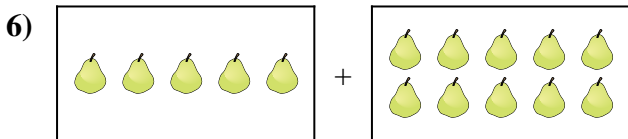
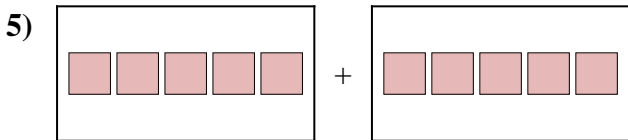
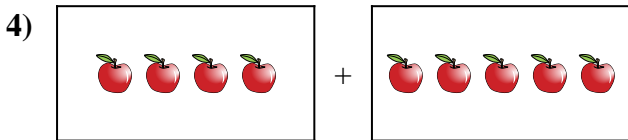

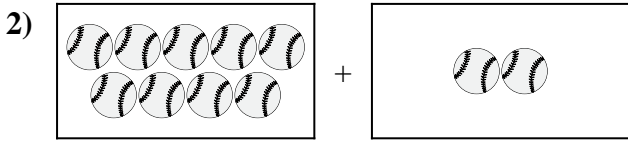
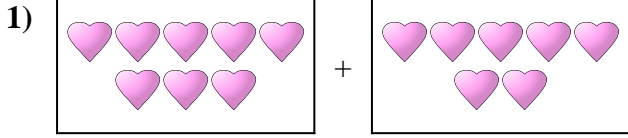




Express the visual problem as an equation with answer.

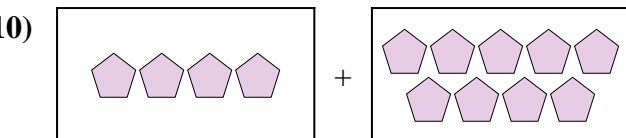
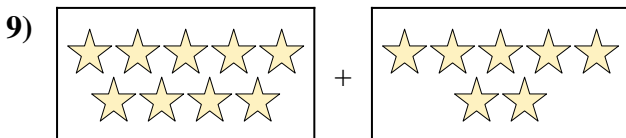
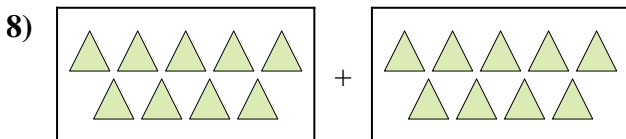

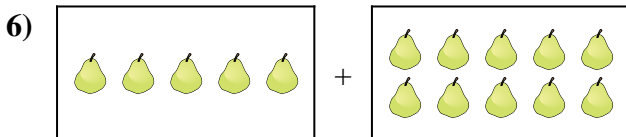
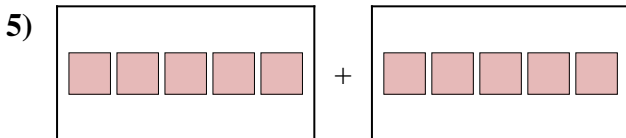
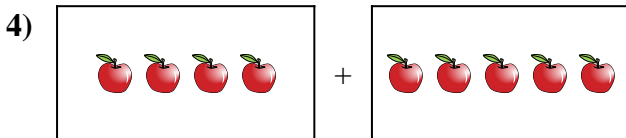

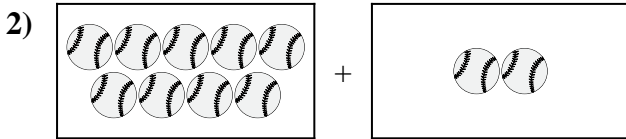

Answers



1. \_\_\_\_\_
2. \_\_\_\_\_
3. \_\_\_\_\_
4. \_\_\_\_\_
5. \_\_\_\_\_
6. \_\_\_\_\_
7. \_\_\_\_\_
8. \_\_\_\_\_
9. \_\_\_\_\_
10. \_\_\_\_\_



Express the visual problem as an equation with answer.



Answers

1.  $8 + 7 = 15$

2.  $9 + 2 = 11$

3.  $8 + 7 = 15$

4.  $4 + 5 = 9$

5.  $5 + 5 = 10$

6.  $5 + 10 = 15$

7.  $5 + 7 = 12$

8.  $9 + 9 = 18$

9.  $9 + 7 = 16$

10.  $4 + 9 = 13$