
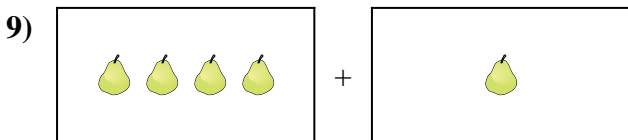
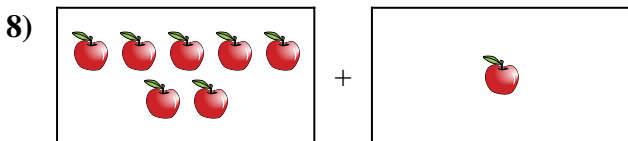
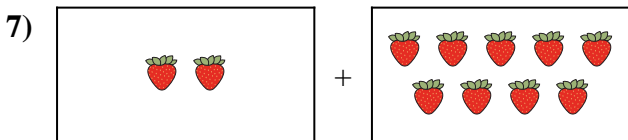
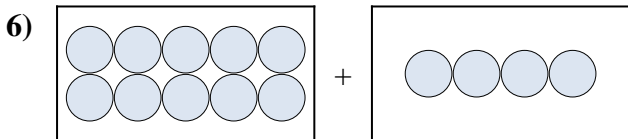
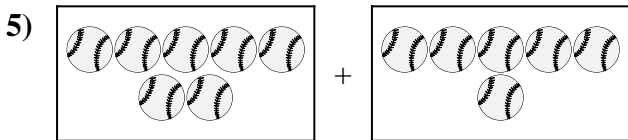
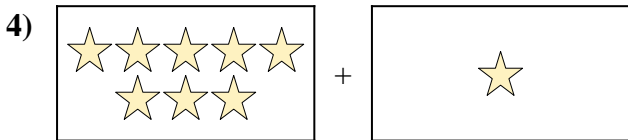
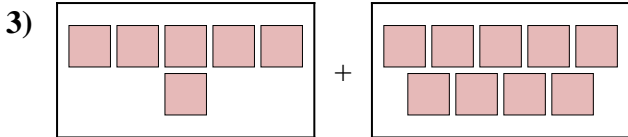
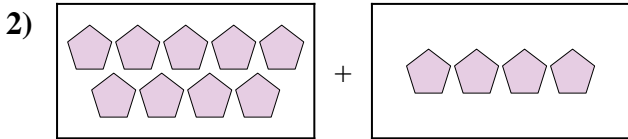
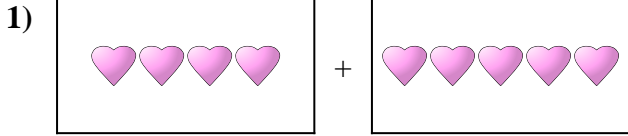




Express the visual problem as an equation with answer.


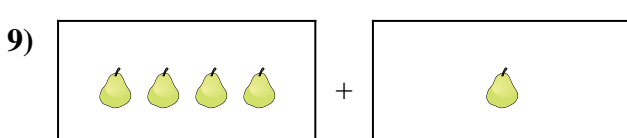
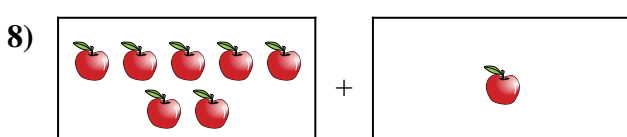
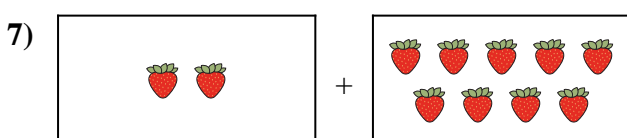
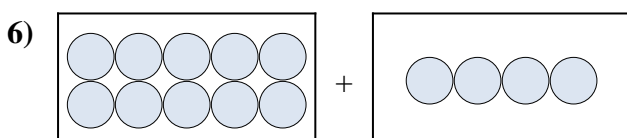
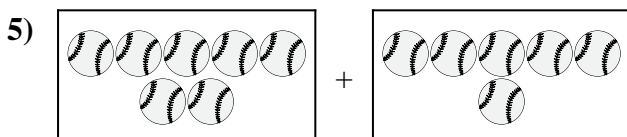
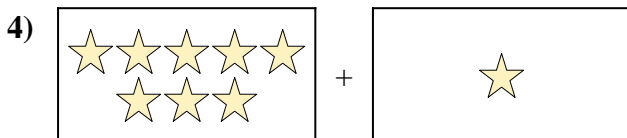
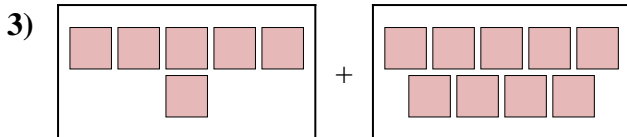
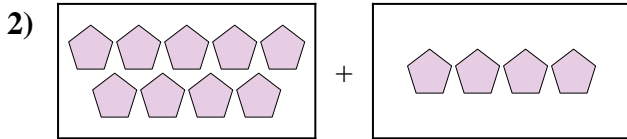
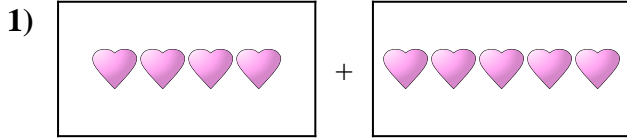
Answers



1. \_\_\_\_\_
2. \_\_\_\_\_
3. \_\_\_\_\_
4. \_\_\_\_\_
5. \_\_\_\_\_
6. \_\_\_\_\_
7. \_\_\_\_\_
8. \_\_\_\_\_
9. \_\_\_\_\_
10. \_\_\_\_\_



Express the visual problem as an equation with answer.



Answers

1.  $4 + 5 = 9$

2.  $9 + 4 = 13$

3.  $6 + 9 = 15$

4.  $8 + 1 = 9$

5.  $7 + 6 = 13$

6.  $10 + 4 = 14$

7.  $2 + 9 = 11$

8.  $7 + 1 = 8$

9.  $4 + 1 = 5$

10.  $5 + 6 = 11$