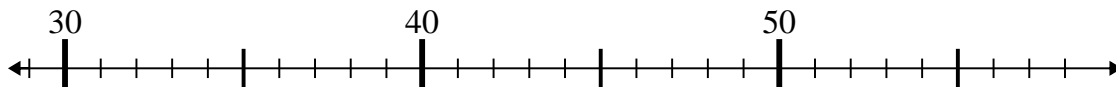




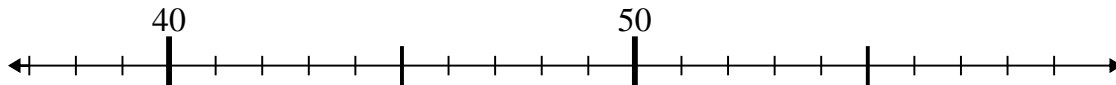
Use the numberlines to solve each problem.

Answers

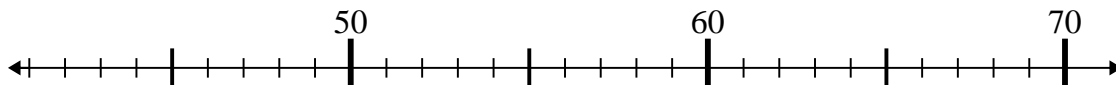
1)  $38 + 7 =$



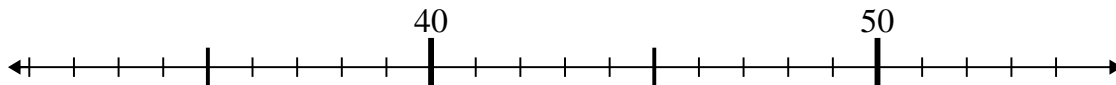
2)  $57 - 6 =$



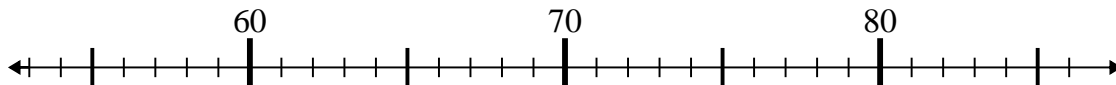
3)  $47 - 0 =$



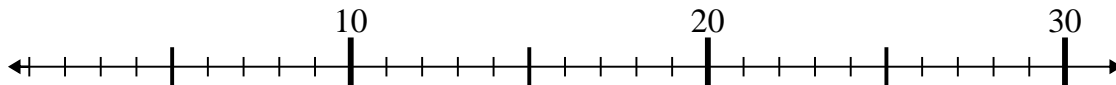
4)  $34 + 16 =$



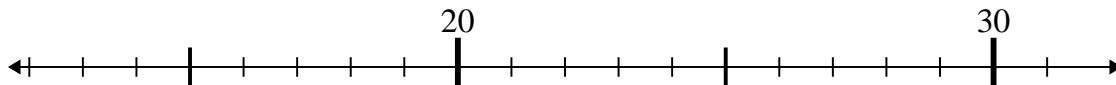
5)  $76 - 17 =$



6)  $7 + 9 =$



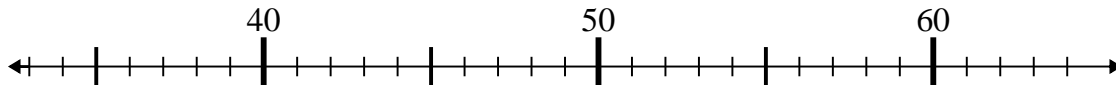
7)  $29 - 7 =$



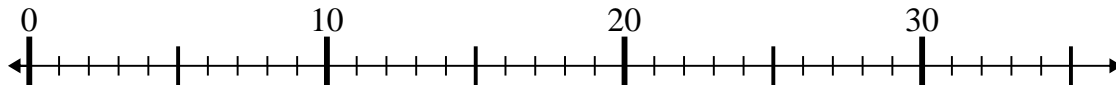
8)  $71 - 7 =$



9)  $37 + 24 =$



10)  $3 + 5 =$

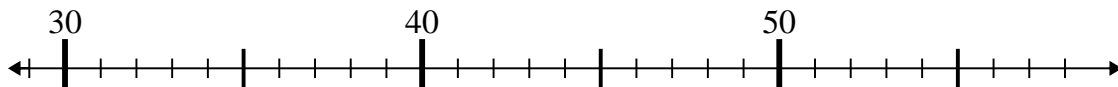


1. \_\_\_\_\_
2. \_\_\_\_\_
3. \_\_\_\_\_
4. \_\_\_\_\_
5. \_\_\_\_\_
6. \_\_\_\_\_
7. \_\_\_\_\_
8. \_\_\_\_\_
9. \_\_\_\_\_
10. \_\_\_\_\_

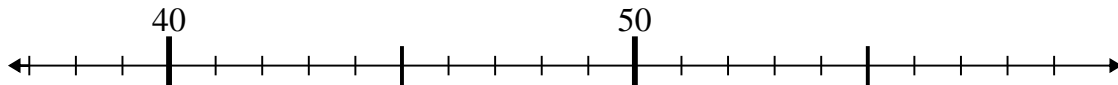


Use the numberlines to solve each problem.

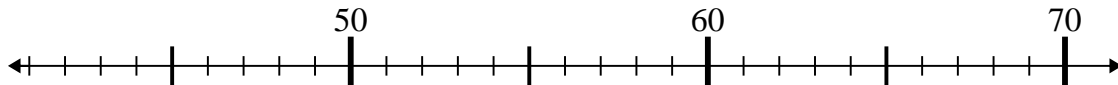
1)  $38 + 7 =$



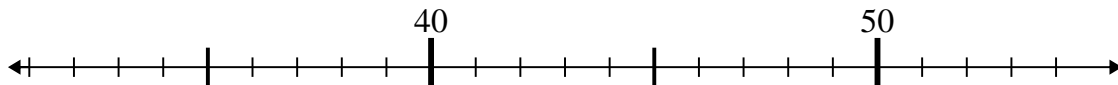
2)  $57 - 6 =$



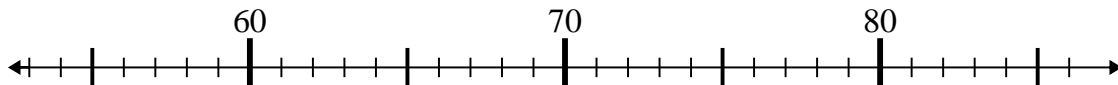
3)  $47 - 0 =$



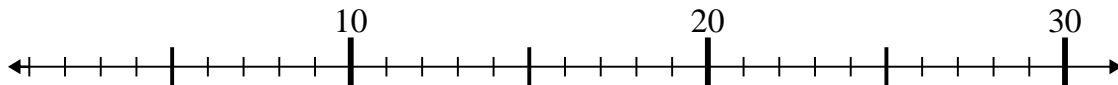
4)  $34 + 16 =$



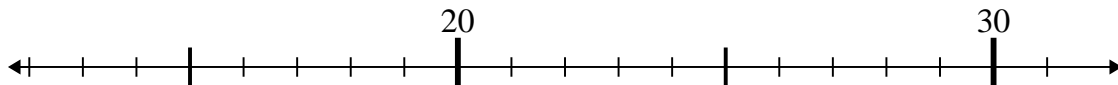
5)  $76 - 17 =$



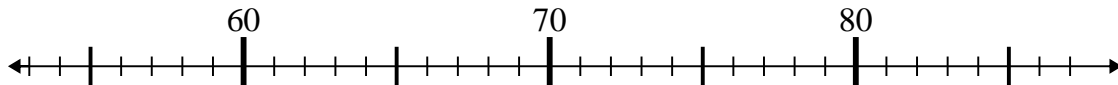
6)  $7 + 9 =$



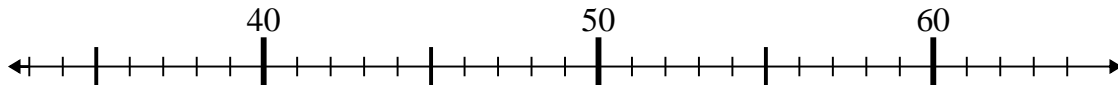
7)  $29 - 7 =$



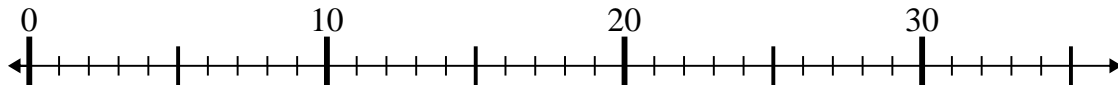
8)  $71 - 7 =$



9)  $37 + 24 =$



10)  $3 + 5 =$



Answers

1. 45

2. 51

3. 47

4. 50

5. 59

6. 16

7. 22

8. 64

9. 61

10. 8