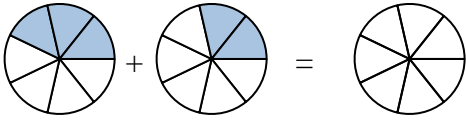




Shade in the fraction to solve the problem.

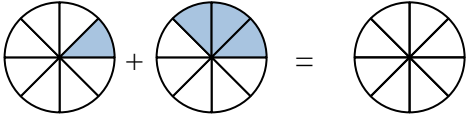
**Answers**

Ex)



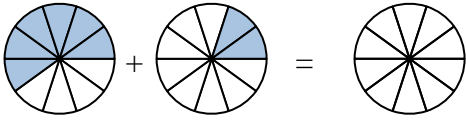
Ex.  $\frac{3}{7}$     $\frac{2}{7}$     $\frac{5}{7}$

1)



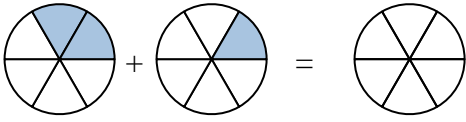
1. \_\_\_\_\_

2)



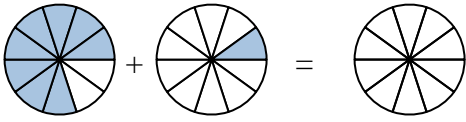
2. \_\_\_\_\_

3)



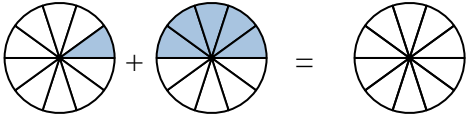
3. \_\_\_\_\_

4)



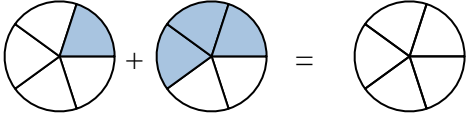
4. \_\_\_\_\_

5)



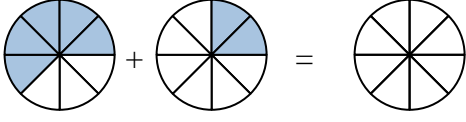
5. \_\_\_\_\_

6)



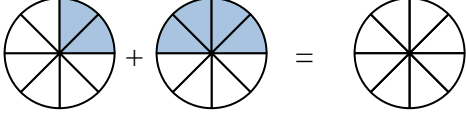
6. \_\_\_\_\_

7)



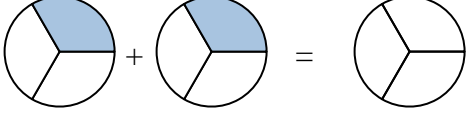
7. \_\_\_\_\_

8)



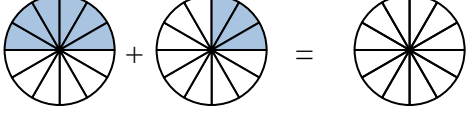
8. \_\_\_\_\_

9)



9. \_\_\_\_\_

10)



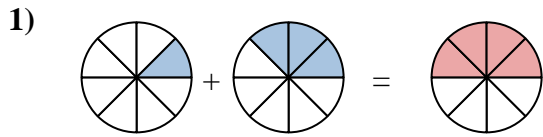
10. \_\_\_\_\_



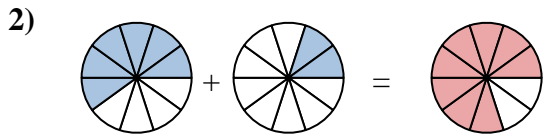
Shade in the fraction to solve the problem.



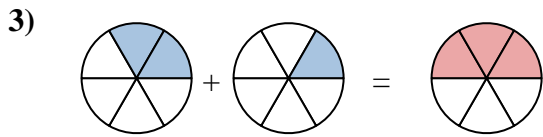
Ex.  $\frac{3}{7}$     $\frac{2}{7}$     $\frac{5}{7}$



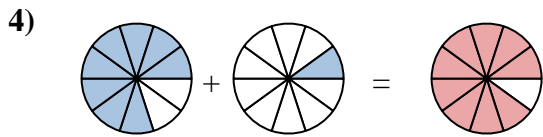
1.  $\frac{1}{8}$     $\frac{3}{8}$     $\frac{4}{8}$



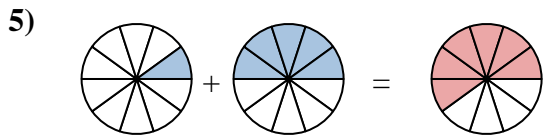
2.  $\frac{6}{10}$     $\frac{2}{10}$     $\frac{8}{10}$



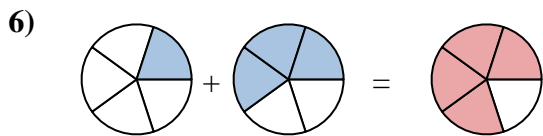
3.  $\frac{2}{6}$     $\frac{1}{6}$     $\frac{3}{6}$



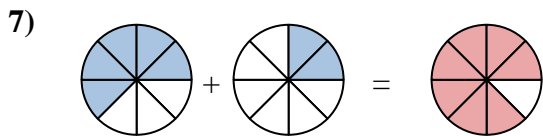
4.  $\frac{8}{10}$     $\frac{1}{10}$     $\frac{9}{10}$



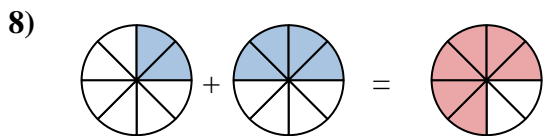
5.  $\frac{1}{10}$     $\frac{5}{10}$     $\frac{6}{10}$



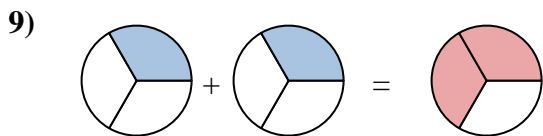
6.  $\frac{1}{5}$     $\frac{3}{5}$     $\frac{4}{5}$



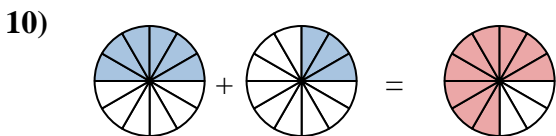
7.  $\frac{5}{8}$     $\frac{2}{8}$     $\frac{7}{8}$



8.  $\frac{2}{8}$     $\frac{4}{8}$     $\frac{6}{8}$



9.  $\frac{1}{3}$     $\frac{1}{3}$     $\frac{2}{3}$



10.  $\frac{6}{12}$     $\frac{3}{12}$     $\frac{9}{12}$

**Answers**