



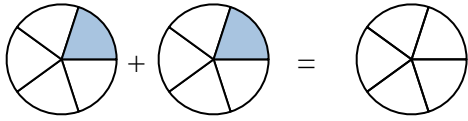
Shade in the fraction to solve the problem.

Ex)



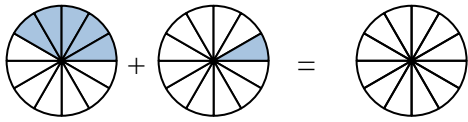
Ex.  $\frac{3}{7}$      $\frac{2}{7}$      $\frac{5}{7}$

1)



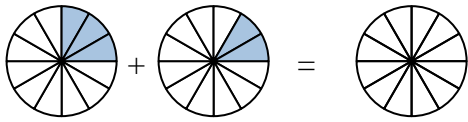
1. \_\_\_\_\_

2)



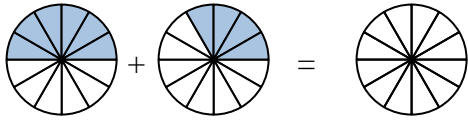
2. \_\_\_\_\_

3)



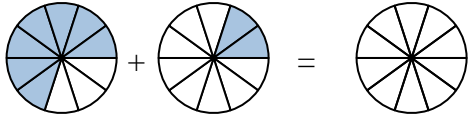
3. \_\_\_\_\_

4)



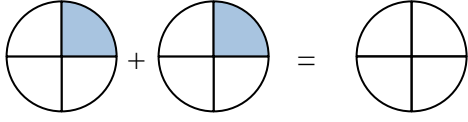
4. \_\_\_\_\_

5)



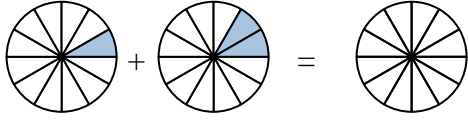
5. \_\_\_\_\_

6)



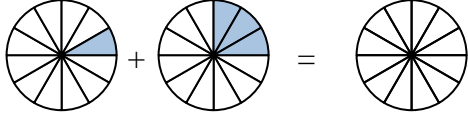
6. \_\_\_\_\_

7)



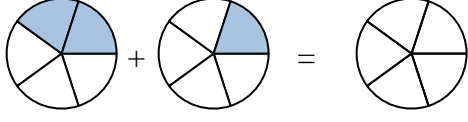
7. \_\_\_\_\_

8)



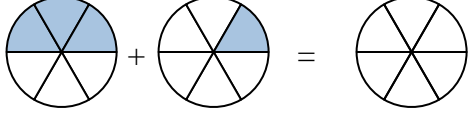
8. \_\_\_\_\_

9)



9. \_\_\_\_\_

10)

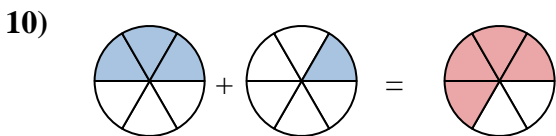
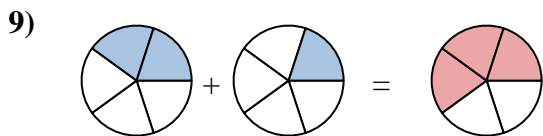
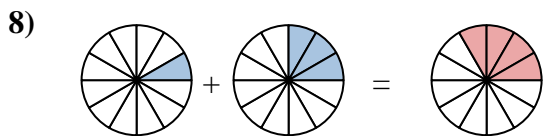
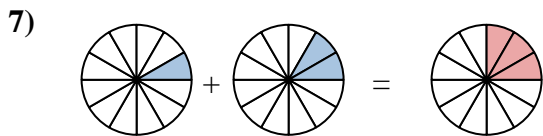
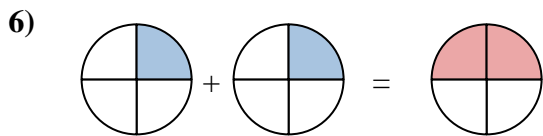
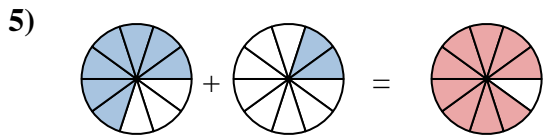
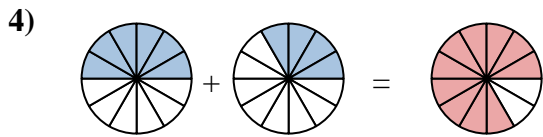
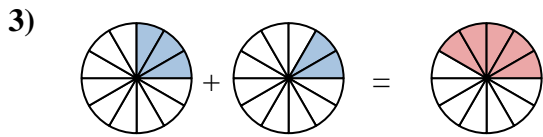
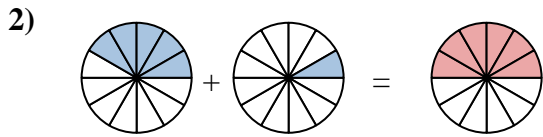
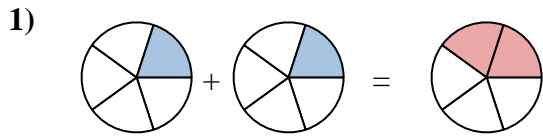


10. \_\_\_\_\_

**Answers**



Shade in the fraction to solve the problem.



**Answers**

Ex.  $\frac{3}{7}$     $\frac{2}{7}$     $\frac{5}{7}$

1.  $\frac{1}{5}$     $\frac{1}{5}$     $\frac{2}{5}$

2.  $\frac{5}{12}$     $\frac{1}{12}$     $\frac{6}{12}$

3.  $\frac{3}{12}$     $\frac{2}{12}$     $\frac{5}{12}$

4.  $\frac{6}{12}$     $\frac{4}{12}$     $\frac{10}{12}$

5.  $\frac{7}{10}$     $\frac{2}{10}$     $\frac{9}{10}$

6.  $\frac{1}{4}$     $\frac{1}{4}$     $\frac{2}{4}$

7.  $\frac{1}{12}$     $\frac{2}{12}$     $\frac{3}{12}$

8.  $\frac{1}{12}$     $\frac{3}{12}$     $\frac{4}{12}$

9.  $\frac{2}{5}$     $\frac{1}{5}$     $\frac{3}{5}$

10.  $\frac{3}{6}$     $\frac{1}{6}$     $\frac{4}{6}$