



Match each equation to the answer and write the answer.

Answers

Ex) $\frac{1}{6} + \frac{1}{6} + \frac{1}{6}$




Ex. A

1) $\frac{1}{8} + \frac{1}{8} + \frac{1}{8} + \frac{1}{8}$



1. _____

2) $\frac{1}{6} + \frac{1}{6}$




2. _____

3) $\frac{1}{4} + \frac{1}{4}$



3. _____

4) $\frac{1}{12} + \frac{1}{12} + \frac{1}{12} + \frac{1}{12}$



4. _____

5) $\frac{1}{10} + \frac{1}{10} + \frac{1}{10}$



5. _____

6) $\frac{1}{10} + \frac{1}{10} + \frac{1}{10} + \frac{1}{10} + \frac{1}{10} + \frac{1}{10}$



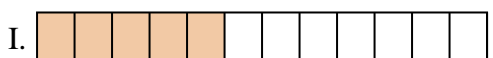
6. _____

7) $\frac{1}{3} + \frac{1}{3}$



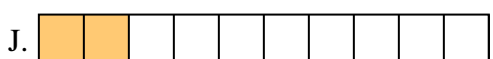
7. _____

8) $\frac{1}{6} + \frac{1}{6} + \frac{1}{6} + \frac{1}{6} + \frac{1}{6}$



8. _____

9) $\frac{1}{5} + \frac{1}{5}$




9. _____

10) $\frac{1}{10} + \frac{1}{10}$



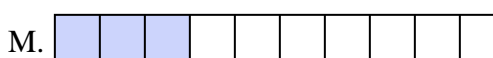
10. _____

11) $\frac{1}{10} + \frac{1}{10} + \frac{1}{10} + \frac{1}{10} + \frac{1}{10} + \frac{1}{10} + \frac{1}{10}$



11. _____

12) $\frac{1}{12} + \frac{1}{12} + \frac{1}{12} + \frac{1}{12} + \frac{1}{12}$




12. _____

13) $\frac{1}{4} + \frac{1}{4} + \frac{1}{4}$




13. _____

14) $\frac{1}{6} + \frac{1}{6} + \frac{1}{6} + \frac{1}{6}$



14. _____

15) $\frac{1}{5} + \frac{1}{5} + \frac{1}{5} + \frac{1}{5}$



15. _____



Match each equation to the answer and write the answer.

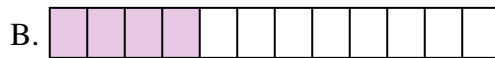
Ex) $\frac{1}{6} + \frac{1}{6} + \frac{1}{6}$



Answers


Ex. **A**

1) $\frac{1}{8} + \frac{1}{8} + \frac{1}{8} + \frac{1}{8}$




1. **L**

2) $\frac{1}{6} + \frac{1}{6}$




2. **O**

3) $\frac{1}{4} + \frac{1}{4}$



3. **P**

4) $\frac{1}{12} + \frac{1}{12} + \frac{1}{12} + \frac{1}{12}$



4. **B**

5) $\frac{1}{10} + \frac{1}{10} + \frac{1}{10}$



5. **M**

6) $\frac{1}{10} + \frac{1}{10} + \frac{1}{10} + \frac{1}{10} + \frac{1}{10} + \frac{1}{10}$



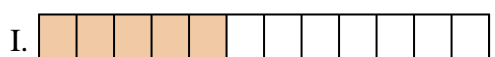
6. **G**

7) $\frac{1}{3} + \frac{1}{3}$



7. **F**

8) $\frac{1}{6} + \frac{1}{6} + \frac{1}{6} + \frac{1}{6} + \frac{1}{6}$



8. **N**

9) $\frac{1}{5} + \frac{1}{5}$




9. **D**

10) $\frac{1}{10} + \frac{1}{10}$



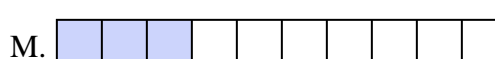
10. **J**

11) $\frac{1}{10} + \frac{1}{10} + \frac{1}{10} + \frac{1}{10} + \frac{1}{10} + \frac{1}{10} + \frac{1}{10}$



11. **E**

12) $\frac{1}{12} + \frac{1}{12} + \frac{1}{12} + \frac{1}{12} + \frac{1}{12}$



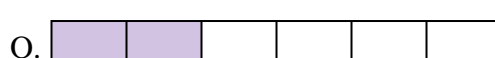
12. **I**

13) $\frac{1}{4} + \frac{1}{4} + \frac{1}{4}$




13. **K**

14) $\frac{1}{6} + \frac{1}{6} + \frac{1}{6} + \frac{1}{6}$



14. **H**

15) $\frac{1}{5} + \frac{1}{5} + \frac{1}{5} + \frac{1}{5}$



15. **C**