




Match each equation to the answer and write the answer.

Answers

Ex) $\frac{1}{5} + \frac{1}{5}$



Ex. **G**

1) $\frac{1}{10} + \frac{1}{10}$



1. _____

2) $\frac{1}{5} + \frac{1}{5} + \frac{1}{5}$



2. _____

3) $\frac{1}{3} + \frac{1}{3}$



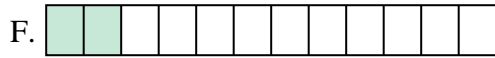
3. _____

4) $\frac{1}{12} + \frac{1}{12}$



4. _____

5) $\frac{1}{12} + \frac{1}{12} + \frac{1}{12} + \frac{1}{12}$



5. _____

6) $\frac{1}{4} + \frac{1}{4}$



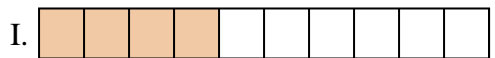
6. _____

7) $\frac{1}{6} + \frac{1}{6}$



7. _____

8) $\frac{1}{4} + \frac{1}{4} + \frac{1}{4}$



8. _____

9) $\frac{1}{10} + \frac{1}{10} + \frac{1}{10} + \frac{1}{10}$




9. _____

10) $\frac{1}{6} + \frac{1}{6} + \frac{1}{6} + \frac{1}{6} + \frac{1}{6}$



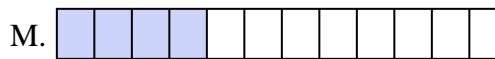
10. _____

11) $\frac{1}{8} + \frac{1}{8} + \frac{1}{8} + \frac{1}{8}$




11. _____

12) $\frac{1}{12} + \frac{1}{12} + \frac{1}{12}$




12. _____

13) $\frac{1}{8} + \frac{1}{8}$




13. _____

14) $\frac{1}{6} + \frac{1}{6} + \frac{1}{6} + \frac{1}{6}$



14. _____

15) $\frac{1}{8} + \frac{1}{8} + \frac{1}{8} + \frac{1}{8} + \frac{1}{8}$



15. _____

16. _____

17. _____

18. _____

19. _____

20. _____

21. _____

22. _____

23. _____

24. _____

25. _____

26. _____

27. _____

28. _____

29. _____

30. _____

31. _____

32. _____

33. _____

34. _____

35. _____



Match each equation to the answer and write the answer.

Ex) $\frac{1}{5} + \frac{1}{5}$



Answers
Ex. **G**

1) $\frac{1}{10} + \frac{1}{10}$



1. **E**

2) $\frac{1}{5} + \frac{1}{5} + \frac{1}{5}$




2. **O**

3) $\frac{1}{3} + \frac{1}{3}$



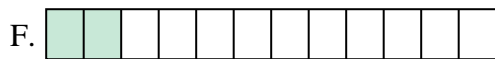
3. **K**

4) $\frac{1}{12} + \frac{1}{12}$



4. **F**

5) $\frac{1}{12} + \frac{1}{12} + \frac{1}{12} + \frac{1}{12}$



5. **M**

6) $\frac{1}{4} + \frac{1}{4}$



6. **D**

7) $\frac{1}{6} + \frac{1}{6}$




7. **A**

8) $\frac{1}{4} + \frac{1}{4} + \frac{1}{4}$



8. **P**

9) $\frac{1}{10} + \frac{1}{10} + \frac{1}{10} + \frac{1}{10}$




9. **I**

10) $\frac{1}{6} + \frac{1}{6} + \frac{1}{6} + \frac{1}{6} + \frac{1}{6}$



10. **B**

11) $\frac{1}{8} + \frac{1}{8} + \frac{1}{8} + \frac{1}{8}$




11. **C**

12) $\frac{1}{12} + \frac{1}{12} + \frac{1}{12}$




12. **J**

13) $\frac{1}{8} + \frac{1}{8}$




13. **N**

14) $\frac{1}{6} + \frac{1}{6} + \frac{1}{6} + \frac{1}{6}$



14. **L**

15) $\frac{1}{8} + \frac{1}{8} + \frac{1}{8} + \frac{1}{8} + \frac{1}{8}$



15. **H**