




Match each equation to the answer and write the answer.


Answers

Ex) $\frac{1}{5} + \frac{1}{5}$




Ex. E

1) $\frac{1}{10} + \frac{1}{10} + \frac{1}{10} + \frac{1}{10} + \frac{1}{10} + \frac{1}{10} + \frac{1}{10}$



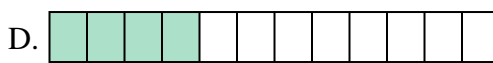
1. _____

2) $\frac{1}{12} + \frac{1}{12} + \frac{1}{12} + \frac{1}{12}$




2. _____

3) $\frac{1}{6} + \frac{1}{6}$




3. _____

4) $\frac{1}{8} + \frac{1}{8} + \frac{1}{8} + \frac{1}{8} + \frac{1}{8} + \frac{1}{8} + \frac{1}{8}$



4. _____

5) $\frac{1}{10} + \frac{1}{10} + \frac{1}{10} + \frac{1}{10} + \frac{1}{10} + \frac{1}{10}$




6. _____

6) $\frac{1}{5} + \frac{1}{5} + \frac{1}{5} + \frac{1}{5}$




7. _____

7) $\frac{1}{10} + \frac{1}{10} + \frac{1}{10} + \frac{1}{10}$



8. _____

8) $\frac{1}{4} + \frac{1}{4}$



9. _____

9) $\frac{1}{3} + \frac{1}{3}$




10. _____

10) $\frac{1}{8} + \frac{1}{8} + \frac{1}{8} + \frac{1}{8} + \frac{1}{8}$



11. _____

11) $\frac{1}{4} + \frac{1}{4} + \frac{1}{4}$




12. _____

12) $\frac{1}{10} + \frac{1}{10} + \frac{1}{10} + \frac{1}{10} + \frac{1}{10}$



13. _____

13) $\frac{1}{8} + \frac{1}{8} + \frac{1}{8}$




14. _____

14) $\frac{1}{8} + \frac{1}{8} + \frac{1}{8} + \frac{1}{8} + \frac{1}{8} + \frac{1}{8}$



15. _____


15) $\frac{1}{8} + \frac{1}{8} + \frac{1}{8} + \frac{1}{8}$





Match each equation to the answer and write the answer.

Ex) $\frac{1}{5} + \frac{1}{5}$



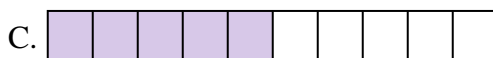
Ex. **E**

1) $\frac{1}{10} + \frac{1}{10} + \frac{1}{10} + \frac{1}{10} + \frac{1}{10} + \frac{1}{10} + \frac{1}{10}$



1. **K**

2) $\frac{1}{12} + \frac{1}{12} + \frac{1}{12} + \frac{1}{12}$




2. **D**

3) $\frac{1}{6} + \frac{1}{6}$




3. **B**

4) $\frac{1}{8} + \frac{1}{8} + \frac{1}{8} + \frac{1}{8} + \frac{1}{8} + \frac{1}{8} + \frac{1}{8}$




4. **G**

5) $\frac{1}{10} + \frac{1}{10} + \frac{1}{10} + \frac{1}{10} + \frac{1}{10} + \frac{1}{10}$



5. **P**

6) $\frac{1}{5} + \frac{1}{5} + \frac{1}{5} + \frac{1}{5}$




6. **A**

7) $\frac{1}{10} + \frac{1}{10} + \frac{1}{10} + \frac{1}{10}$



7. **O**

8) $\frac{1}{4} + \frac{1}{4}$



8. **M**

9) $\frac{1}{3} + \frac{1}{3}$




9. **J**

10) $\frac{1}{8} + \frac{1}{8} + \frac{1}{8} + \frac{1}{8} + \frac{1}{8}$



10. **H**

11) $\frac{1}{4} + \frac{1}{4} + \frac{1}{4}$




11. **L**

12) $\frac{1}{10} + \frac{1}{10} + \frac{1}{10} + \frac{1}{10} + \frac{1}{10}$



12. **C**

13) $\frac{1}{8} + \frac{1}{8} + \frac{1}{8}$




13. **F**

14) $\frac{1}{8} + \frac{1}{8} + \frac{1}{8} + \frac{1}{8} + \frac{1}{8} + \frac{1}{8}$



14. **N**

15) $\frac{1}{8} + \frac{1}{8} + \frac{1}{8} + \frac{1}{8}$



15. **I**

Answers