



Match each equation to the answer and write the answer.

**Answers**

Ex)  $\frac{1}{5} + \frac{1}{5}$



Ex.          **L**

1)  $\frac{1}{5} + \frac{1}{5} + \frac{1}{5}$




1. \_\_\_\_\_

2)  $\frac{1}{4} + \frac{1}{4} + \frac{1}{4}$



2. \_\_\_\_\_

3)  $\frac{1}{8} + \frac{1}{8} + \frac{1}{8} + \frac{1}{8}$




3. \_\_\_\_\_

4)  $\frac{1}{10} + \frac{1}{10} + \frac{1}{10} + \frac{1}{10} + \frac{1}{10}$



4. \_\_\_\_\_

5)  $\frac{1}{5} + \frac{1}{5} + \frac{1}{5} + \frac{1}{5}$




5. \_\_\_\_\_

6)  $\frac{1}{12} + \frac{1}{12} + \frac{1}{12} + \frac{1}{12} + \frac{1}{12} + \frac{1}{12} + \frac{1}{12}$



6. \_\_\_\_\_

7)  $\frac{1}{10} + \frac{1}{10} + \frac{1}{10} + \frac{1}{10} + \frac{1}{10} + \frac{1}{10} + \frac{1}{10}$



7. \_\_\_\_\_

8)  $\frac{1}{4} + \frac{1}{4}$



8. \_\_\_\_\_

9)  $\frac{1}{10} + \frac{1}{10} + \frac{1}{10} + \frac{1}{10}$



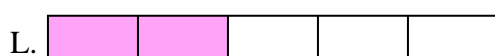
9. \_\_\_\_\_

10)  $\frac{1}{8} + \frac{1}{8}$




10. \_\_\_\_\_

11)  $\frac{1}{3} + \frac{1}{3}$



11. \_\_\_\_\_

12)  $\frac{1}{6} + \frac{1}{6} + \frac{1}{6} + \frac{1}{6}$



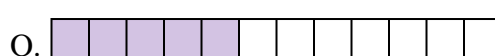
12. \_\_\_\_\_

13)  $\frac{1}{8} + \frac{1}{8} + \frac{1}{8} + \frac{1}{8} + \frac{1}{8} + \frac{1}{8} + \frac{1}{8}$



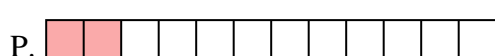
13. \_\_\_\_\_

14)  $\frac{1}{12} + \frac{1}{12}$



14. \_\_\_\_\_

15)  $\frac{1}{12} + \frac{1}{12} + \frac{1}{12} + \frac{1}{12} + \frac{1}{12}$



15. \_\_\_\_\_



Match each equation to the answer and write the answer.

Answers

Ex)  $\frac{1}{5} + \frac{1}{5}$



Ex.     **L**    

1)  $\frac{1}{5} + \frac{1}{5} + \frac{1}{5}$



1.     **I**    

2)  $\frac{1}{4} + \frac{1}{4} + \frac{1}{4}$




2.     **C**    

3)  $\frac{1}{8} + \frac{1}{8} + \frac{1}{8} + \frac{1}{8}$



3.     **M**    

4)  $\frac{1}{10} + \frac{1}{10} + \frac{1}{10} + \frac{1}{10} + \frac{1}{10}$



4.     **D**    

5)  $\frac{1}{5} + \frac{1}{5} + \frac{1}{5} + \frac{1}{5}$




5.     **E**    

6)  $\frac{1}{12} + \frac{1}{12} + \frac{1}{12} + \frac{1}{12} + \frac{1}{12} + \frac{1}{12} + \frac{1}{12}$



6.     **G**    

7)  $\frac{1}{10} + \frac{1}{10} + \frac{1}{10} + \frac{1}{10} + \frac{1}{10} + \frac{1}{10} + \frac{1}{10}$



7.     **F**    

8)  $\frac{1}{4} + \frac{1}{4}$




8.     **J**    

9)  $\frac{1}{10} + \frac{1}{10} + \frac{1}{10} + \frac{1}{10}$



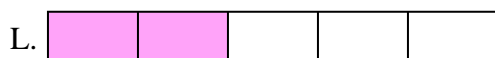
9.     **H**    

10)  $\frac{1}{8} + \frac{1}{8}$




10.     **K**    

11)  $\frac{1}{3} + \frac{1}{3}$



11.     **A**    

12)  $\frac{1}{6} + \frac{1}{6} + \frac{1}{6} + \frac{1}{6}$



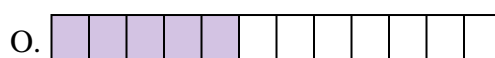
12.     **N**    

13)  $\frac{1}{8} + \frac{1}{8} + \frac{1}{8} + \frac{1}{8} + \frac{1}{8} + \frac{1}{8} + \frac{1}{8}$



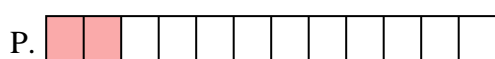
13.     **B**    

14)  $\frac{1}{12} + \frac{1}{12}$



14.     **P**    

15)  $\frac{1}{12} + \frac{1}{12} + \frac{1}{12} + \frac{1}{12} + \frac{1}{12}$



15.     **O**