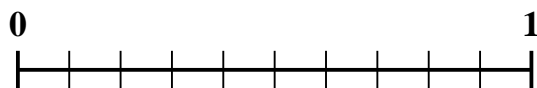


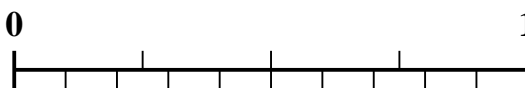


Use the number line to solve each problem.

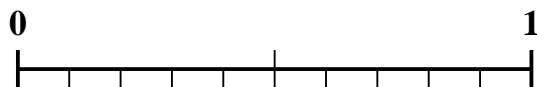
1) Which amount is larger,  $\frac{4}{10}$  or 0.52?



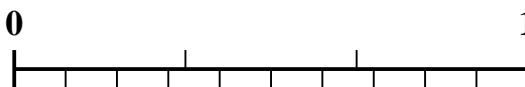
2) Which amount is larger,  $\frac{1}{4}$  or 0.39?




3) Which amount is larger,  $\frac{1}{2}$  or 0.64?



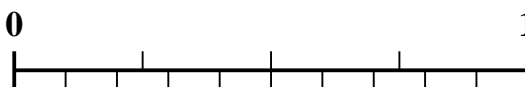
4) Which amount is larger,  $\frac{2}{3}$  or 0.55?



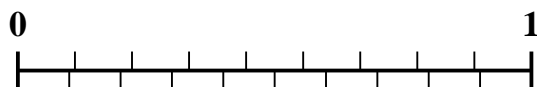
5) Which amount is larger,  $\frac{4}{6}$  or 0.85?



6) Which amount is larger,  $\frac{2}{4}$  or 0.38?



7) Which amount is larger,  $\frac{8}{9}$  or 0.76?



8) Which amount is larger,  $\frac{6}{8}$  or 0.6?



9) Which amount is larger,  $\frac{5}{7}$  or 0.54?



10) Which amount is larger,  $\frac{6}{7}$  or 0.69?



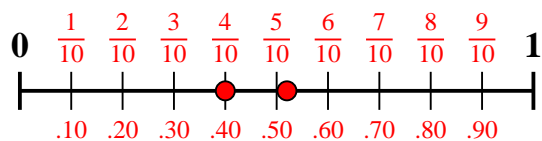
Answers

1. \_\_\_\_\_
2. \_\_\_\_\_
3. \_\_\_\_\_
4. \_\_\_\_\_
5. \_\_\_\_\_
6. \_\_\_\_\_
7. \_\_\_\_\_
8. \_\_\_\_\_
9. \_\_\_\_\_
10. \_\_\_\_\_

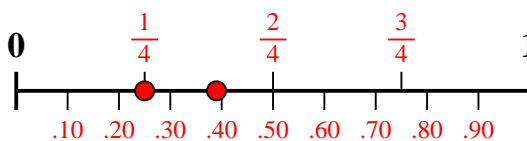


Use the number line to solve each problem.

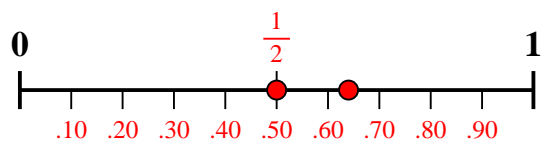
1) Which amount is larger,  $\frac{4}{10}$  or 0.52?



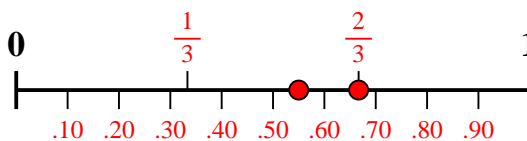
2) Which amount is larger,  $\frac{1}{4}$  or 0.39?



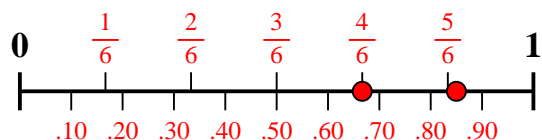
3) Which amount is larger,  $\frac{1}{2}$  or 0.64?



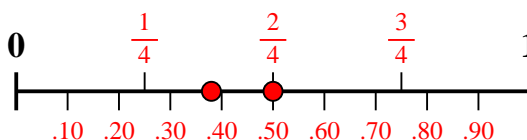
4) Which amount is larger,  $\frac{2}{3}$  or 0.55?



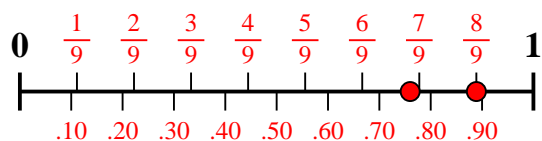
5) Which amount is larger,  $\frac{4}{6}$  or 0.85?



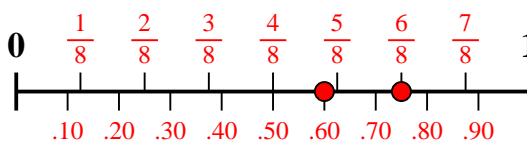
6) Which amount is larger,  $\frac{2}{4}$  or 0.38?



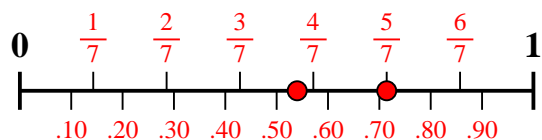
7) Which amount is larger,  $\frac{8}{9}$  or 0.76?



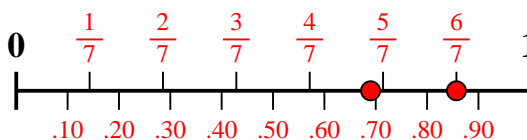
8) Which amount is larger,  $\frac{6}{8}$  or 0.6?



9) Which amount is larger,  $\frac{5}{7}$  or 0.54?



10) Which amount is larger,  $\frac{6}{7}$  or 0.69?



Answers

1. **0.52**
2. **0.39**
3. **0.64**
4.  **$\frac{2}{3}$**
5. **0.85**
6.  **$\frac{2}{4}$**
7.  **$\frac{8}{9}$**
8.  **$\frac{6}{8}$**
9.  **$\frac{5}{7}$**
10.  **$\frac{6}{7}$**