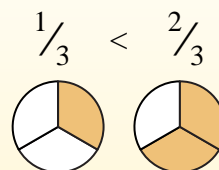
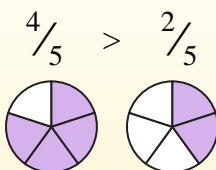
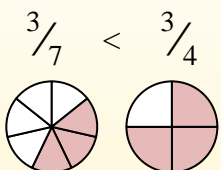
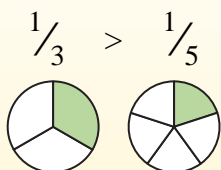




Use < or > to compare each fraction.

Anytime the numerator is the same, the number with the smaller denominator will be larger because it will have larger pieces.

Anytime the denominator is the same, the number with the larger numerator will be larger because it will have more pieces.



Answers

Ex. <

Ex) $\frac{4}{7} < \frac{6}{7}$

1) $\frac{2}{3} \frac{2}{8}$

2) $\frac{2}{7} \frac{3}{7}$

3) $\frac{6}{7} \frac{1}{7}$

4) $\frac{5}{6} \frac{1}{6}$

5) $\frac{1}{2} \frac{1}{6}$

6) $\frac{1}{6} \frac{3}{6}$

7) $\frac{5}{8} \frac{7}{8}$

8) $\frac{1}{5} \frac{1}{4}$

9) $\frac{2}{4} \frac{3}{4}$

10) $\frac{2}{7} \frac{1}{7}$

11) $\frac{2}{6} \frac{2}{4}$

12) $\frac{2}{3} \frac{1}{3}$

13) $\frac{1}{4} \frac{2}{4}$

14) $\frac{3}{4} \frac{3}{7}$

15) $\frac{6}{7} \frac{2}{7}$

16) $\frac{1}{5} \frac{3}{5}$

17) $\frac{3}{5} \frac{2}{5}$

18) $\frac{1}{5} \frac{1}{7}$

19) $\frac{1}{7} \frac{5}{7}$

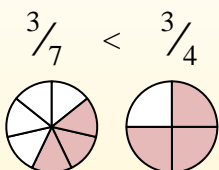
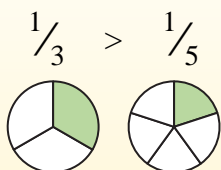
20) $\frac{3}{5} \frac{1}{5}$

1. _____
2. _____
3. _____
4. _____
5. _____
6. _____
7. _____
8. _____
9. _____
10. _____
11. _____
12. _____
13. _____
14. _____
15. _____
16. _____
17. _____
18. _____
19. _____
20. _____

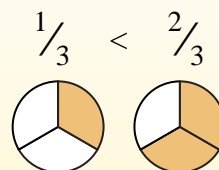
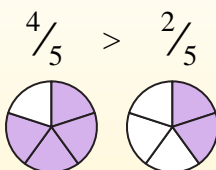


Use < or > to compare each fraction.

Anytime the numerator is the same, the number with the smaller denominator will be larger because it will have larger pieces.



Anytime the denominator is the same, the number with the larger numerator will be larger because it will have more pieces.



Answers

Ex. <

1. >

2. <

3. >

4. >

5. >

6. <

7. <

8. <

9. <

10. >

11. <

12. >

13. <

14. >

15. >

16. <

17. >

18. >

19. <

20. >

Ex) $\frac{4}{7} < \frac{6}{7}$

1) $\frac{2}{3} > \frac{2}{8}$

2) $\frac{2}{7} < \frac{3}{7}$

3) $\frac{6}{7} > \frac{1}{7}$

4) $\frac{5}{6} > \frac{1}{6}$

5) $\frac{1}{2} > \frac{1}{6}$

6) $\frac{1}{6} < \frac{3}{6}$

7) $\frac{5}{8} < \frac{7}{8}$

8) $\frac{1}{5} < \frac{1}{4}$

9) $\frac{2}{4} < \frac{3}{4}$

10) $\frac{2}{7} > \frac{1}{7}$

11) $\frac{2}{6} < \frac{2}{4}$

12) $\frac{2}{3} > \frac{1}{3}$

13) $\frac{1}{4} < \frac{2}{4}$

14) $\frac{3}{4} > \frac{3}{7}$

15) $\frac{6}{7} > \frac{2}{7}$

16) $\frac{1}{5} < \frac{3}{5}$

17) $\frac{3}{5} > \frac{2}{5}$

18) $\frac{1}{5} > \frac{1}{7}$

19) $\frac{1}{7} < \frac{5}{7}$

20) $\frac{3}{5} > \frac{1}{5}$