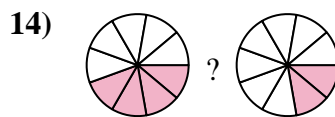
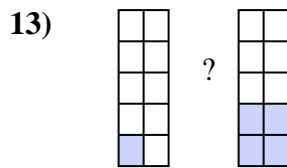
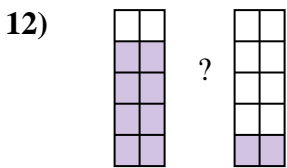
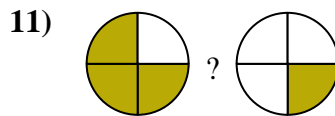
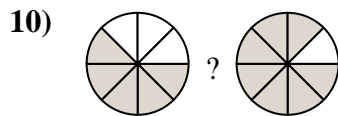
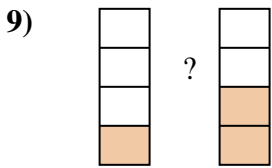
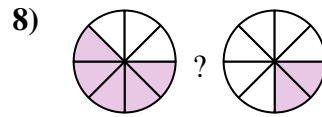
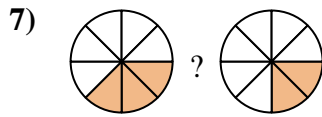
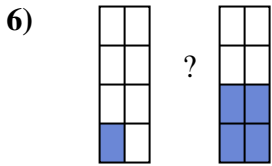
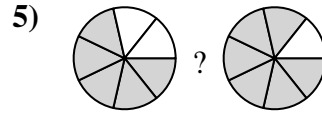
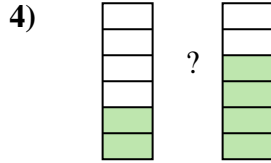
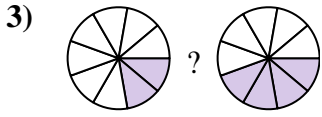
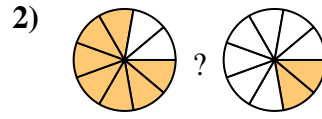
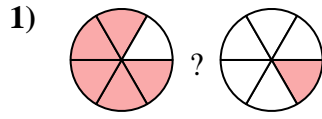
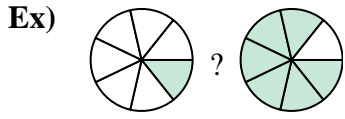




Compare the size of the fractions using $<$, $>$ or $=$.



Answers

Ex. $\frac{1}{7} < \frac{6}{7}$

1. _____

2. _____

3. _____

4. _____

5. _____

6. _____

7. _____

8. _____

9. _____

10. _____

11. _____

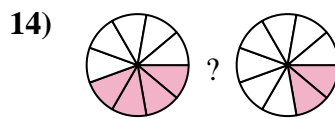
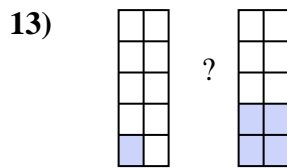
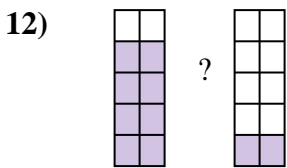
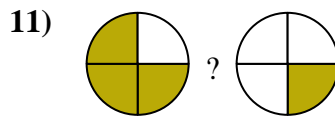
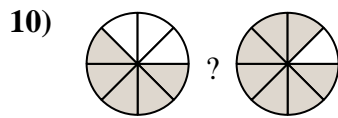
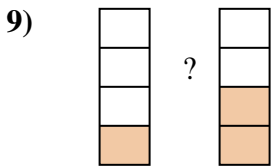
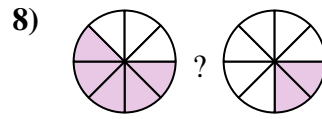
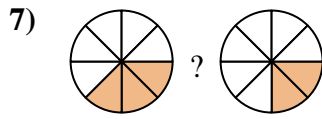
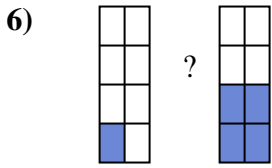
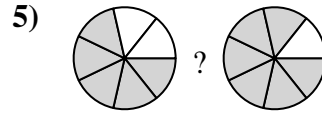
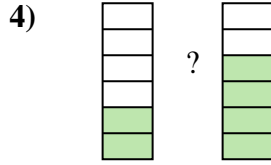
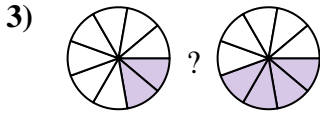
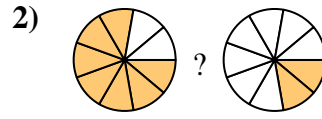
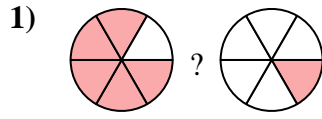
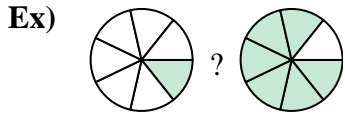
12. _____

13. _____

14. _____



Compare the size of the fractions using $<$, $>$ or $=$.



Answers

Ex.	$\frac{1}{7}$	$<$	$\frac{6}{7}$
1.	$\frac{5}{6}$	$>$	$\frac{1}{6}$
2.	$\frac{7}{9}$	$>$	$\frac{2}{9}$
3.	$\frac{2}{9}$	$<$	$\frac{4}{9}$
4.	$\frac{2}{6}$	$<$	$\frac{4}{6}$
5.	$\frac{5}{7}$	$<$	$\frac{6}{7}$
6.	$\frac{1}{8}$	$<$	$\frac{4}{8}$
7.	$\frac{3}{8}$	$>$	$\frac{2}{8}$
8.	$\frac{5}{8}$	$>$	$\frac{2}{8}$
9.	$\frac{1}{4}$	$<$	$\frac{2}{4}$
10.	$\frac{5}{8}$	$<$	$\frac{7}{8}$
11.	$\frac{3}{4}$	$>$	$\frac{1}{4}$
12.	$\frac{8}{10}$	$>$	$\frac{2}{10}$
13.	$\frac{1}{10}$	$<$	$\frac{4}{10}$
14.	$\frac{4}{9}$	$>$	$\frac{2}{9}$