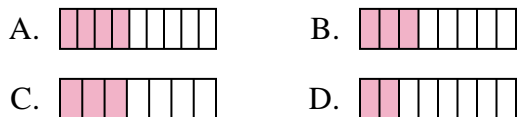




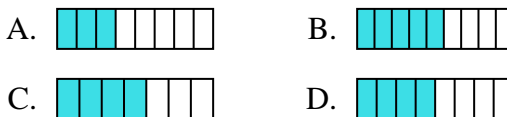
Determine which choice best answers each question.

Answers

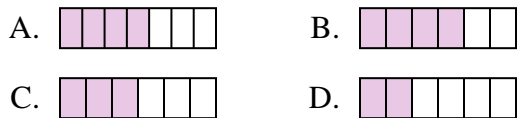
1) Which of the shapes below is shaded to represent $\frac{3}{8}$?



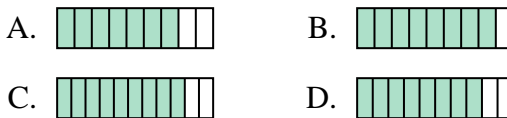
2) Which of the shapes below is shaded to represent $\frac{4}{8}$?



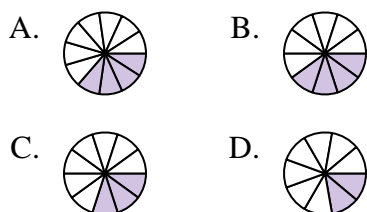
3) Which of the shapes below is shaded to represent $\frac{3}{6}$?



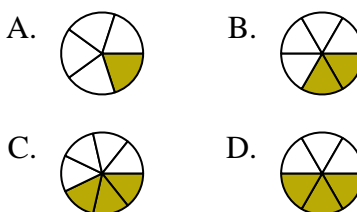
4) Which of the shapes below is shaded to represent $\frac{8}{10}$?



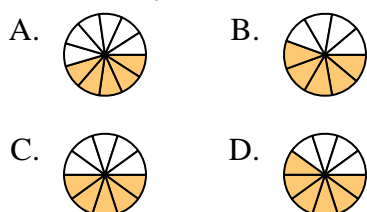
5) Which of the shapes below is shaded to represent $\frac{3}{10}$?



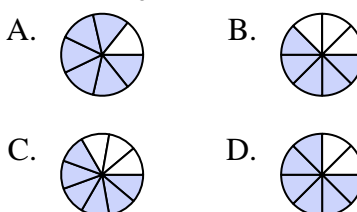
6) Which of the shapes below is shaded to represent $\frac{2}{6}$?



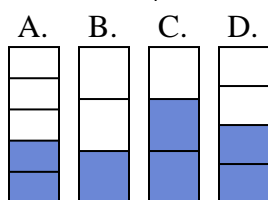
7) Which of the shapes below is shaded to represent $\frac{5}{10}$?



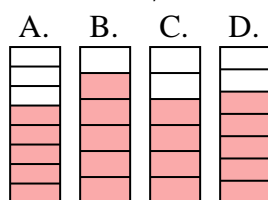
8) Which of the shapes below is shaded to represent $\frac{6}{8}$?



9) Which of the shapes below is shaded to represent $\frac{2}{4}$?



10) Which of the shapes below is shaded to represent $\frac{5}{7}$?



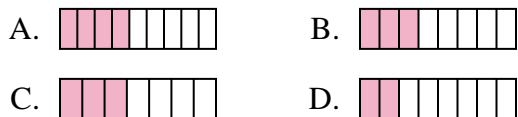
1. _____
2. _____
3. _____
4. _____
5. _____
6. _____
7. _____
8. _____
9. _____
10. _____



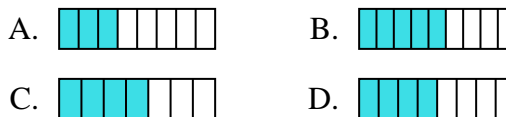
Determine which choice best answers each question.

Answers

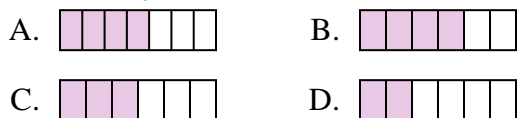
1) Which of the shapes below is shaded to represent $\frac{3}{8}$?



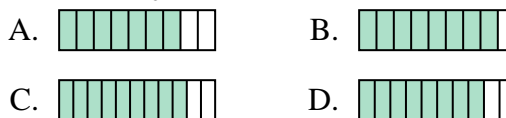
2) Which of the shapes below is shaded to represent $\frac{4}{8}$?



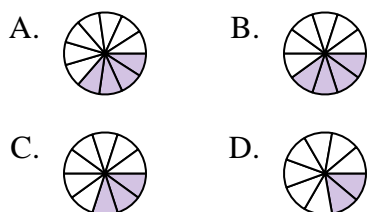
3) Which of the shapes below is shaded to represent $\frac{3}{6}$?



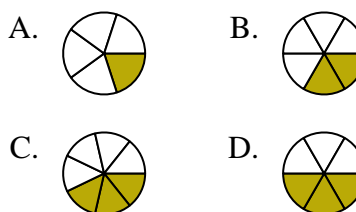
4) Which of the shapes below is shaded to represent $\frac{8}{10}$?



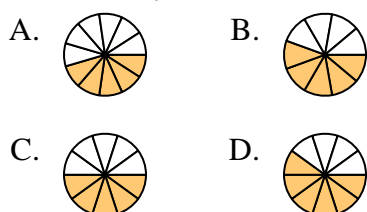
5) Which of the shapes below is shaded to represent $\frac{3}{10}$?



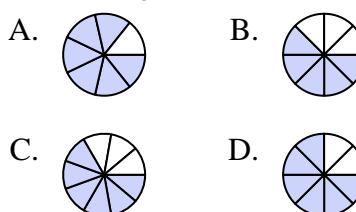
6) Which of the shapes below is shaded to represent $\frac{2}{6}$?



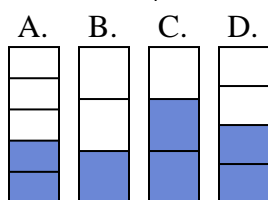
7) Which of the shapes below is shaded to represent $\frac{5}{10}$?



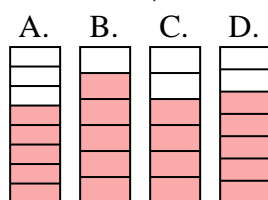
8) Which of the shapes below is shaded to represent $\frac{6}{8}$?



9) Which of the shapes below is shaded to represent $\frac{2}{4}$?



10) Which of the shapes below is shaded to represent $\frac{5}{7}$?



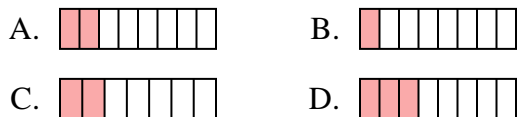
1. **B**
2. **D**
3. **C**
4. **D**
5. **C**
6. **B**
7. **C**
8. **D**
9. **D**
10. **D**



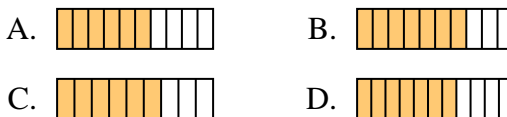
Determine which choice best answers each question.

Answers

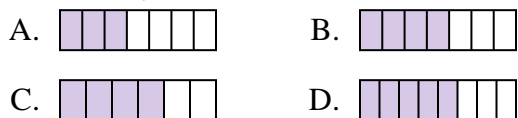
1) Which of the shapes below is shaded to represent $\frac{2}{8}$?



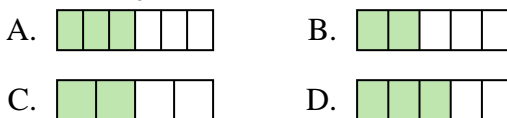
2) Which of the shapes below is shaded to represent $\frac{6}{10}$?



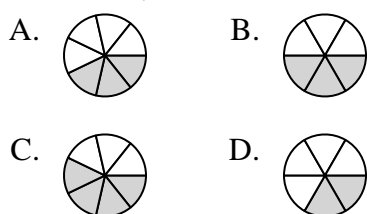
3) Which of the shapes below is shaded to represent $\frac{4}{7}$?



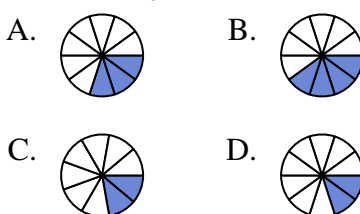
4) Which of the shapes below is shaded to represent $\frac{3}{5}$?



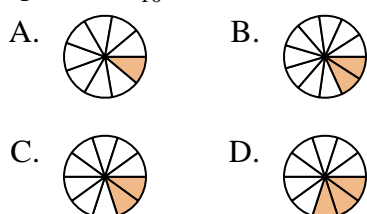
5) Which of the shapes below is shaded to represent $\frac{3}{7}$?



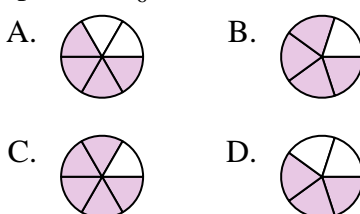
6) Which of the shapes below is shaded to represent $\frac{3}{10}$?



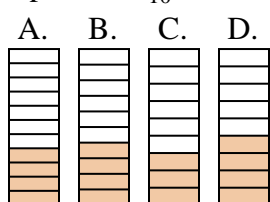
7) Which of the shapes below is shaded to represent $\frac{2}{10}$?



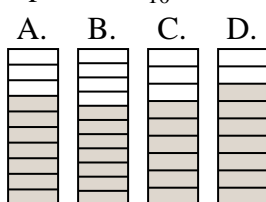
8) Which of the shapes below is shaded to represent $\frac{4}{6}$?



9) Which of the shapes below is shaded to represent $\frac{4}{10}$?



10) Which of the shapes below is shaded to represent $\frac{7}{10}$?

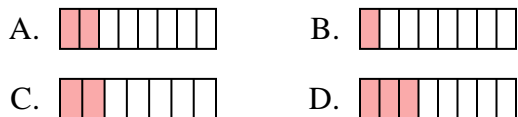


1. _____
2. _____
3. _____
4. _____
5. _____
6. _____
7. _____
8. _____
9. _____
10. _____

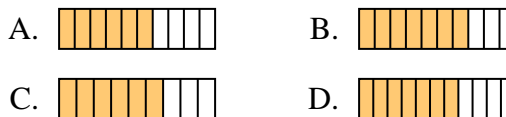


Determine which choice best answers each question.

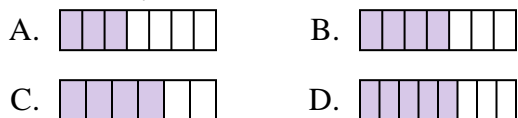
1) Which of the shapes below is shaded to represent $\frac{2}{8}$?



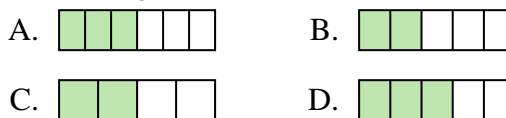
2) Which of the shapes below is shaded to represent $\frac{6}{10}$?



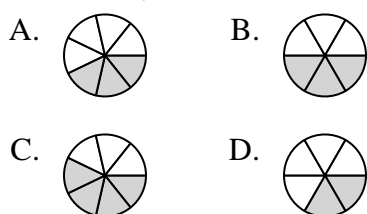
3) Which of the shapes below is shaded to represent $\frac{4}{7}$?



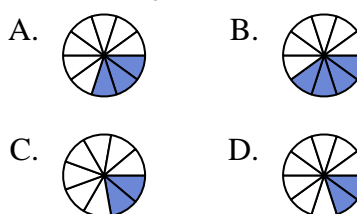
4) Which of the shapes below is shaded to represent $\frac{3}{5}$?



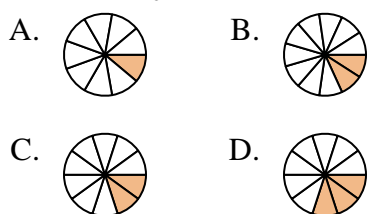
5) Which of the shapes below is shaded to represent $\frac{3}{7}$?



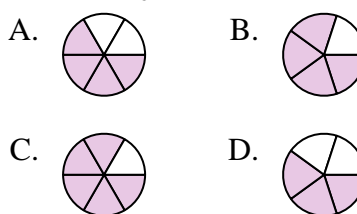
6) Which of the shapes below is shaded to represent $\frac{3}{10}$?



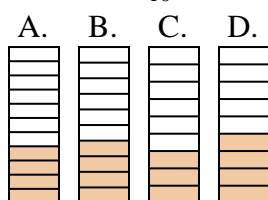
7) Which of the shapes below is shaded to represent $\frac{2}{10}$?



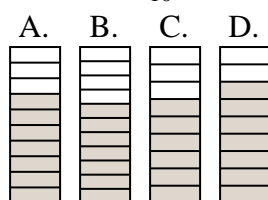
8) Which of the shapes below is shaded to represent $\frac{4}{6}$?



9) Which of the shapes below is shaded to represent $\frac{4}{10}$?



10) Which of the shapes below is shaded to represent $\frac{7}{10}$?



Answers

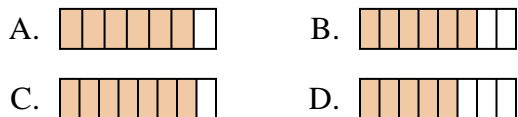
1. **A**
2. **A**
3. **B**
4. **D**
5. **A**
6. **A**
7. **C**
8. **A**
9. **B**
10. **A**



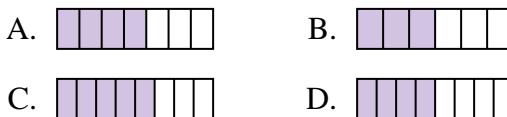
Determine which choice best answers each question.

Answers

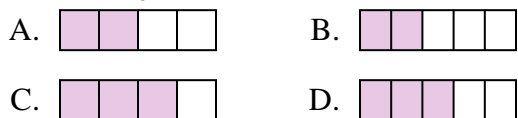
1) Which of the shapes below is shaded to represent $\frac{6}{8}$?



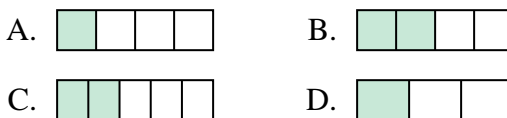
2) Which of the shapes below is shaded to represent $\frac{4}{7}$?



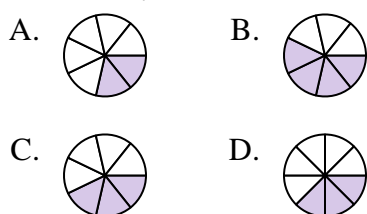
3) Which of the shapes below is shaded to represent $\frac{3}{5}$?



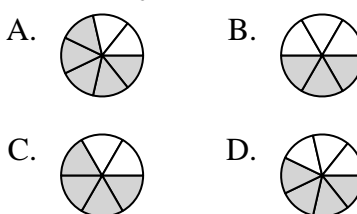
4) Which of the shapes below is shaded to represent $\frac{2}{4}$?



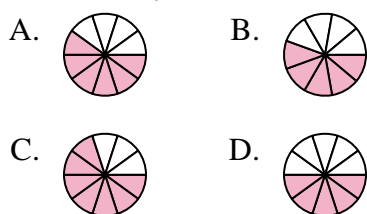
5) Which of the shapes below is shaded to represent $\frac{3}{7}$?



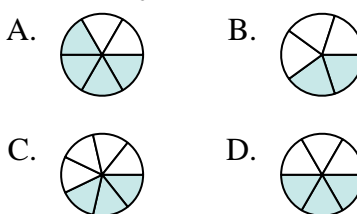
6) Which of the shapes below is shaded to represent $\frac{4}{6}$?



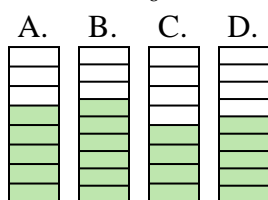
7) Which of the shapes below is shaded to represent $\frac{6}{10}$?



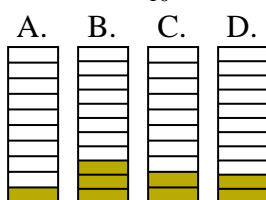
8) Which of the shapes below is shaded to represent $\frac{3}{6}$?



9) Which of the shapes below is shaded to represent $\frac{5}{8}$?



10) Which of the shapes below is shaded to represent $\frac{2}{10}$?



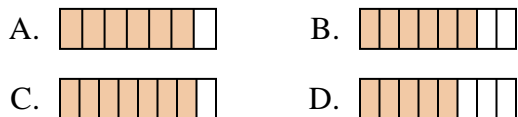
1. _____
2. _____
3. _____
4. _____
5. _____
6. _____
7. _____
8. _____
9. _____
10. _____



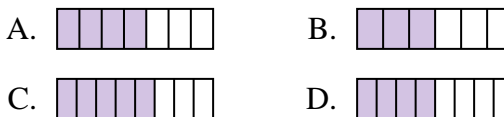
Determine which choice best answers each question.

Answers

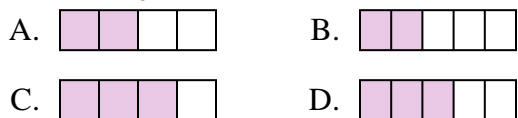
1) Which of the shapes below is shaded to represent $\frac{6}{8}$?



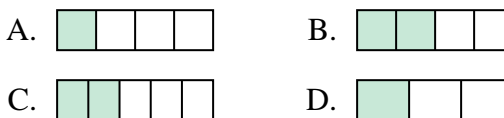
2) Which of the shapes below is shaded to represent $\frac{4}{7}$?



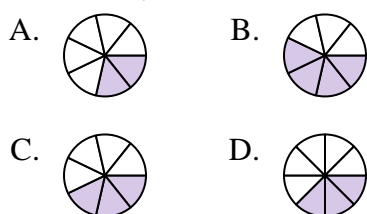
3) Which of the shapes below is shaded to represent $\frac{3}{5}$?



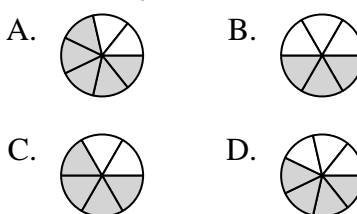
4) Which of the shapes below is shaded to represent $\frac{2}{4}$?



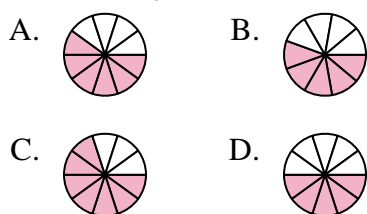
5) Which of the shapes below is shaded to represent $\frac{3}{7}$?



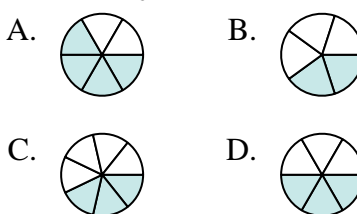
6) Which of the shapes below is shaded to represent $\frac{4}{6}$?



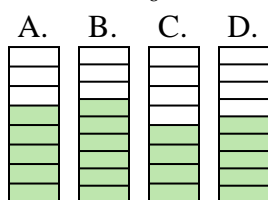
7) Which of the shapes below is shaded to represent $\frac{6}{10}$?



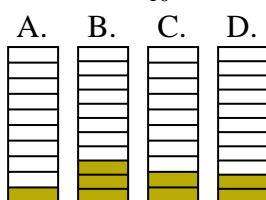
8) Which of the shapes below is shaded to represent $\frac{3}{6}$?



9) Which of the shapes below is shaded to represent $\frac{5}{8}$?



10) Which of the shapes below is shaded to represent $\frac{2}{10}$?



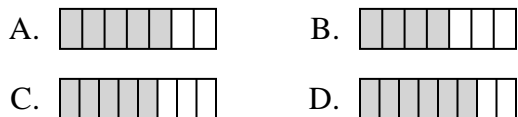
1. **B**
2. **A**
3. **D**
4. **B**
5. **C**
6. **C**
7. **A**
8. **D**
9. **A**
10. **C**



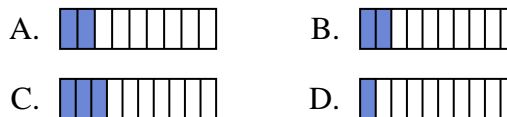
Determine which choice best answers each question.

Answers

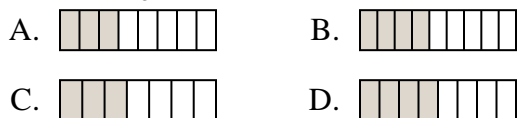
1) Which of the shapes below is shaded to represent $\frac{5}{8}$?



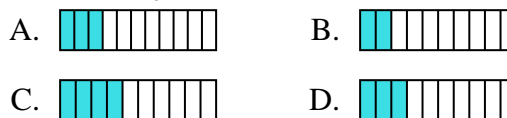
2) Which of the shapes below is shaded to represent $\frac{2}{10}$?



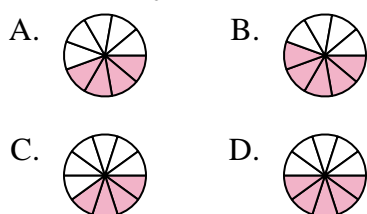
3) Which of the shapes below is shaded to represent $\frac{4}{8}$?



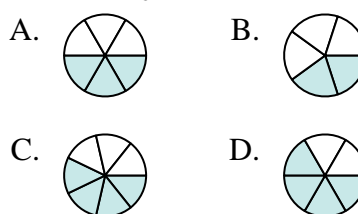
4) Which of the shapes below is shaded to represent $\frac{3}{10}$?



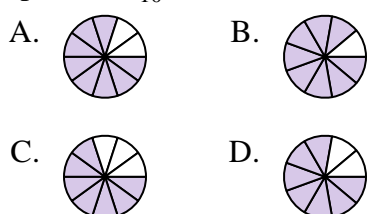
5) Which of the shapes below is shaded to represent $\frac{5}{10}$?



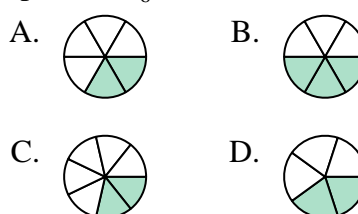
6) Which of the shapes below is shaded to represent $\frac{3}{6}$?



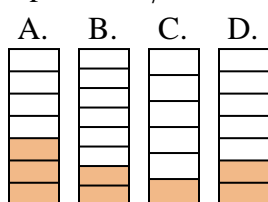
7) Which of the shapes below is shaded to represent $\frac{8}{10}$?



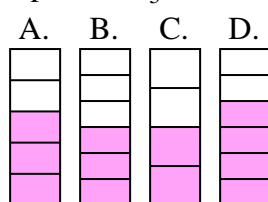
8) Which of the shapes below is shaded to represent $\frac{2}{6}$?



9) Which of the shapes below is shaded to represent $\frac{2}{7}$?



10) Which of the shapes below is shaded to represent $\frac{3}{5}$?

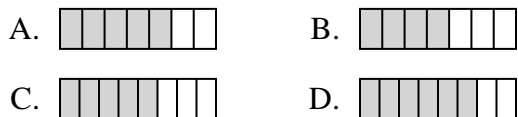


1. _____
2. _____
3. _____
4. _____
5. _____
6. _____
7. _____
8. _____
9. _____
10. _____

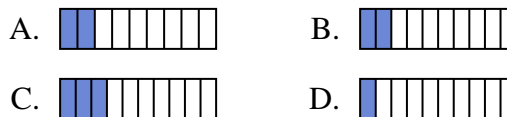


Determine which choice best answers each question.

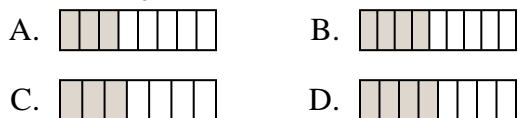
1) Which of the shapes below is shaded to represent $\frac{5}{8}$?



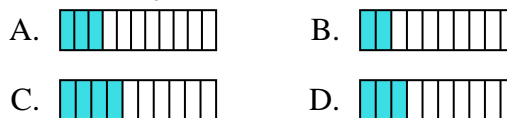
2) Which of the shapes below is shaded to represent $\frac{2}{10}$?



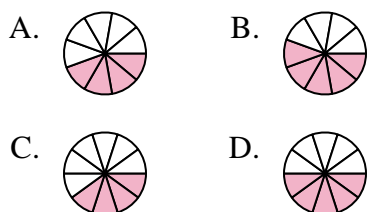
3) Which of the shapes below is shaded to represent $\frac{4}{8}$?



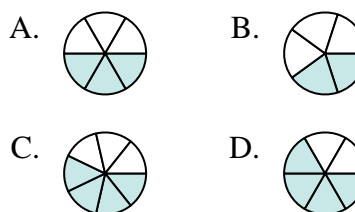
4) Which of the shapes below is shaded to represent $\frac{3}{10}$?



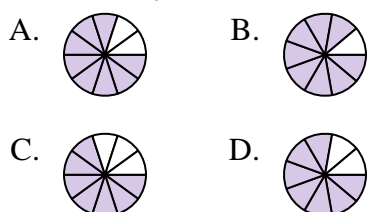
5) Which of the shapes below is shaded to represent $\frac{5}{10}$?



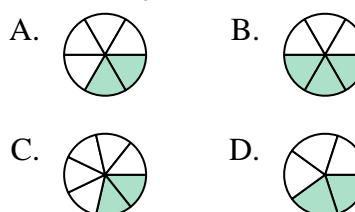
6) Which of the shapes below is shaded to represent $\frac{3}{6}$?



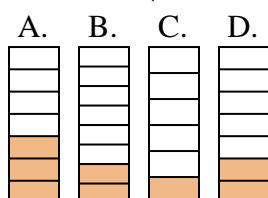
7) Which of the shapes below is shaded to represent $\frac{8}{10}$?



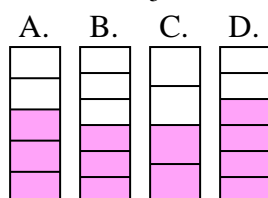
8) Which of the shapes below is shaded to represent $\frac{2}{6}$?



9) Which of the shapes below is shaded to represent $\frac{2}{7}$?



10) Which of the shapes below is shaded to represent $\frac{3}{5}$?



Answers

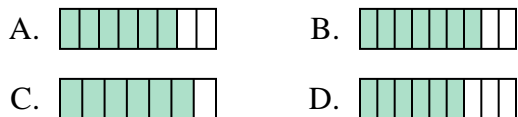
1. **C**
2. **B**
3. **D**
4. **D**
5. **D**
6. **A**
7. **A**
8. **A**
9. **D**
10. **A**



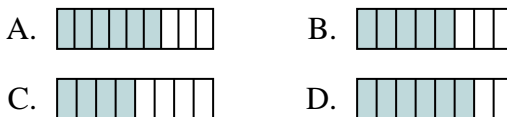
Determine which choice best answers each question.

Answers

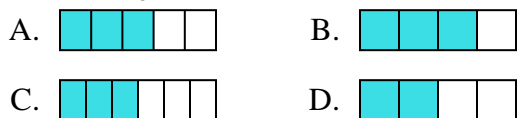
1) Which of the shapes below is shaded to represent $\frac{6}{8}$?



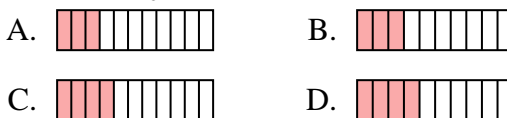
2) Which of the shapes below is shaded to represent $\frac{5}{8}$?



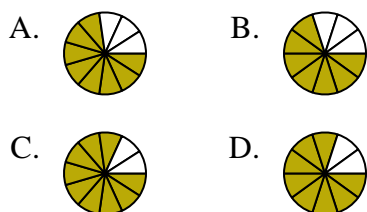
3) Which of the shapes below is shaded to represent $\frac{3}{5}$?



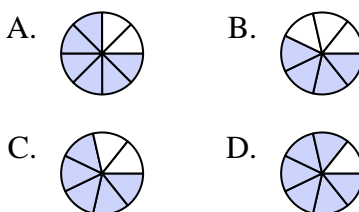
4) Which of the shapes below is shaded to represent $\frac{3}{10}$?



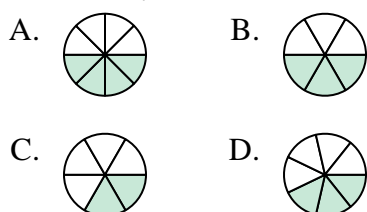
5) Which of the shapes below is shaded to represent $\frac{8}{10}$?



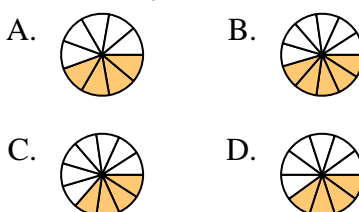
6) Which of the shapes below is shaded to represent $\frac{5}{7}$?



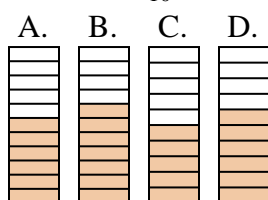
7) Which of the shapes below is shaded to represent $\frac{3}{7}$?



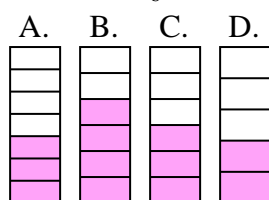
8) Which of the shapes below is shaded to represent $\frac{4}{10}$?



9) Which of the shapes below is shaded to represent $\frac{6}{10}$?



10) Which of the shapes below is shaded to represent $\frac{3}{6}$?

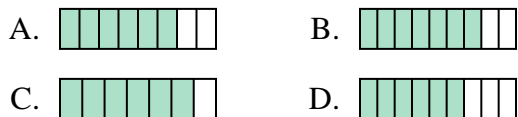


1. _____
2. _____
3. _____
4. _____
5. _____
6. _____
7. _____
8. _____
9. _____
10. _____

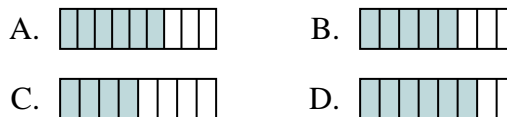


Determine which choice best answers each question.

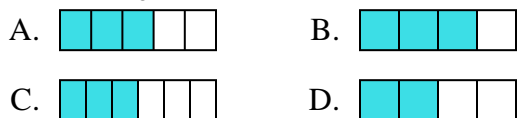
1) Which of the shapes below is shaded to represent $\frac{6}{8}$?



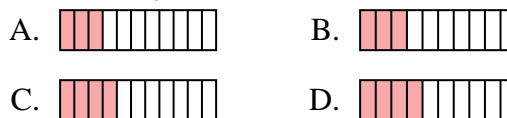
2) Which of the shapes below is shaded to represent $\frac{5}{8}$?



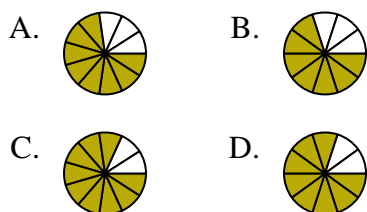
3) Which of the shapes below is shaded to represent $\frac{3}{5}$?



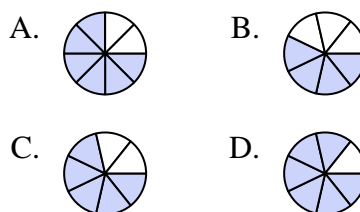
4) Which of the shapes below is shaded to represent $\frac{3}{10}$?



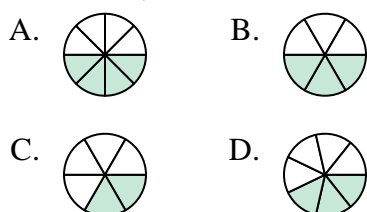
5) Which of the shapes below is shaded to represent $\frac{8}{10}$?



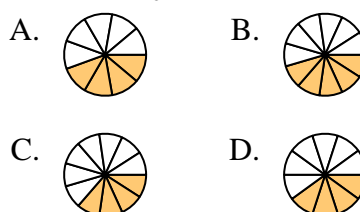
6) Which of the shapes below is shaded to represent $\frac{5}{7}$?



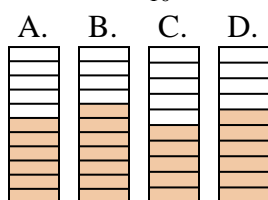
7) Which of the shapes below is shaded to represent $\frac{3}{7}$?



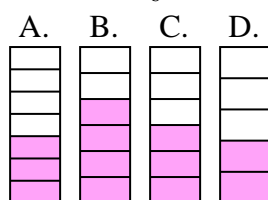
8) Which of the shapes below is shaded to represent $\frac{4}{10}$?



9) Which of the shapes below is shaded to represent $\frac{6}{10}$?



10) Which of the shapes below is shaded to represent $\frac{3}{6}$?



Answers

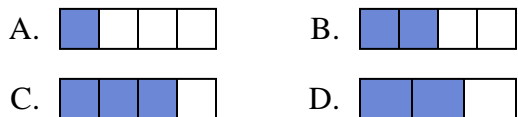
1. **A**
2. **B**
3. **A**
4. **B**
5. **D**
6. **C**
7. **D**
8. **D**
9. **D**
10. **C**



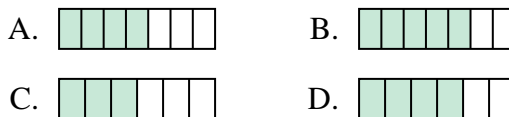
Determine which choice best answers each question.

Answers

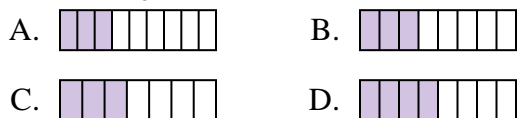
1) Which of the shapes below is shaded to represent $\frac{2}{4}$?



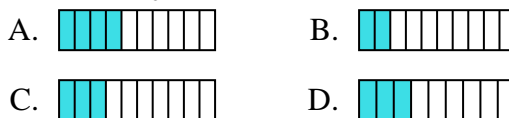
2) Which of the shapes below is shaded to represent $\frac{4}{6}$?



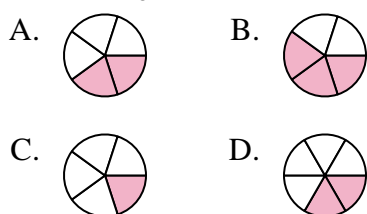
3) Which of the shapes below is shaded to represent $\frac{3}{8}$?



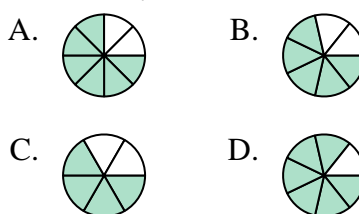
4) Which of the shapes below is shaded to represent $\frac{3}{10}$?



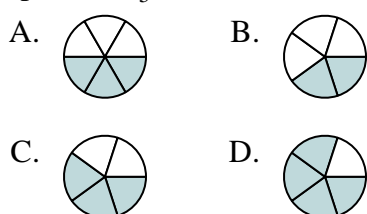
5) Which of the shapes below is shaded to represent $\frac{2}{5}$?



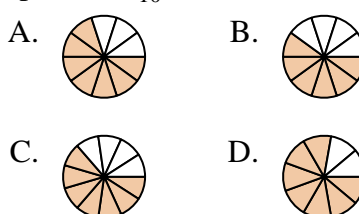
6) Which of the shapes below is shaded to represent $\frac{5}{7}$?



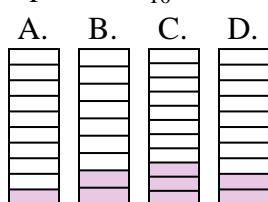
7) Which of the shapes below is shaded to represent $\frac{3}{5}$?



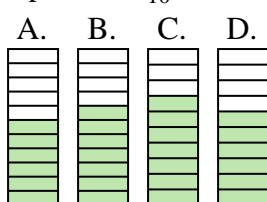
8) Which of the shapes below is shaded to represent $\frac{7}{10}$?



9) Which of the shapes below is shaded to represent $\frac{2}{10}$?



10) Which of the shapes below is shaded to represent $\frac{6}{10}$?

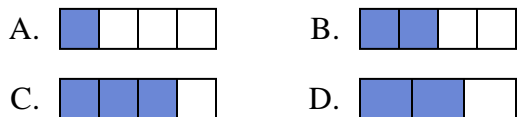


1. _____
2. _____
3. _____
4. _____
5. _____
6. _____
7. _____
8. _____
9. _____
10. _____

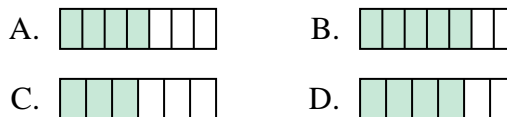


Determine which choice best answers each question.

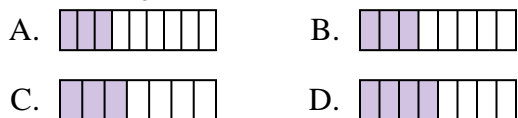
1) Which of the shapes below is shaded to represent $\frac{2}{4}$?



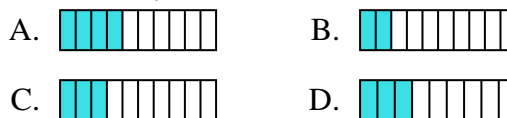
2) Which of the shapes below is shaded to represent $\frac{4}{6}$?



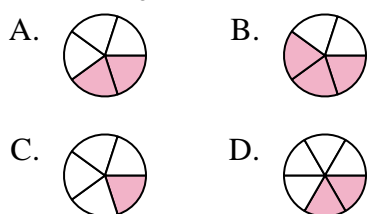
3) Which of the shapes below is shaded to represent $\frac{3}{8}$?



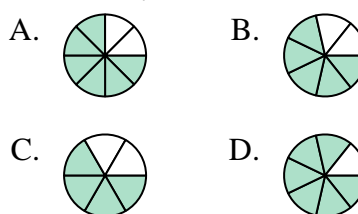
4) Which of the shapes below is shaded to represent $\frac{3}{10}$?



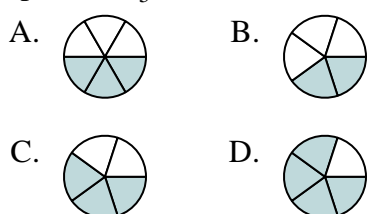
5) Which of the shapes below is shaded to represent $\frac{2}{5}$?



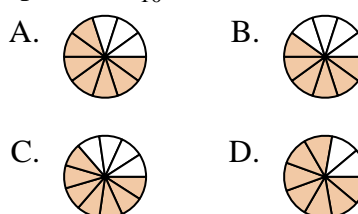
6) Which of the shapes below is shaded to represent $\frac{5}{7}$?



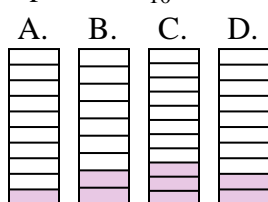
7) Which of the shapes below is shaded to represent $\frac{3}{5}$?



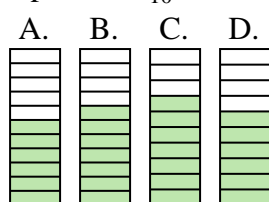
8) Which of the shapes below is shaded to represent $\frac{7}{10}$?



9) Which of the shapes below is shaded to represent $\frac{2}{10}$?



10) Which of the shapes below is shaded to represent $\frac{6}{10}$?



Answers

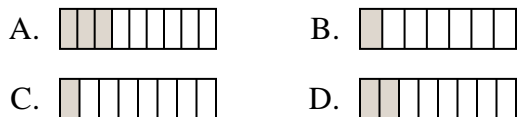
1. **B**
2. **D**
3. **B**
4. **C**
5. **A**
6. **B**
7. **C**
8. **A**
9. **D**
10. **D**



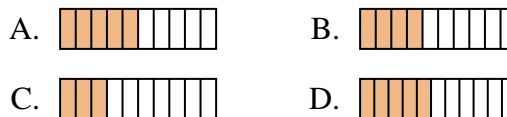
Determine which choice best answers each question.

Answers

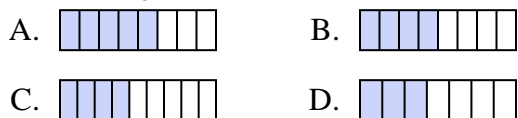
1) Which of the shapes below is shaded to represent $\frac{2}{8}$?



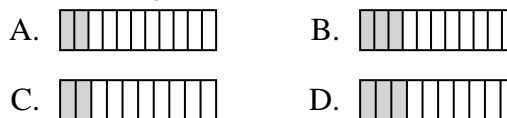
2) Which of the shapes below is shaded to represent $\frac{4}{10}$?



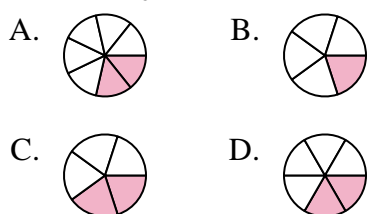
3) Which of the shapes below is shaded to represent $\frac{4}{8}$?



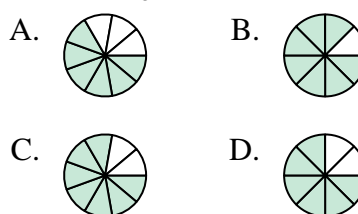
4) Which of the shapes below is shaded to represent $\frac{2}{10}$?



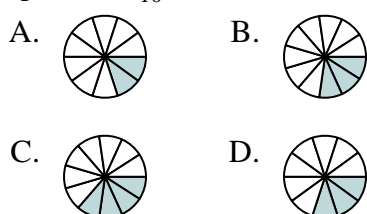
5) Which of the shapes below is shaded to represent $\frac{2}{6}$?



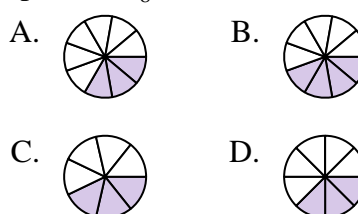
6) Which of the shapes below is shaded to represent $\frac{6}{8}$?



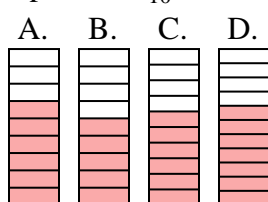
7) Which of the shapes below is shaded to represent $\frac{3}{10}$?



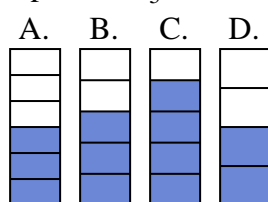
8) Which of the shapes below is shaded to represent $\frac{3}{8}$?



9) Which of the shapes below is shaded to represent $\frac{6}{10}$?



10) Which of the shapes below is shaded to represent $\frac{3}{5}$?



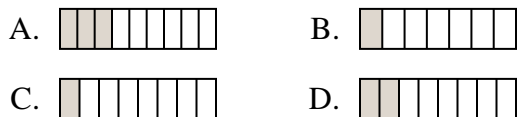
1. _____
2. _____
3. _____
4. _____
5. _____
6. _____
7. _____
8. _____
9. _____
10. _____



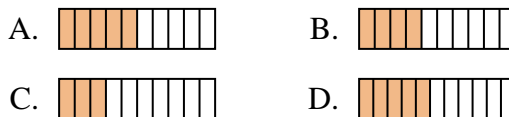
Determine which choice best answers each question.

Answers

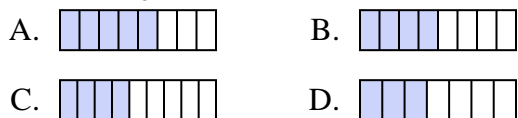
1) Which of the shapes below is shaded to represent $\frac{2}{8}$?



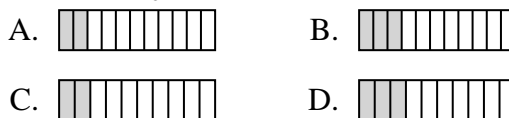
2) Which of the shapes below is shaded to represent $\frac{4}{10}$?



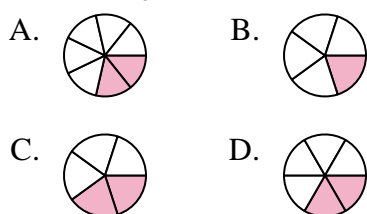
3) Which of the shapes below is shaded to represent $\frac{4}{8}$?



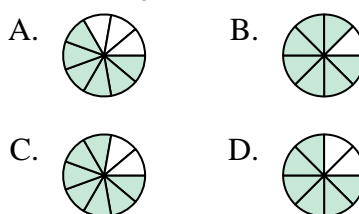
4) Which of the shapes below is shaded to represent $\frac{2}{10}$?



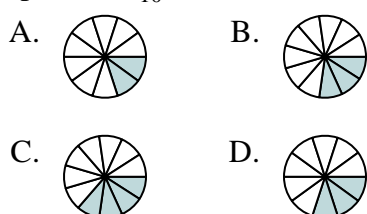
5) Which of the shapes below is shaded to represent $\frac{2}{6}$?



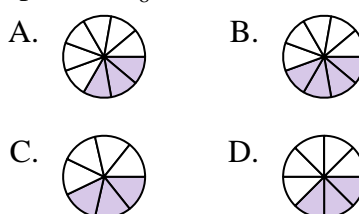
6) Which of the shapes below is shaded to represent $\frac{6}{8}$?



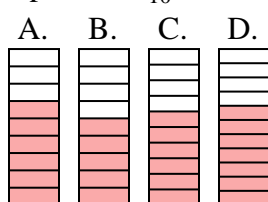
7) Which of the shapes below is shaded to represent $\frac{3}{10}$?



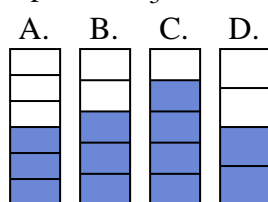
8) Which of the shapes below is shaded to represent $\frac{3}{8}$?



9) Which of the shapes below is shaded to represent $\frac{6}{10}$?



10) Which of the shapes below is shaded to represent $\frac{3}{5}$?



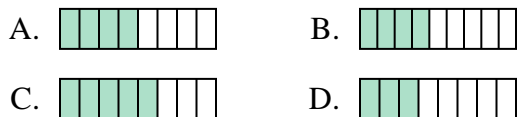
1. **D**
 2. **B**
 3. **B**
 4. **C**
 5. **D**
 6. **D**
 7. **D**
 8. **D**
 9. **C**
 10. **B**



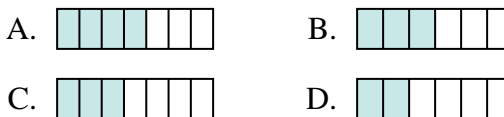
Determine which choice best answers each question.

Answers

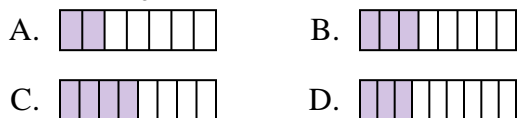
1) Which of the shapes below is shaded to represent $\frac{4}{8}$?



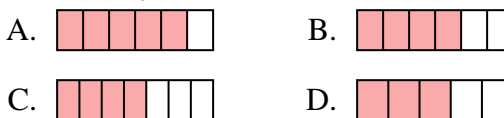
2) Which of the shapes below is shaded to represent $\frac{3}{6}$?



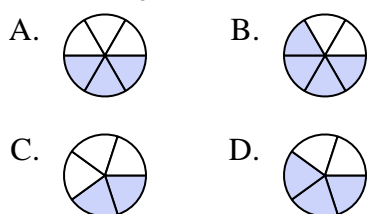
3) Which of the shapes below is shaded to represent $\frac{3}{8}$?



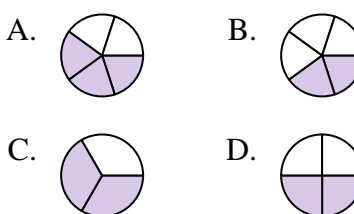
4) Which of the shapes below is shaded to represent $\frac{4}{6}$?



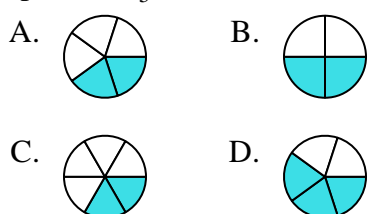
5) Which of the shapes below is shaded to represent $\frac{3}{5}$?



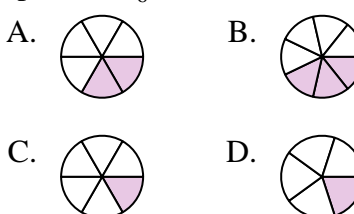
6) Which of the shapes below is shaded to represent $\frac{2}{4}$?



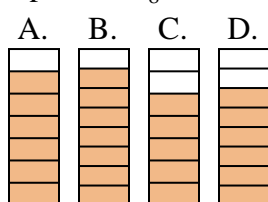
7) Which of the shapes below is shaded to represent $\frac{2}{5}$?



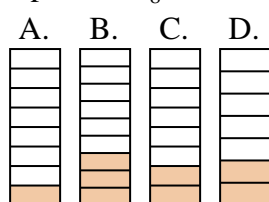
8) Which of the shapes below is shaded to represent $\frac{2}{6}$?



9) Which of the shapes below is shaded to represent $\frac{6}{8}$?



10) Which of the shapes below is shaded to represent $\frac{2}{8}$?







1. _____
2. _____
3. _____
4. _____
5. _____
6. _____
7. _____
8. _____
9. _____
10. _____






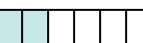
Determine which choice best answers each question.

Answers




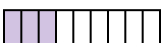
1) Which of the shapes below is shaded to represent $\frac{4}{8}$?

- A.  B. 
 C.  D. 



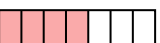

2) Which of the shapes below is shaded to represent $\frac{3}{6}$?

- A.  B. 
 C.  D. 





3) Which of the shapes below is shaded to represent $\frac{3}{8}$?

- A.  B. 
 C.  D. 





4) Which of the shapes below is shaded to represent $\frac{4}{6}$?

- A.  B. 
 C.  D. 





5) Which of the shapes below is shaded to represent $\frac{3}{5}$?

- A.  B. 
 C.  D. 





6) Which of the shapes below is shaded to represent $\frac{2}{4}$?

- A.  B. 
 C.  D. 





7) Which of the shapes below is shaded to represent $\frac{2}{5}$?

- A.  B. 
 C.  D. 





8) Which of the shapes below is shaded to represent $\frac{2}{6}$?

- A.  B. 
 C.  D. 

9) Which of the shapes below is shaded to represent $\frac{6}{8}$?

- A.  B. 
 C.  D. 

10) Which of the shapes below is shaded to represent $\frac{2}{8}$?

- A.  B. 
 C.  D. 

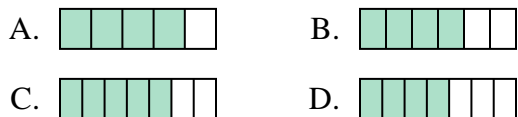
1. **A**
 2. **B**
 3. **B**
 4. **B**
 5. **D**
 6. **D**
 7. **A**
 8. **A**
 9. **D**
 10. **C**



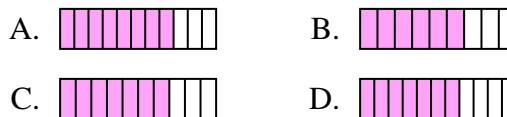
Determine which choice best answers each question.

Answers

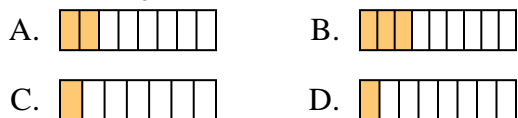
1) Which of the shapes below is shaded to represent $\frac{4}{6}$?



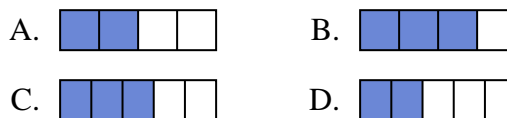
2) Which of the shapes below is shaded to represent $\frac{7}{10}$?



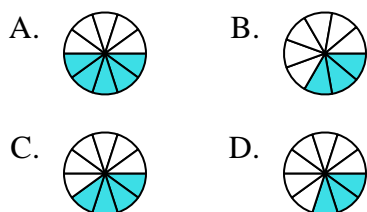
3) Which of the shapes below is shaded to represent $\frac{2}{8}$?



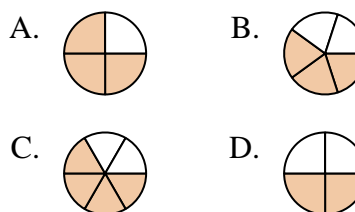
4) Which of the shapes below is shaded to represent $\frac{2}{4}$?



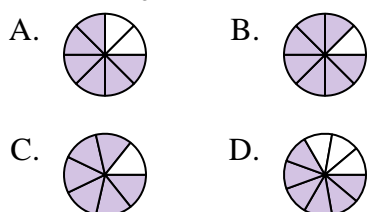
5) Which of the shapes below is shaded to represent $\frac{4}{10}$?



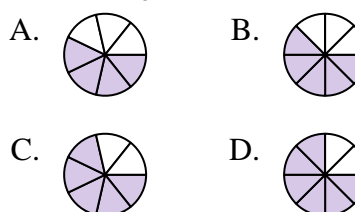
6) Which of the shapes below is shaded to represent $\frac{3}{5}$?



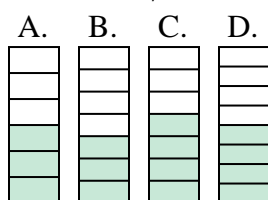
7) Which of the shapes below is shaded to represent $\frac{6}{8}$?



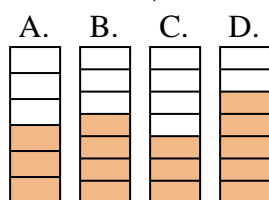
8) Which of the shapes below is shaded to represent $\frac{5}{8}$?



9) Which of the shapes below is shaded to represent $\frac{3}{7}$?



10) Which of the shapes below is shaded to represent $\frac{4}{7}$?



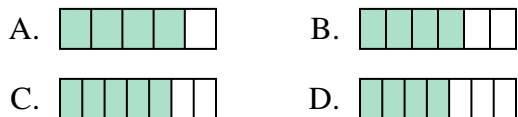
1. _____
2. _____
3. _____
4. _____
5. _____
6. _____
7. _____
8. _____
9. _____
10. _____



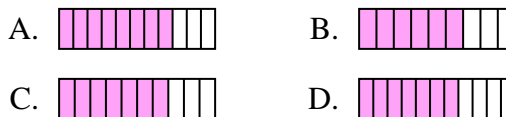
Determine which choice best answers each question.

Answers

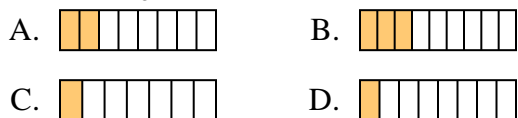
1) Which of the shapes below is shaded to represent $\frac{4}{6}$?



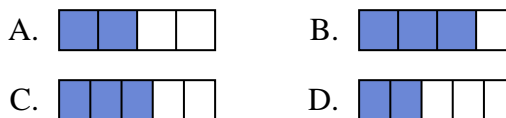
2) Which of the shapes below is shaded to represent $\frac{7}{10}$?



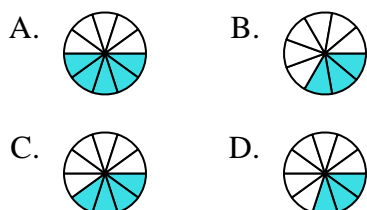
3) Which of the shapes below is shaded to represent $\frac{2}{8}$?



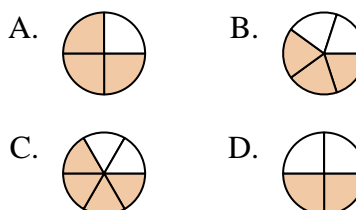
4) Which of the shapes below is shaded to represent $\frac{2}{4}$?



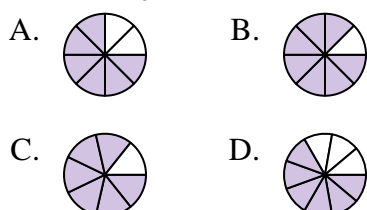
5) Which of the shapes below is shaded to represent $\frac{4}{10}$?



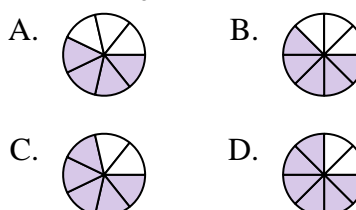
6) Which of the shapes below is shaded to represent $\frac{3}{5}$?



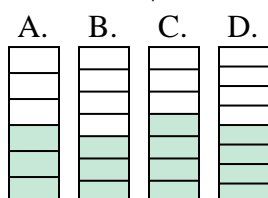
7) Which of the shapes below is shaded to represent $\frac{6}{8}$?



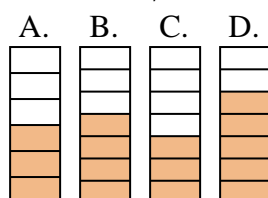
8) Which of the shapes below is shaded to represent $\frac{5}{8}$?



9) Which of the shapes below is shaded to represent $\frac{3}{7}$?



10) Which of the shapes below is shaded to represent $\frac{4}{7}$?



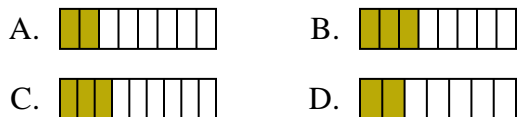
1. **B**
2. **C**
3. **A**
4. **A**
5. **C**
6. **B**
7. **A**
8. **B**
9. **B**
10. **B**



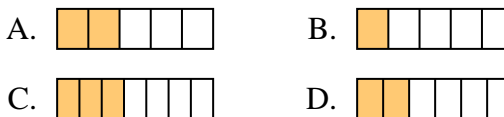
Determine which choice best answers each question.

Answers

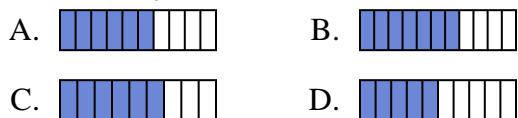
1) Which of the shapes below is shaded to represent $\frac{3}{8}$?



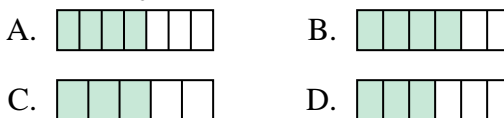
2) Which of the shapes below is shaded to represent $\frac{2}{6}$?



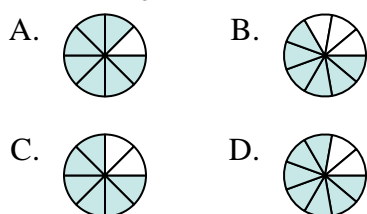
3) Which of the shapes below is shaded to represent $\frac{6}{10}$?



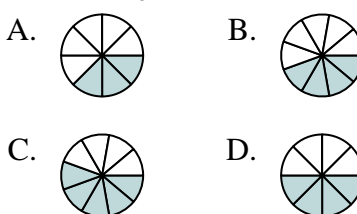
4) Which of the shapes below is shaded to represent $\frac{4}{6}$?



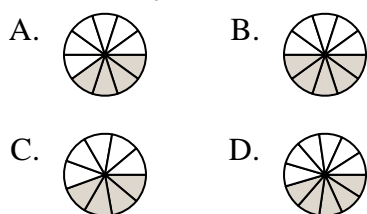
5) Which of the shapes below is shaded to represent $\frac{6}{8}$?



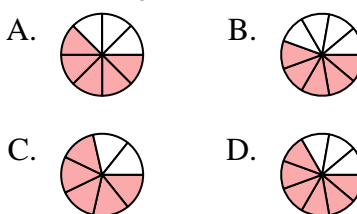
6) Which of the shapes below is shaded to represent $\frac{4}{8}$?



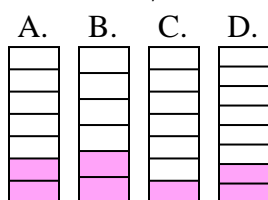
7) Which of the shapes below is shaded to represent $\frac{4}{10}$?



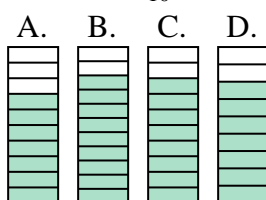
8) Which of the shapes below is shaded to represent $\frac{5}{8}$?



9) Which of the shapes below is shaded to represent $\frac{2}{7}$?



10) Which of the shapes below is shaded to represent $\frac{8}{10}$?

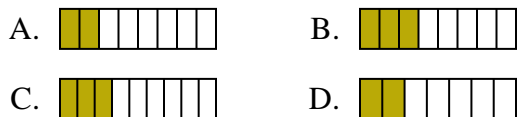


1. _____
2. _____
3. _____
4. _____
5. _____
6. _____
7. _____
8. _____
9. _____
10. _____

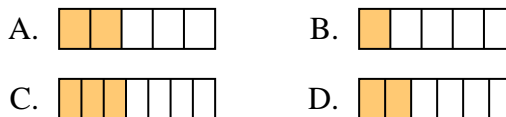


Determine which choice best answers each question.

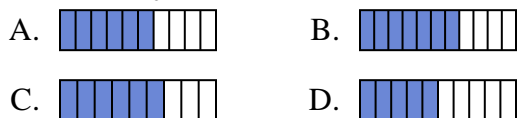
1) Which of the shapes below is shaded to represent $\frac{3}{8}$?



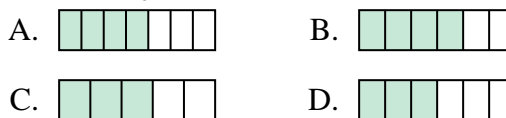
2) Which of the shapes below is shaded to represent $\frac{2}{6}$?



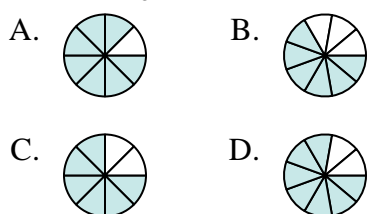
3) Which of the shapes below is shaded to represent $\frac{6}{10}$?



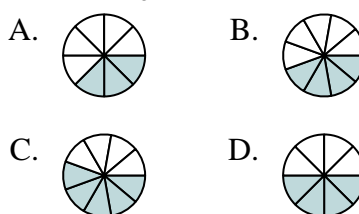
4) Which of the shapes below is shaded to represent $\frac{4}{6}$?



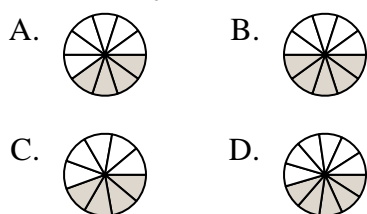
5) Which of the shapes below is shaded to represent $\frac{6}{8}$?



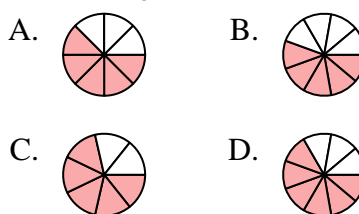
6) Which of the shapes below is shaded to represent $\frac{4}{8}$?



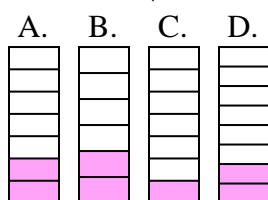
7) Which of the shapes below is shaded to represent $\frac{4}{10}$?



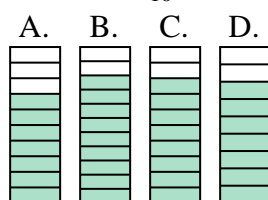
8) Which of the shapes below is shaded to represent $\frac{5}{8}$?



9) Which of the shapes below is shaded to represent $\frac{2}{7}$?



10) Which of the shapes below is shaded to represent $\frac{8}{10}$?



Answers

1. **B**
2. **D**
3. **A**
4. **B**
5. **C**
6. **D**
7. **A**
8. **A**
9. **A**
10. **C**