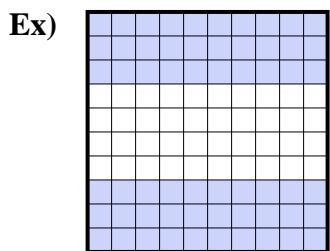


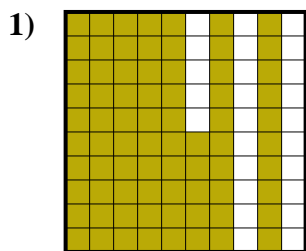




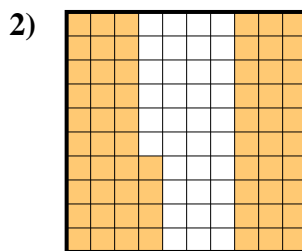
Determine the value written as a fraction , decimal & a percent.



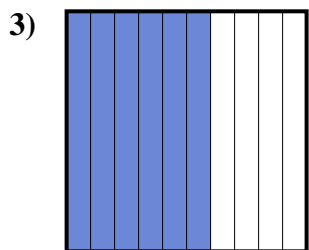
fraction  $\frac{60}{100}$   
 decimal  $0.60$   
 percent  $60$



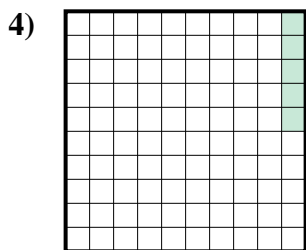
fraction  $\frac{75}{100}$   
 decimal  $0.75$   
 percent  $75$



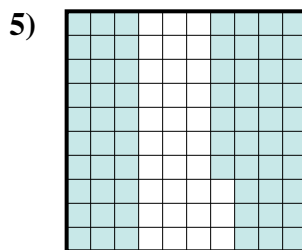
fraction  $\frac{64}{100}$   
 decimal  $0.64$   
 percent  $64$



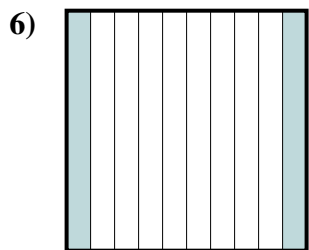
fraction  $\frac{6}{10}$   
 decimal  $0.6$   
 percent  $60$



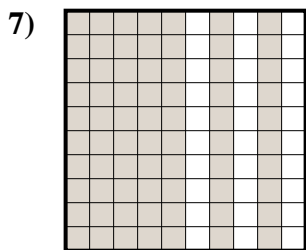
fraction  $\frac{5}{100}$   
 decimal  $0.05$   
 percent  $5$



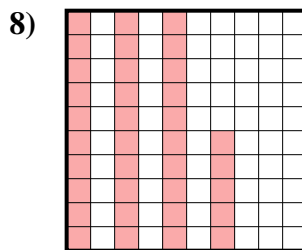
fraction  $\frac{67}{100}$   
 decimal  $0.67$   
 percent  $67$



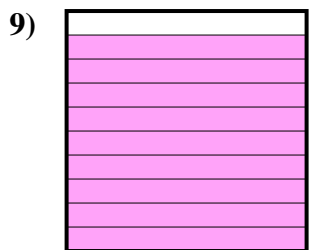
fraction  $\frac{2}{10}$   
 decimal  $0.2$   
 percent  $20$




fraction  $\frac{70}{100}$   
 decimal  $0.70$   
 percent  $70$



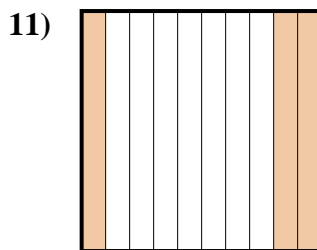
fraction  $\frac{35}{100}$   
 decimal  $0.35$   
 percent  $35$



fraction  $\frac{9}{10}$   
 decimal  $0.9$   
 percent  $90$



fraction  $\frac{8}{10}$   
 decimal  $0.8$   
 percent  $80$



fraction  $\frac{3}{10}$   
 decimal  $0.3$   
 percent  $30$

**Answers**

- Ex.  $\frac{60}{100}$  **0.60** **60%**  
 1.  $\frac{75}{100}$  **0.75** **75%**  
 2.  $\frac{64}{100}$  **0.64** **64%**  
 3.  $\frac{6}{10}$  **0.6** **60%**  
 4.  $\frac{5}{100}$  **0.05** **5%**  
 5.  $\frac{67}{100}$  **0.67** **67%**  
 6.  $\frac{2}{10}$  **0.2** **20%**  
 7.  $\frac{70}{100}$  **0.70** **70%**  
 8.  $\frac{35}{100}$  **0.35** **35%**  
 9.  $\frac{9}{10}$  **0.9** **90%**  
 10.  $\frac{8}{10}$  **0.8** **80%**  
 11.  $\frac{3}{10}$  **0.3** **30%**