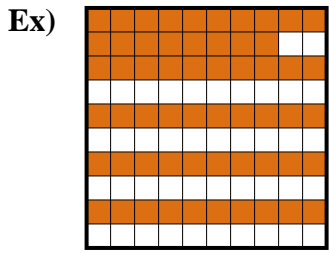


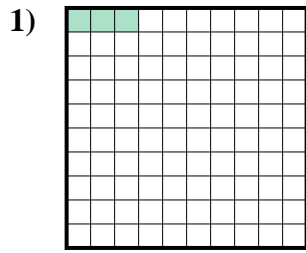


Determine the value written as a fraction , decimal & a percent.

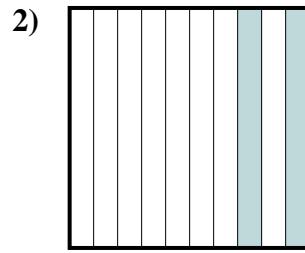
**Answers**



fraction  $\frac{58}{100}$   
 decimal 0.58  
 percent 58



fraction \_\_\_\_\_  
 decimal \_\_\_\_\_  
 percent \_\_\_\_\_



fraction \_\_\_\_\_  
 decimal \_\_\_\_\_  
 percent \_\_\_\_\_

Ex.  $\frac{58}{100}$  **0.58** **58%**

1. \_\_\_\_\_

2. \_\_\_\_\_

3. \_\_\_\_\_

4. \_\_\_\_\_

5. \_\_\_\_\_

6. \_\_\_\_\_

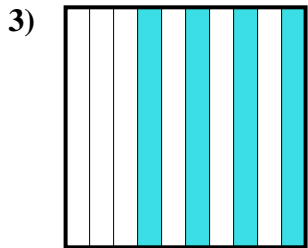
7. \_\_\_\_\_

8. \_\_\_\_\_

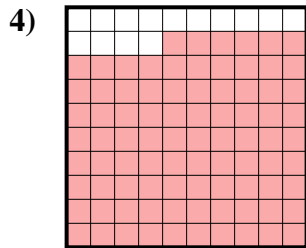
9. \_\_\_\_\_

10. \_\_\_\_\_

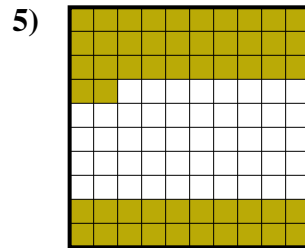
11. \_\_\_\_\_




fraction \_\_\_\_\_  
 decimal \_\_\_\_\_  
 percent \_\_\_\_\_



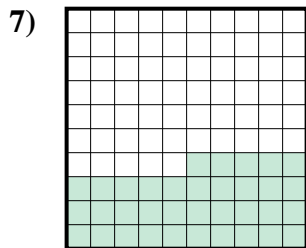
fraction \_\_\_\_\_  
 decimal \_\_\_\_\_  
 percent \_\_\_\_\_



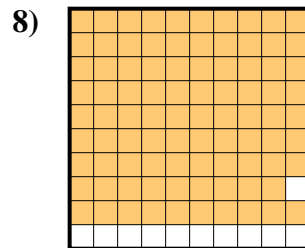
fraction \_\_\_\_\_  
 decimal \_\_\_\_\_  
 percent \_\_\_\_\_



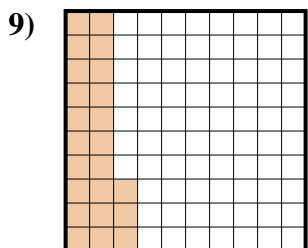
fraction \_\_\_\_\_  
 decimal \_\_\_\_\_  
 percent \_\_\_\_\_



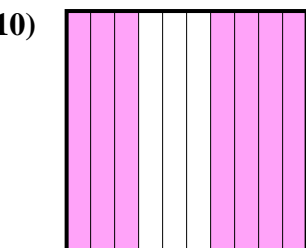
fraction \_\_\_\_\_  
 decimal \_\_\_\_\_  
 percent \_\_\_\_\_



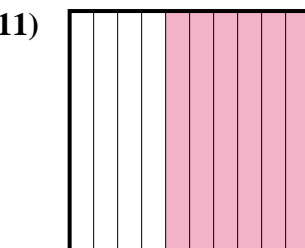
fraction \_\_\_\_\_  
 decimal \_\_\_\_\_  
 percent \_\_\_\_\_



fraction \_\_\_\_\_  
 decimal \_\_\_\_\_  
 percent \_\_\_\_\_



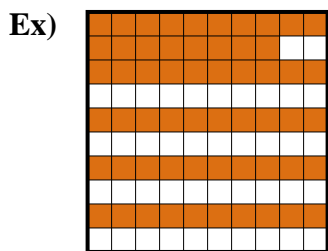
fraction \_\_\_\_\_  
 decimal \_\_\_\_\_  
 percent \_\_\_\_\_



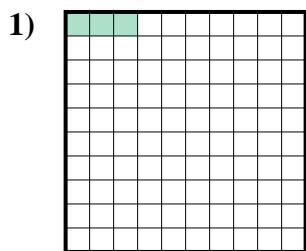
fraction \_\_\_\_\_  
 decimal \_\_\_\_\_  
 percent \_\_\_\_\_



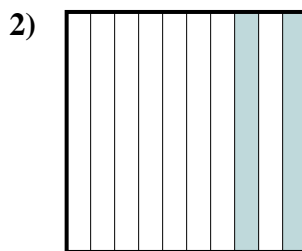
Determine the value written as a fraction , decimal & a percent.



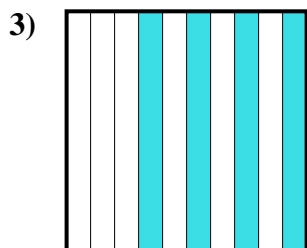
fraction  $\frac{58}{100}$   
 decimal  $0.58$   
 percent  $58$



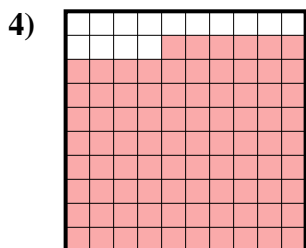
fraction  $\frac{3}{100}$   
 decimal  $0.03$   
 percent  $3$



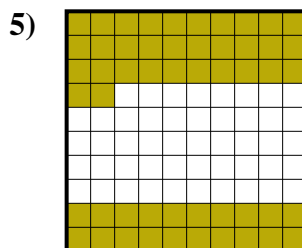
fraction  $\frac{2}{10}$   
 decimal  $0.2$   
 percent  $20$




fraction  $\frac{4}{10}$   
 decimal  $0.4$   
 percent  $40$



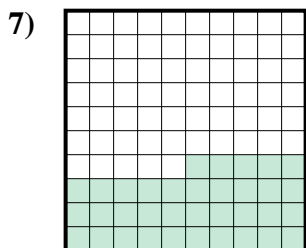
fraction  $\frac{86}{100}$   
 decimal  $0.86$   
 percent  $86$



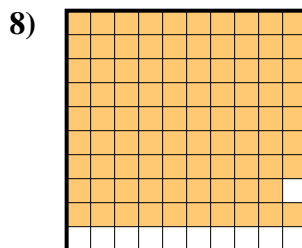
fraction  $\frac{52}{100}$   
 decimal  $0.52$   
 percent  $52$



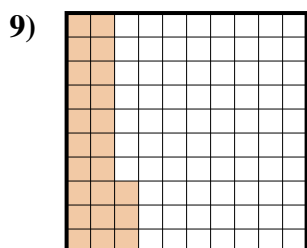
fraction  $\frac{5}{10}$   
 decimal  $0.5$   
 percent  $50$



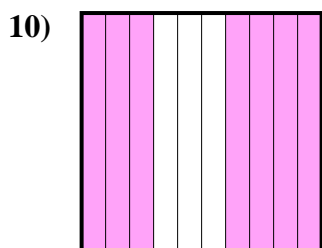
fraction  $\frac{35}{100}$   
 decimal  $0.35$   
 percent  $35$



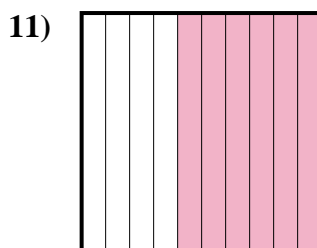
fraction  $\frac{89}{100}$   
 decimal  $0.89$   
 percent  $89$



fraction  $\frac{23}{100}$   
 decimal  $0.23$   
 percent  $23$



fraction  $\frac{7}{10}$   
 decimal  $0.7$   
 percent  $70$



fraction  $\frac{6}{10}$   
 decimal  $0.6$   
 percent  $60$

**Answers**

Ex.	$\frac{58}{100}$	<b>0.58</b>	<b>58%</b>
1.	$\frac{3}{100}$	<b>0.03</b>	<b>3%</b>
2.	$\frac{2}{10}$	<b>0.2</b>	<b>20%</b>
3.	$\frac{4}{10}$	<b>0.4</b>	<b>40%</b>
4.	$\frac{86}{100}$	<b>0.86</b>	<b>86%</b>
5.	$\frac{52}{100}$	<b>0.52</b>	<b>52%</b>
6.	$\frac{5}{10}$	<b>0.5</b>	<b>50%</b>
7.	$\frac{35}{100}$	<b>0.35</b>	<b>35%</b>
8.	$\frac{89}{100}$	<b>0.89</b>	<b>89%</b>
9.	$\frac{23}{100}$	<b>0.23</b>	<b>23%</b>
10.	$\frac{7}{10}$	<b>0.7</b>	<b>70%</b>
11.	$\frac{6}{10}$	<b>0.6</b>	<b>60%</b>