

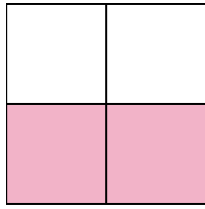


Write the shaded amount as a fraction.

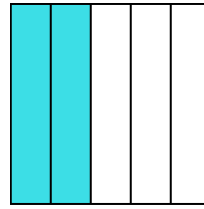
Ex)



1)



2)




**Answers**

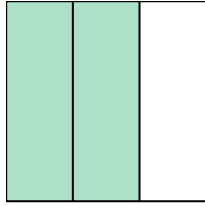
Ex.  $\frac{1}{4}$

- 1. \_\_\_\_\_
- 2. \_\_\_\_\_
- 3. \_\_\_\_\_
- 4. \_\_\_\_\_
- 5. \_\_\_\_\_
- 6. \_\_\_\_\_
- 7. \_\_\_\_\_
- 8. \_\_\_\_\_
- 9. \_\_\_\_\_
- 10. \_\_\_\_\_
- 11. \_\_\_\_\_
- 12. \_\_\_\_\_
- 13. \_\_\_\_\_
- 14. \_\_\_\_\_

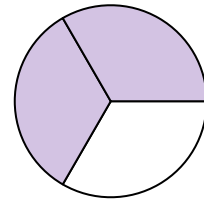
3)



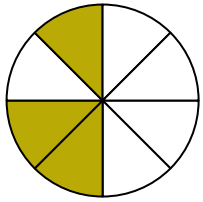
4)



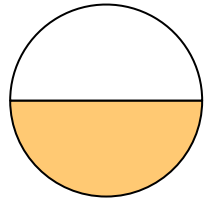
5)



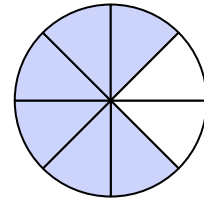
6)




7)




8)




9)




10)



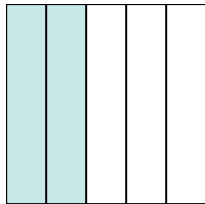
11)



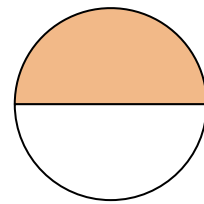
12)



13)

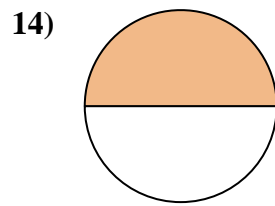
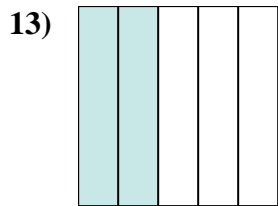
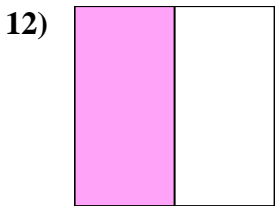
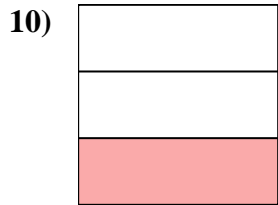
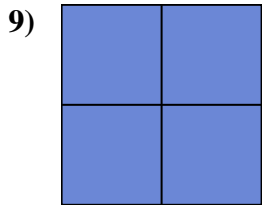
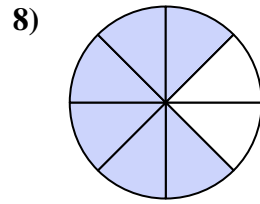
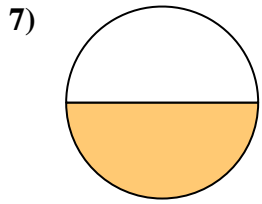
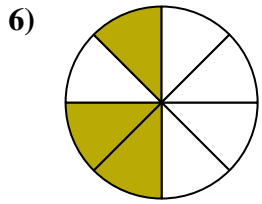
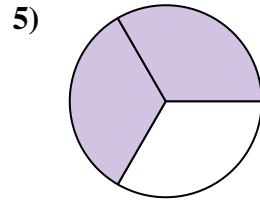
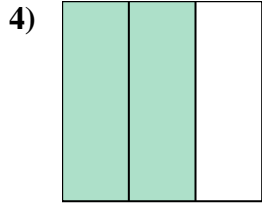
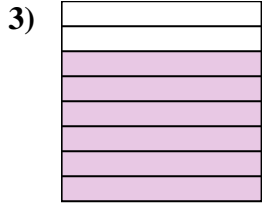
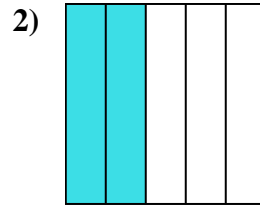
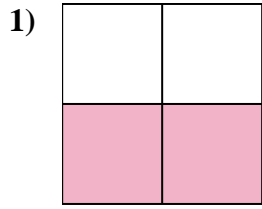
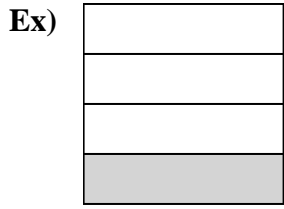


14)





Write the shaded amount as a fraction.



Answers

Ex. 1/4

1. 2/4

2. 2/5

3. 6/8

4. 2/3

5. 2/3

6. 3/8

7. 1/2

8. 6/8

9. 4/4

10. 1/3

11. 5/5

12. 1/2

13. 2/5

14. 1/2