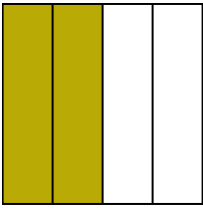


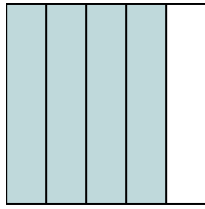


Write the shaded amount as a fraction.

Ex)



1)



2)



**Answers**

Ex.  $\frac{2}{4}$

1. \_\_\_\_\_

2. \_\_\_\_\_

3. \_\_\_\_\_

4. \_\_\_\_\_

5. \_\_\_\_\_

6. \_\_\_\_\_

7. \_\_\_\_\_

8. \_\_\_\_\_

9. \_\_\_\_\_

10. \_\_\_\_\_

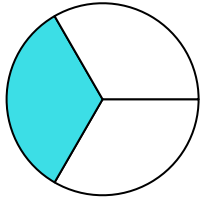
11. \_\_\_\_\_

12. \_\_\_\_\_


13. \_\_\_\_\_

14. \_\_\_\_\_

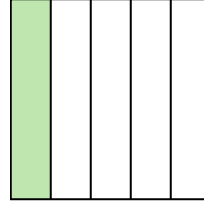
3)




4)



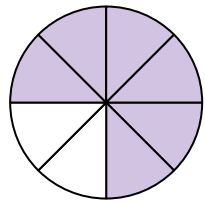
5)




6)



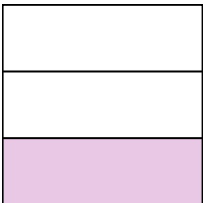
7)



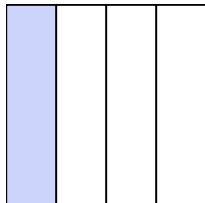
8)




9)




10)




11)



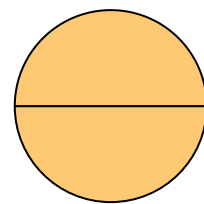
12)



13)



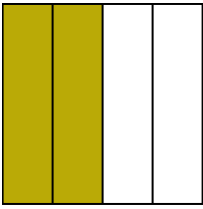
14)



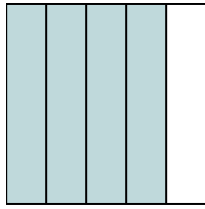


Write the shaded amount as a fraction.

Ex)



1)



2)



Answers

Ex. 2/4

1. 4/5

2. 4/4

3. 1/3

4. 2/2

5. 1/5

6. 7/8

7. 6/8

8. 3/3

9. 1/3

10. 1/4

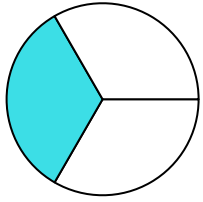
11. 8/8

12. 1/2


13. 2/5

14. 2/2

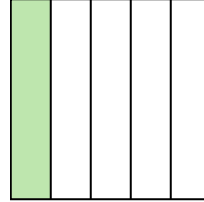
3)




4)



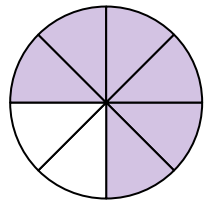
5)




6)



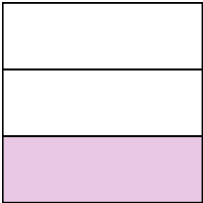
7)



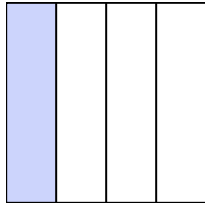
8)




9)




10)



11)



12)



13)



14)

