

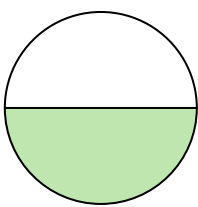


Write the shaded amount in word form.


Ex)



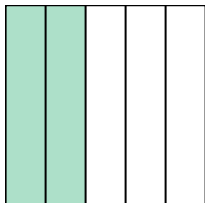
1)



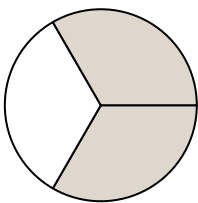
2)



3)




4)



5)




6)



7)



8)



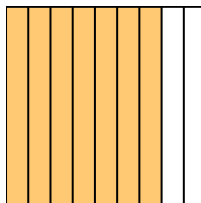
9)




10)




11)



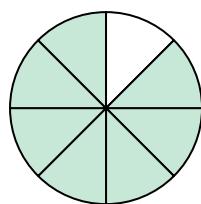
12)



13)



14)

**Answers**Ex. **one-half**

1. _____

2. _____

3. _____

4. _____

5. _____

6. _____

7. _____

8. _____

9. _____

10. _____

11. _____

12. _____

13. _____

14. _____

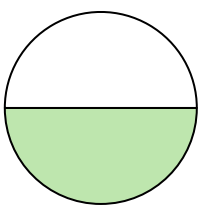


Write the shaded amount in word form.


Ex)



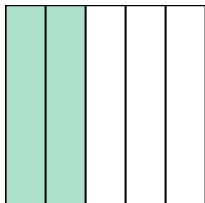
1)



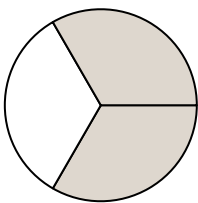
2)



3)




4)



5)




6)



7)



8)



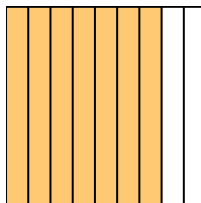
9)




10)




11)



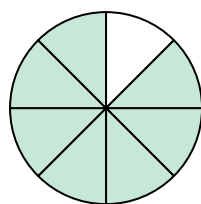
12)



13)



14)

**Answers**

Ex.

one-half

1.

one-half

2.

three-fourths

3.

two-fifths

4.

two-thirds

5.

three-eighths

6.

seven-ninths

7.

three-sixths

8.

three-sevenths

9.

four-sevenths

10.

one-tenth

11.

seven-ninths

12.

three-sixths

13.

two-thirds

14.

seven-eighths