

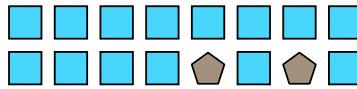


Solve each problem.

Ex) Express the moons as a fraction of the entire set.



1) Express the squares as a fraction of the entire set.



**Answers**

Ex.  $\frac{6}{8}$

1. \_\_\_\_\_

2. \_\_\_\_\_

3. \_\_\_\_\_

4. \_\_\_\_\_

5. \_\_\_\_\_

6. \_\_\_\_\_

7. \_\_\_\_\_

8. \_\_\_\_\_

9. \_\_\_\_\_


10. \_\_\_\_\_

11. \_\_\_\_\_


2) Express the stars as a fraction of the entire set.



3) Express the stars as a fraction of the entire set.



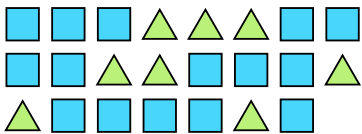
4) Express the moons as a fraction of the entire set.




5) Express the squares as a fraction of the entire set.



6) Express the triangles as a fraction of the entire set.



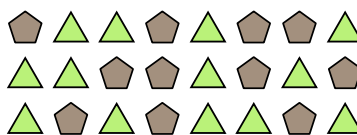
7) Express the stars as a fraction of the entire set.



8) Express the stars as a fraction of the entire set.



9) Express the triangles as a fraction of the entire set.



10) Express the circles as a fraction of the entire set.



11) Express the hearts as a fraction of the entire set.



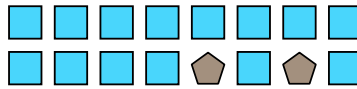


Solve each problem.

Ex) Express the moons as a fraction of the entire set.




1) Express the squares as a fraction of the entire set.




2) Express the stars as a fraction of the entire set.



3) Express the stars as a fraction of the entire set.



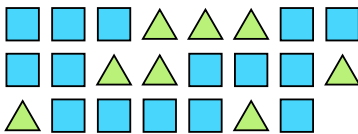
4) Express the moons as a fraction of the entire set.




5) Express the squares as a fraction of the entire set.



6) Express the triangles as a fraction of the entire set.



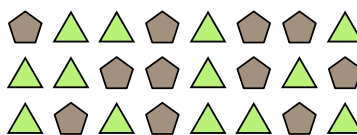
7) Express the stars as a fraction of the entire set.



8) Express the stars as a fraction of the entire set.



9) Express the triangles as a fraction of the entire set.



10) Express the circles as a fraction of the entire set.



11) Express the hearts as a fraction of the entire set.



**Answers**

Ex.  $\frac{6}{8}$

1.  $\frac{14}{16}$

2.  $\frac{11}{19}$

3.  $\frac{13}{25}$

4.  $\frac{5}{14}$

5.  $\frac{4}{7}$

6.  $\frac{8}{23}$

7.  $\frac{9}{24}$

8.  $\frac{6}{13}$

9.  $\frac{13}{24}$

10.  $\frac{3}{5}$

11.  $\frac{3}{12}$