



Convert the fraction to a decimal.

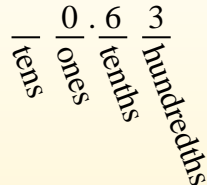
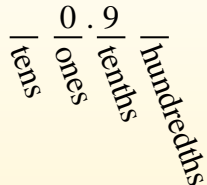

$$\frac{9}{10}$$

$$\frac{63}{100}$$

Converting from a fraction to a decimal is simple as long as you remember the place values.

The example above is nine-tenths. Lets look at how we'd write that as a decimal.

We do the same thing for the problem above only make sure we're in the hundredths place.



**Answers**

Ex. 0.63

1. \_\_\_\_\_

2. \_\_\_\_\_

3. \_\_\_\_\_

4. \_\_\_\_\_

5. \_\_\_\_\_

6. \_\_\_\_\_

7. \_\_\_\_\_

8. \_\_\_\_\_

9. \_\_\_\_\_

10. \_\_\_\_\_

11. \_\_\_\_\_

12. \_\_\_\_\_

13. \_\_\_\_\_

14. \_\_\_\_\_

15. \_\_\_\_\_

16. \_\_\_\_\_

17. \_\_\_\_\_

18. \_\_\_\_\_

19. \_\_\_\_\_

20. \_\_\_\_\_

Ex)  $\frac{63}{100} = 0.63$

1)  $\frac{9}{10} =$

2)  $\frac{3}{100} =$

3)  $\frac{3}{10} =$

4)  $\frac{7}{10} =$

5)  $\frac{2}{10} =$

6)  $\frac{5}{10} =$

7)  $\frac{4}{100} =$

8)  $\frac{4}{10} =$

9)  $\frac{5}{100} =$

10)  $\frac{8}{100} =$

11)  $\frac{8}{10} =$

12)  $\frac{2}{100} =$

13)  $\frac{42}{100} =$

14)  $\frac{19}{100} =$

15)  $\frac{58}{100} =$

16)  $\frac{6}{100} =$

17)  $\frac{83}{100} =$

18)  $\frac{26}{100} =$

19)  $\frac{74}{100} =$

20)  $\frac{1}{100} =$



**Convert the fraction to a decimal.**

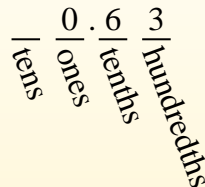
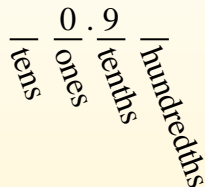

$$\frac{9}{10}$$

$$\frac{63}{100}$$

Converting from a fraction to a decimal is simple as long as you remember the place values.

The example above is nine-tenths. Lets look at how we'd write that as a decimal.

We do the same thing for the problem above only make sure we're in the hundredths place.



**Answers**

- Ex. 0.63
- 1. 0.9
- 2. 0.03
- 3. 0.3
- 4. 0.7
- 5. 0.2
- 6. 0.5
- 7. 0.04
- 8. 0.4
- 9. 0.05
- 10. 0.08
- 11. 0.8
- 12. 0.02
- 13. 0.42
- 14. 0.19
- 15. 0.58
- 16. 0.06
- 17. 0.83
- 18. 0.26
- 19. 0.74
- 20. 0.01

Ex)  $\frac{63}{100} = 0.63$

1)  $\frac{9}{10} = 0.9$

2)  $\frac{3}{100} = 0.03$

3)  $\frac{3}{10} = 0.3$

4)  $\frac{7}{10} = 0.7$

5)  $\frac{2}{10} = 0.2$

6)  $\frac{5}{10} = 0.5$

7)  $\frac{4}{100} = 0.04$

8)  $\frac{4}{10} = 0.4$

9)  $\frac{5}{100} = 0.05$

10)  $\frac{8}{100} = 0.08$

11)  $\frac{8}{10} = 0.8$

12)  $\frac{2}{100} = 0.02$

13)  $\frac{42}{100} = 0.42$

14)  $\frac{19}{100} = 0.19$

15)  $\frac{58}{100} = 0.58$

16)  $\frac{6}{100} = 0.06$

17)  $\frac{83}{100} = 0.83$

18)  $\frac{26}{100} = 0.26$

19)  $\frac{74}{100} = 0.74$

20)  $\frac{1}{100} = 0.01$