



Convert the fraction to a decimal.

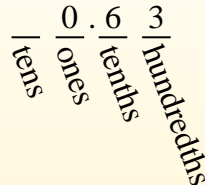
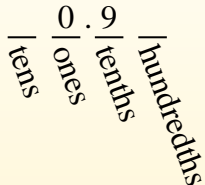

$$\frac{9}{10}$$

$$\frac{63}{100}$$

Converting from a fraction to a decimal is simple as long as you remember the place values.

The example above is nine-tenths. Lets look at how we'd write that as a decimal.

We do the same thing for the problem above only make sure we're in the hundredths place.



Answers

Ex. 0.05

1. _____

2. _____

3. _____

4. _____

5. _____

6. _____

7. _____

8. _____

9. _____

10. _____

11. _____

12. _____

13. _____

14. _____

15. _____

16. _____

17. _____

18. _____

19. _____

20. _____

Ex) $\frac{5}{100} = 0.05$

1) $\frac{6}{10} =$

2) $\frac{37}{100} =$

3) $\frac{2}{100} =$

4) $\frac{5}{10} =$

5) $\frac{7}{10} =$

6) $\frac{3}{100} =$

7) $\frac{3}{10} =$

8) $\frac{98}{100} =$

9) $\frac{91}{100} =$

10) $\frac{7}{100} =$

11) $\frac{6}{100} =$

12) $\frac{1}{10} =$

13) $\frac{4}{100} =$

14) $\frac{8}{100} =$

15) $\frac{4}{10} =$

16) $\frac{43}{100} =$

17) $\frac{2}{10} =$

18) $\frac{20}{100} =$

19) $\frac{21}{100} =$

20) $\frac{13}{100} =$

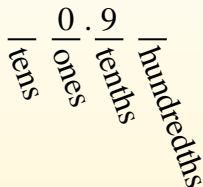


Convert the fraction to a decimal.

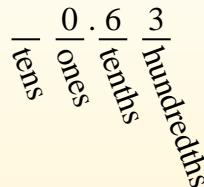
Converting from a fraction to a decimal is simple as long as you remember the place values.



$\frac{9}{10}$
The example above is nine-tenths. Lets look at how we'd write that as a decimal.



$\frac{63}{100}$
We do the same thing for the problem above only make sure we're in the hundredths place.



Ex) $\frac{5}{100} = 0.05$

1) $\frac{6}{10} = 0.6$

2) $\frac{37}{100} = 0.37$

3) $\frac{2}{100} = 0.02$

4) $\frac{5}{10} = 0.5$

5) $\frac{7}{10} = 0.7$

6) $\frac{3}{100} = 0.03$

7) $\frac{3}{10} = 0.3$

8) $\frac{98}{100} = 0.98$

9) $\frac{91}{100} = 0.91$

10) $\frac{7}{100} = 0.07$

11) $\frac{6}{100} = 0.06$

12) $\frac{1}{10} = 0.1$

13) $\frac{4}{100} = 0.04$

14) $\frac{8}{100} = 0.08$

15) $\frac{4}{10} = 0.4$

16) $\frac{43}{100} = 0.43$

17) $\frac{2}{10} = 0.2$

18) $\frac{20}{100} = 0.20$

19) $\frac{21}{100} = 0.21$

20) $\frac{13}{100} = 0.13$

Answers

Ex. 0.05

1. 0.6

2. 0.37

3. 0.02

4. 0.5

5. 0.7

6. 0.03

7. 0.3

8. 0.98

9. 0.91

10. 0.07

11. 0.06

12. 0.1

13. 0.04

14. 0.08

15. 0.4

16. 0.43

17. 0.2

18. 0.20

19. 0.21

20. 0.13