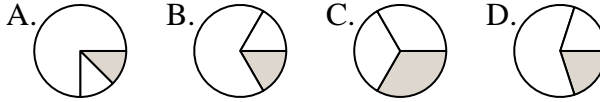




Determine which letter best represents each fraction.

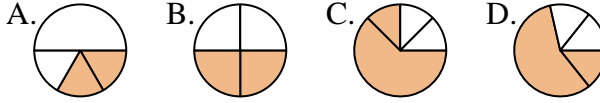
Answers

1) Which choice best represents $\frac{1}{3}$?



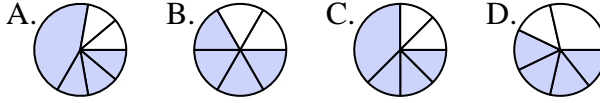
1. _____

2) Which choice best represents $\frac{2}{4}$?



2. _____

3) Which choice best represents $\frac{4}{6}$?



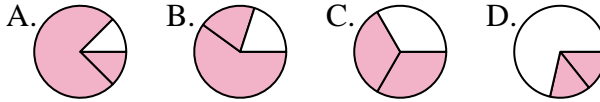
4. _____

4) Which choice best represents $\frac{1}{8}$?



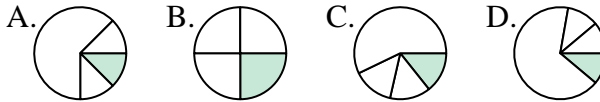
6. _____

5) Which choice best represents $\frac{2}{3}$?



7. _____

6) Which choice best represents $\frac{1}{4}$?



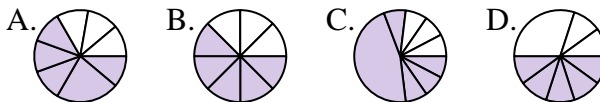
9. _____

7) Which choice best represents $\frac{3}{6}$?



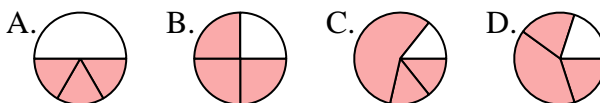
10. _____

8) Which choice best represents $\frac{5}{8}$?



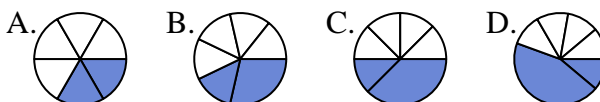
11. _____

9) Which choice best represents $\frac{3}{4}$?



12. _____

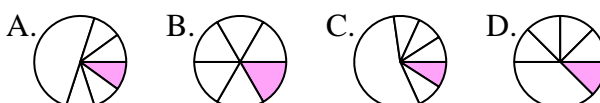
10) Which choice best represents $\frac{2}{6}$?



11) Which choice best represents $\frac{7}{8}$?







12) Which choice best represents $\frac{1}{6}$?









Determine which letter best represents each fraction.





Answers

1) Which choice best represents $\frac{1}{3}$?
 A.  B.  C.  D. 





1. **C**

2) Which choice best represents $\frac{2}{4}$?
 A.  B.  C.  D. 





2. **B**

3) Which choice best represents $\frac{4}{6}$?
 A.  B.  C.  D. 





3. **B**

4) Which choice best represents $\frac{1}{8}$?
 A.  B.  C.  D. 





4. **C**

5) Which choice best represents $\frac{2}{3}$?
 A.  B.  C.  D. 





5. **C**

6) Which choice best represents $\frac{1}{4}$?
 A.  B.  C.  D. 





6. **B**

7) Which choice best represents $\frac{3}{6}$?
 A.  B.  C.  D. 





7. **A**

8) Which choice best represents $\frac{5}{8}$?
 A.  B.  C.  D. 





8. **B**

9) Which choice best represents $\frac{3}{4}$?
 A.  B.  C.  D. 





9. **B**

10) Which choice best represents $\frac{2}{6}$?
 A.  B.  C.  D. 

10. **A**

11) Which choice best represents $\frac{7}{8}$?
 A.  B.  C.  D. 

11. **B**

12) Which choice best represents $\frac{1}{6}$?
 A.  B.  C.  D. 

12. **B**