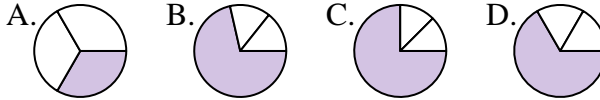




Determine which letter best represents each fraction.

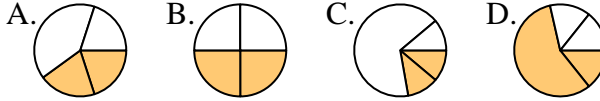
Answers

1) Which choice best represents $\frac{1}{3}$?



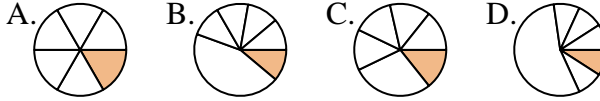
1. _____

2) Which choice best represents $\frac{2}{4}$?



2. _____

3) Which choice best represents $\frac{1}{6}$?



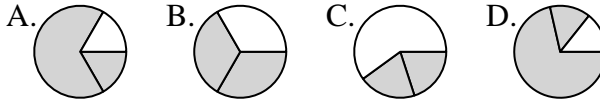
3. _____

4) Which choice best represents $\frac{6}{8}$?



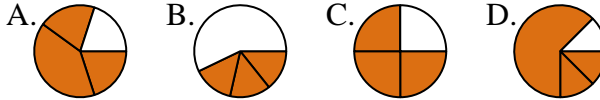
4. _____

5) Which choice best represents $\frac{2}{3}$?



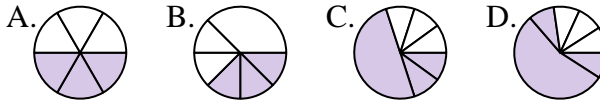
5. _____

6) Which choice best represents $\frac{3}{4}$?



6. _____

7) Which choice best represents $\frac{3}{6}$?



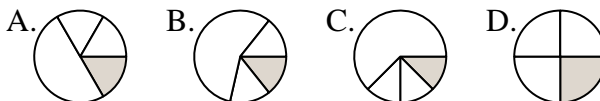
7. _____

8) Which choice best represents $\frac{1}{8}$?



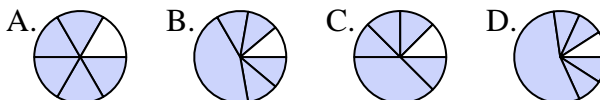
8. _____

9) Which choice best represents $\frac{1}{4}$?



9. _____

10) Which choice best represents $\frac{5}{6}$?



10. _____

11) Which choice best represents $\frac{2}{8}$?



11. _____

12) Which choice best represents $\frac{2}{6}$?



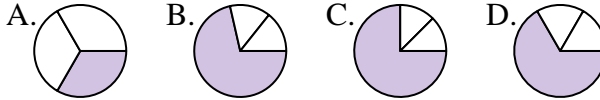
12. _____



Determine which letter best represents each fraction.

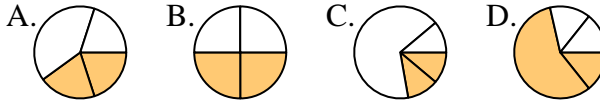
Answers

1) Which choice best represents $\frac{1}{3}$?



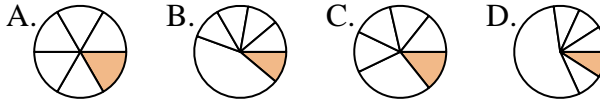
1. **A**

2) Which choice best represents $\frac{2}{4}$?



2. **B**

3) Which choice best represents $\frac{1}{6}$?



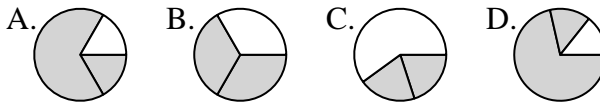
3. **A**

4) Which choice best represents $\frac{6}{8}$?



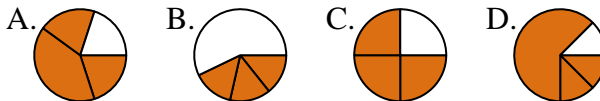
4. **A**

5) Which choice best represents $\frac{2}{3}$?



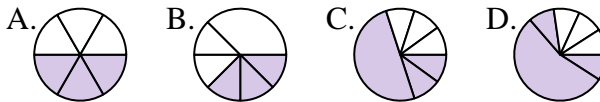
5. **B**

6) Which choice best represents $\frac{3}{4}$?



6. **C**

7) Which choice best represents $\frac{3}{6}$?



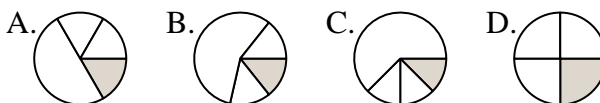
7. **A**

8) Which choice best represents $\frac{1}{8}$?



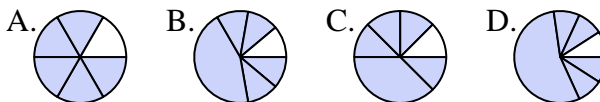
8. **D**

9) Which choice best represents $\frac{1}{4}$?



9. **D**

10) Which choice best represents $\frac{5}{6}$?



10. **A**

11) Which choice best represents $\frac{2}{8}$?



11. **D**

12) Which choice best represents $\frac{2}{6}$?



12. **B**