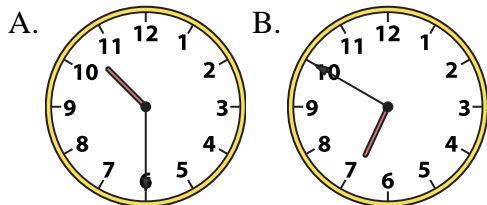




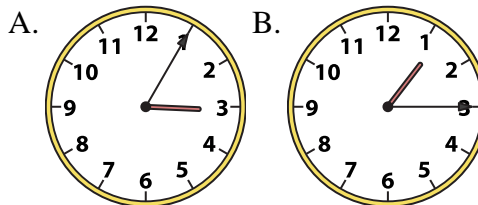
Determine which clock accurately shows the time.

Answers

1) 10:30



2) 1:15

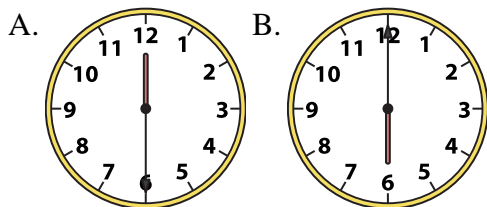


1. _____

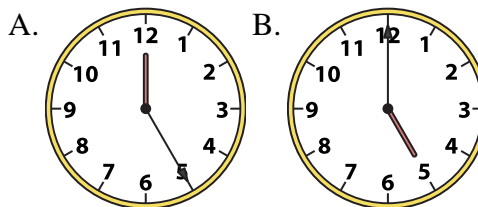
2. _____

3. _____

3) 6:00



4) 5:00

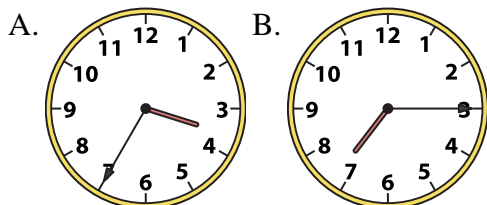


4. _____

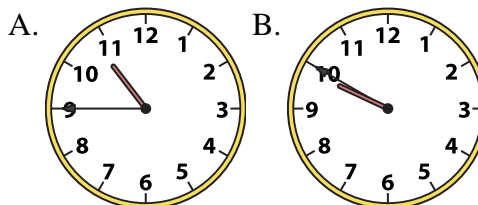
5. _____

6. _____

5) 7:15



6) 10:45



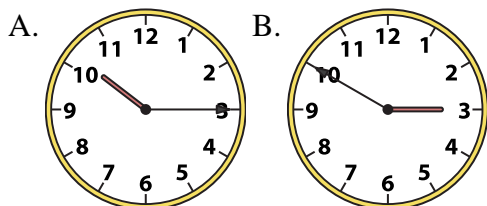
7. _____

8. _____

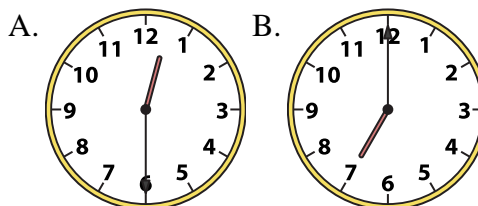
9. _____

10. _____

7) 10:15



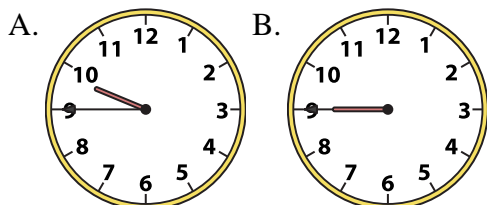
8) 12:30



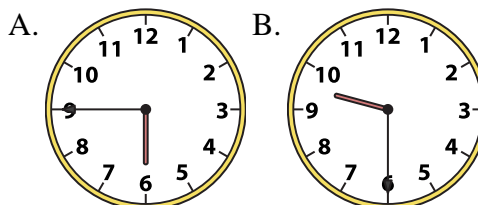
11. _____

12. _____

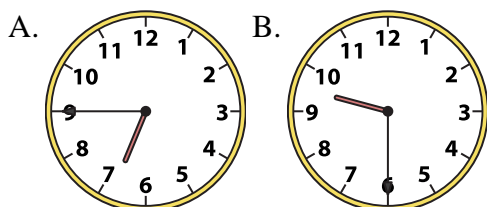
9) 9:45



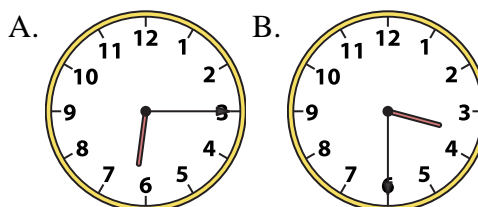
10) 9:30



11) 9:30



12) 3:30



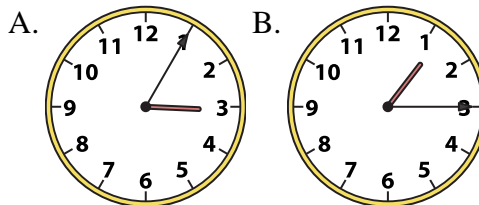
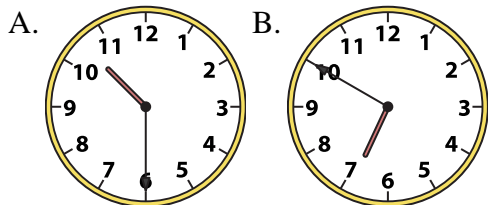


Determine which clock accurately shows the time.

Answers

1) 10:30

2) 1:15

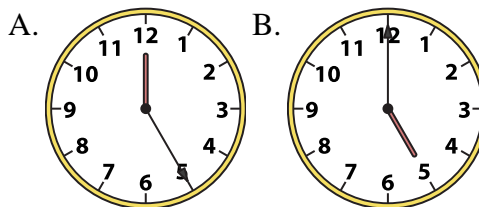
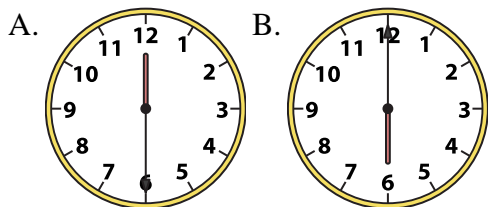


1. **A**

2. **B**

3) 6:00

4) 5:00



3. **B**

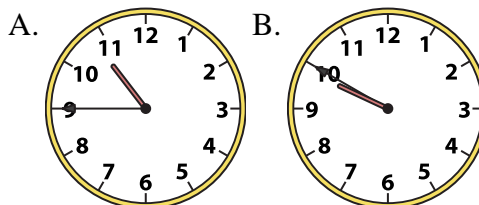
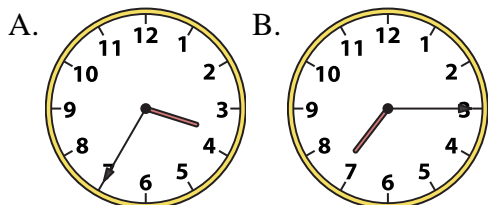
4. **B**

5. **B**

6. **A**

5) 7:15

6) 10:45



7. **A**

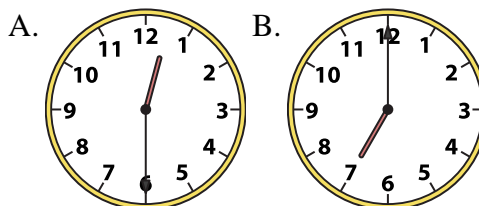
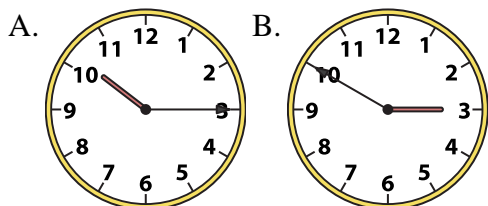
8. **A**

9. **A**

10. **B**

7) 10:15

8) 12:30

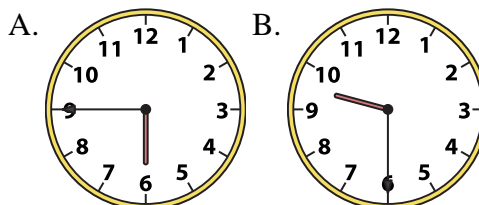
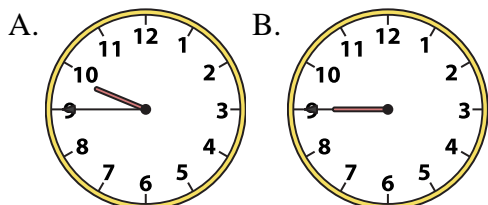


11. **B**

12. **B**

9) 9:45

10) 9:30



11) 9:30

12) 3:30

