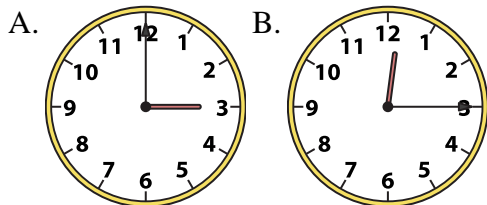




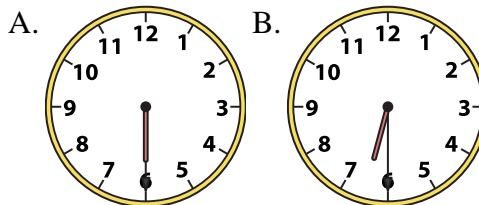
Determine which clock accurately shows the time.

**Answers**

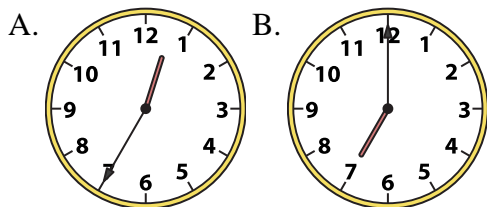
1) 12:15



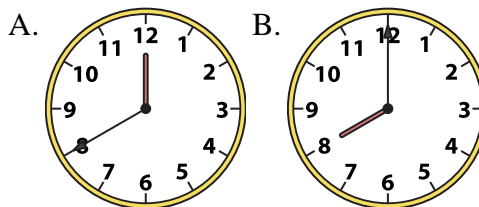
2) 6:30



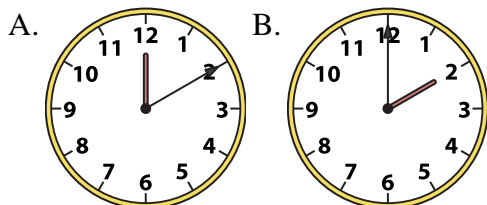
3) 7:00



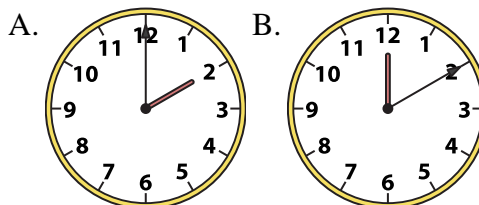
4) 8:00



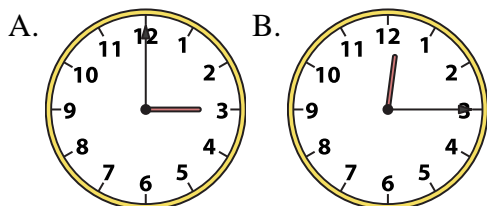
5) 2:00



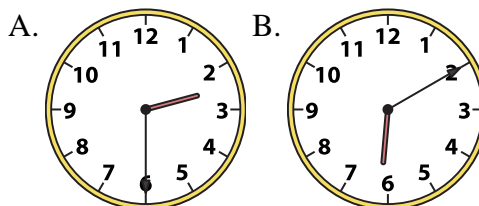
6) 2:00



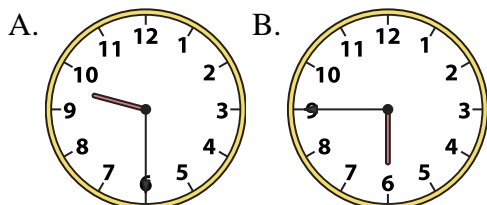
7) 12:15



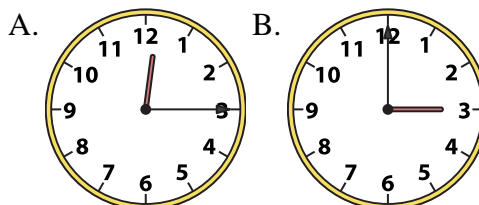
8) 2:30



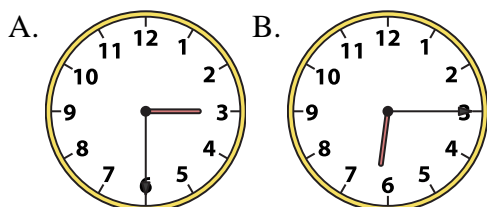
9) 9:30



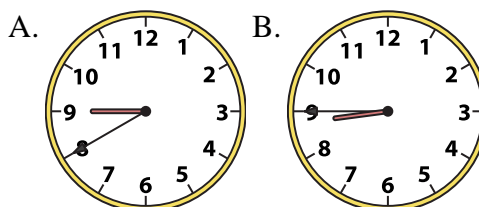
10) 3:00



11) 6:15



12) 8:45



1. \_\_\_\_\_
2. \_\_\_\_\_
3. \_\_\_\_\_
4. \_\_\_\_\_
5. \_\_\_\_\_
6. \_\_\_\_\_
7. \_\_\_\_\_
8. \_\_\_\_\_
9. \_\_\_\_\_
10. \_\_\_\_\_
11. \_\_\_\_\_
12. \_\_\_\_\_

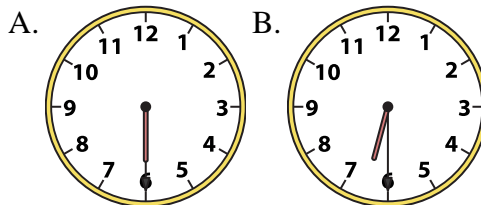
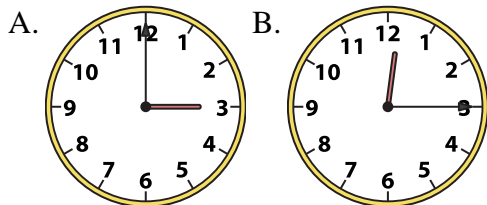


Determine which clock accurately shows the time.

**Answers**

1) 12:15

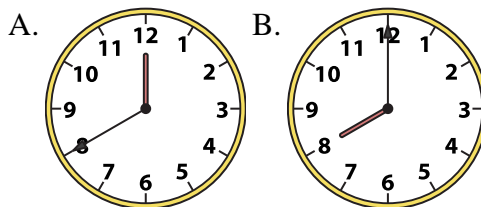
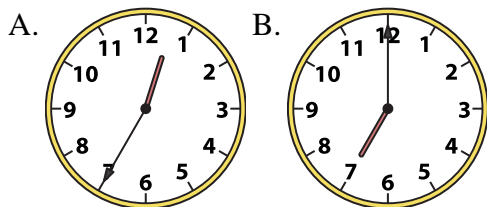
2) 6:30



1. **B**

3) 7:00

4) 8:00



2. **B**

3. **B**

4. **B**

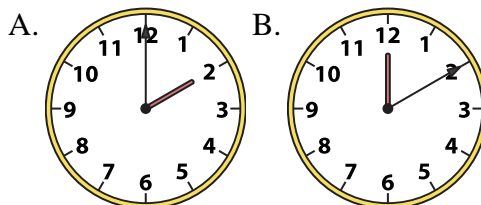
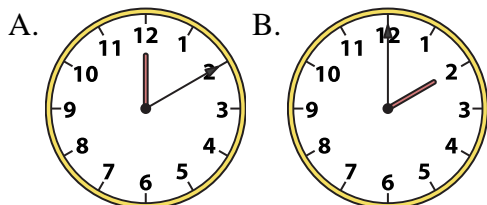
5. **B**

6. **A**

7. **B**

5) 2:00

6) 2:00



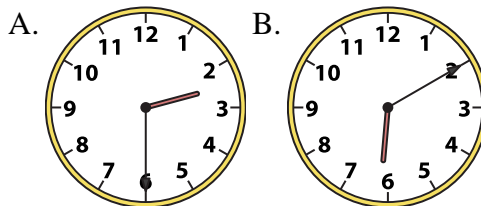
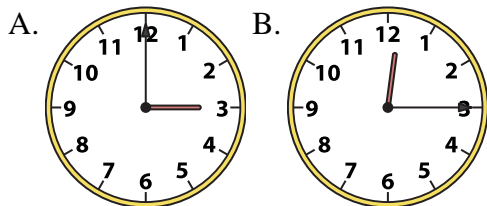
8. **A**

9. **A**

10. **B**

7) 12:15

8) 2:30

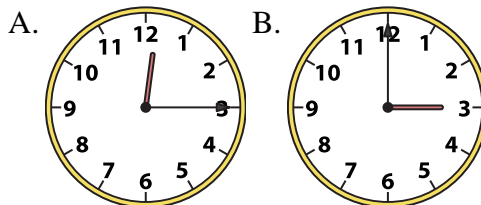
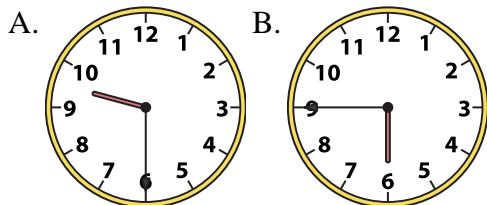


11. **B**

12. **B**

9) 9:30

10) 3:00



11) 6:15

12) 8:45

