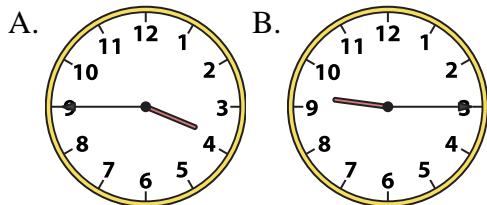




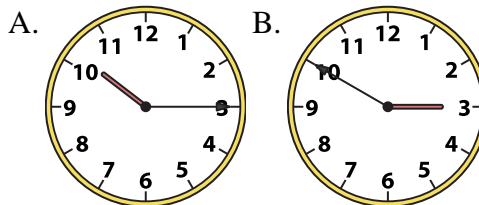
Determine which clock accurately shows the time.

**Answers**

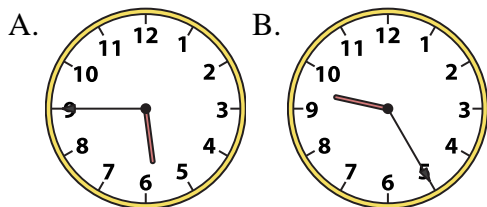
1) 3:45



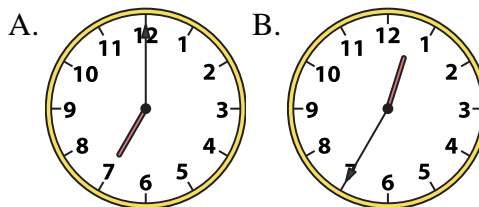
2) 10:15



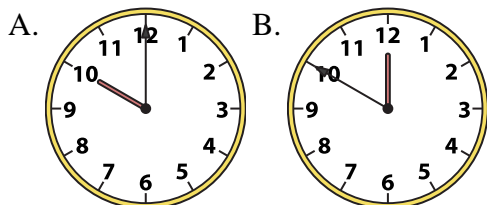
3) 5:45



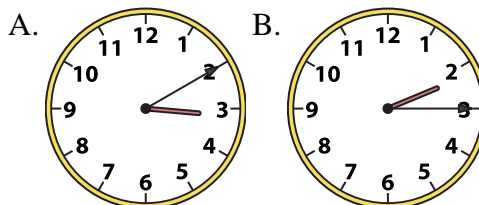
4) 7:00



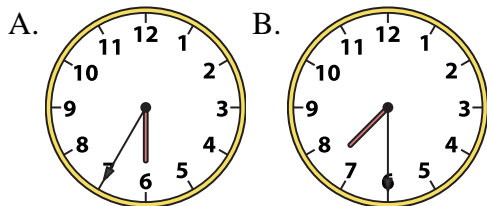
5) 10:00



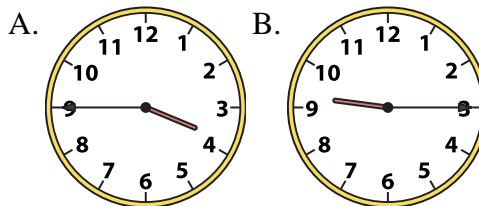
6) 2:15



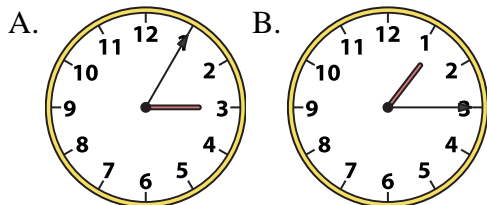
7) 7:30



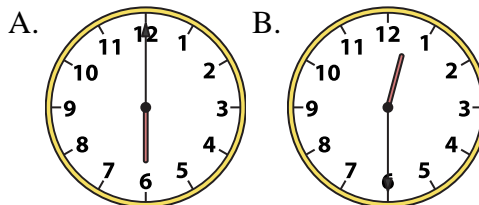
8) 9:15



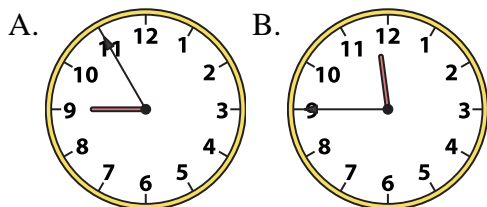
9) 1:15



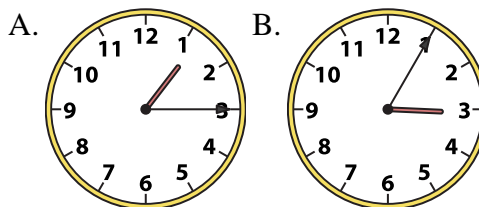
10) 12:30



11) 11:45



12) 1:15



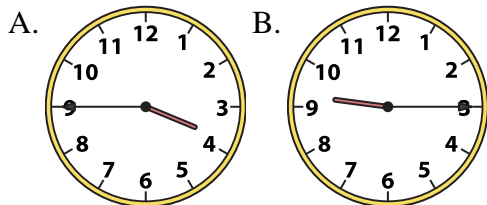
1. \_\_\_\_\_
2. \_\_\_\_\_
3. \_\_\_\_\_
4. \_\_\_\_\_
5. \_\_\_\_\_
6. \_\_\_\_\_
7. \_\_\_\_\_
8. \_\_\_\_\_
9. \_\_\_\_\_
10. \_\_\_\_\_
11. \_\_\_\_\_
12. \_\_\_\_\_



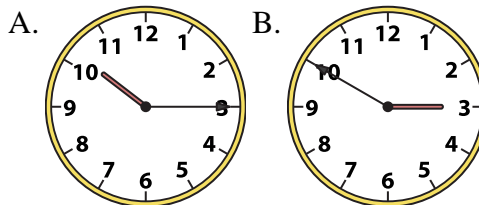
Determine which clock accurately shows the time.

**Answers**

1) 3:45

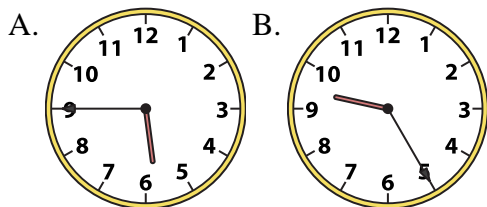


2) 10:15

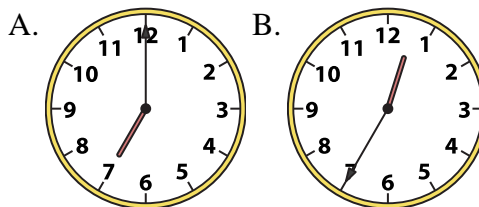


1.   **A**  

3) 5:45



4) 7:00



2.   **A**  

3.   **A**  

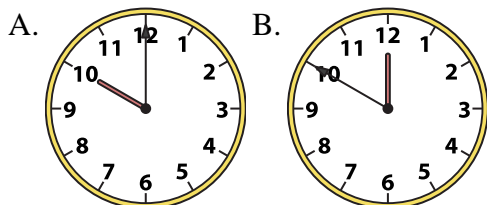
4.   **A**  

5.   **A**  

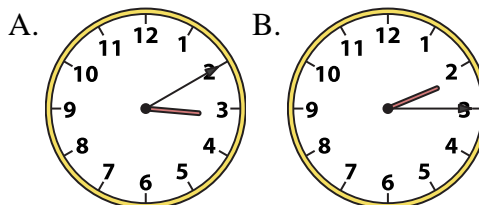
6.   **B**  

7.   **B**  

5) 10:00



6) 2:15

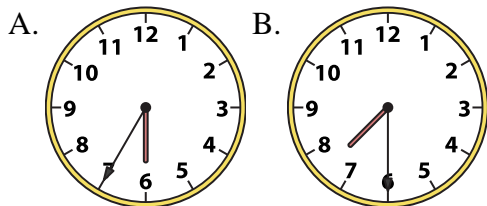


8.   **B**  

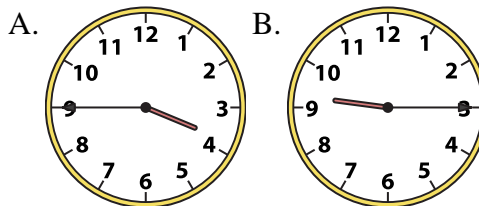
9.   **B**  

10.   **B**  

7) 7:30



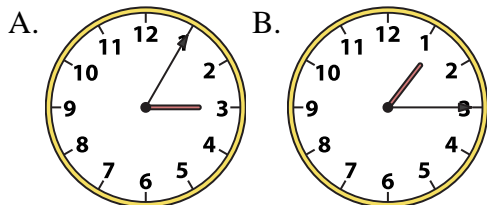
8) 9:15



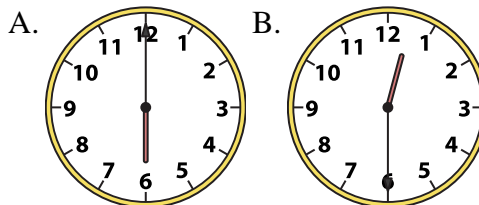
11.   **B**  

12.   **A**  

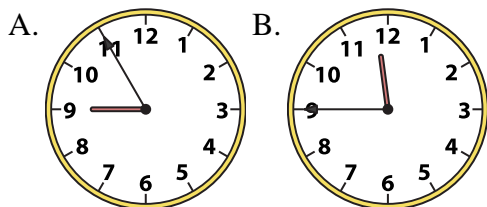
9) 1:15



10) 12:30



11) 11:45



12) 1:15

