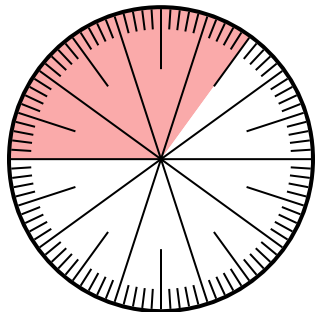




Solve each problem.

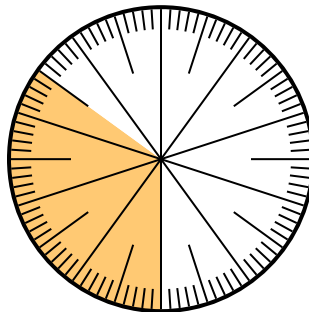
**Answers**

- 1) Which choice represents the un-shaded portion of the number wheel?



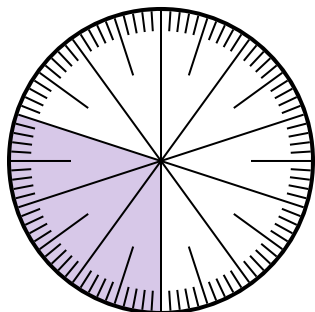
- A.  $\frac{65}{100}$       B.  $\frac{6.5}{100}$   
 C.  $\frac{35}{65}$       D.  $\frac{6.50}{100}$

- 2) Which choice represents the shaded portion of the number wheel?



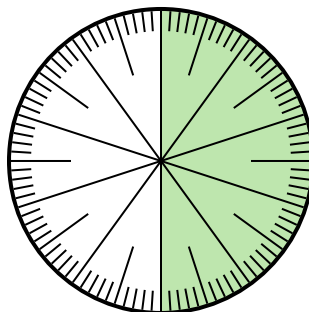
- A. 3.50      B. 0.035  
 C.  $\frac{3.5}{100}$       D. 0.35

- 3) Which choice represents the shaded portion of the number wheel?



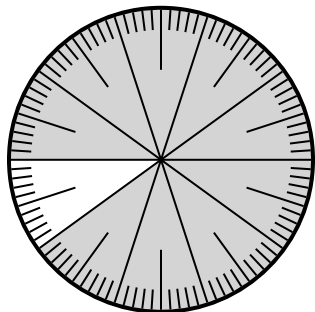
- A.  $\frac{30}{10}$       B. 0.3  
 C. 30.0      D. 3.0

- 4) Which choice represents the un-shaded portion of the number wheel?



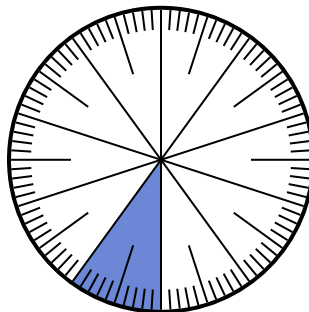
- A. 0.50      B.  $\frac{0.5}{100}$   
 C. 5      D. 50

- 5) Which choice represents the shaded portion of the number wheel?



- A.  $\frac{90}{100}$       B. 0.090  
 C. 90      D.  $\frac{9}{100}$

- 6) Which choice represents the shaded portion of the number wheel?



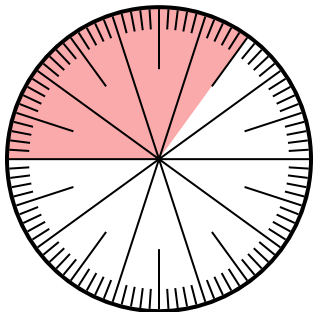
- A. 0.10      B. 10  
 C.  $\frac{0.1}{100}$       D.  $\frac{1.00}{100}$

1. \_\_\_\_\_  
 2. \_\_\_\_\_  
 3. \_\_\_\_\_  
 4. \_\_\_\_\_  
 5. \_\_\_\_\_  
 6. \_\_\_\_\_



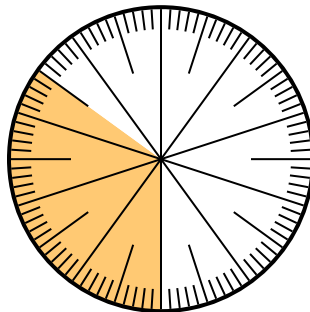
Solve each problem.

- 1) Which choice represents the un-shaded portion of the number wheel?



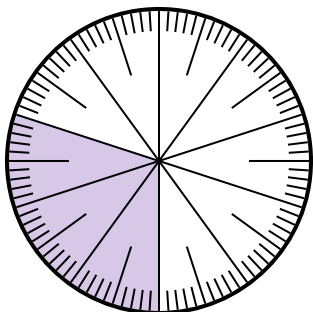
- A.  $\frac{65}{100}$       B.  $\frac{6.5}{100}$   
 C.  $\frac{35}{65}$       D.  $\frac{6.50}{100}$

- 2) Which choice represents the shaded portion of the number wheel?



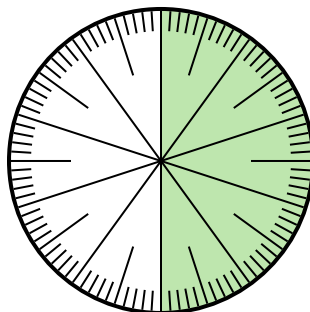
- A. 3.50      B. 0.035  
 C.  $\frac{3.5}{100}$       D. 0.35

- 3) Which choice represents the shaded portion of the number wheel?



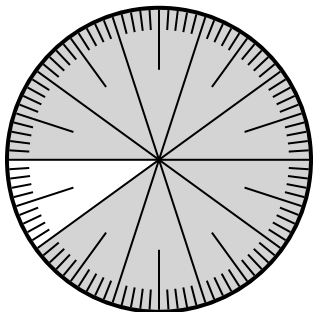
- A.  $\frac{30}{10}$       B. 0.3  
 C. 30.0      D. 3.0

- 4) Which choice represents the un-shaded portion of the number wheel?



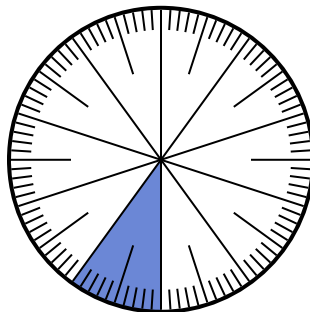
- A. 0.50      B.  $\frac{0.5}{100}$   
 C. 5      D. 50

- 5) Which choice represents the shaded portion of the number wheel?



- A.  $\frac{90}{100}$       B. 0.090  
 C. 90      D.  $\frac{9}{100}$

- 6) Which choice represents the shaded portion of the number wheel?



- A. 0.10      B. 10  
 C.  $\frac{0.1}{100}$       D.  $\frac{1.00}{100}$

**Answers**

1.   **A**    
 2.   **D**    
 3.   **B**    
 4.   **A**    
 5.   **A**    
 6.   **A**