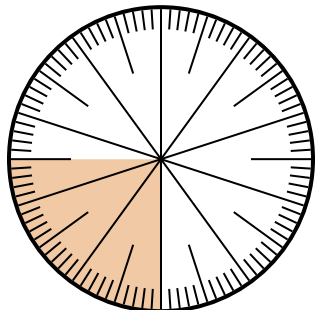




Solve each problem.

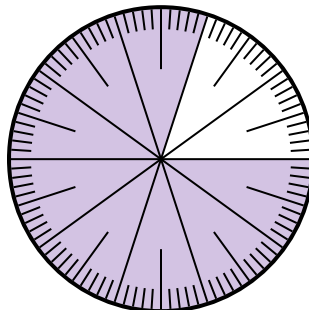
Answers

- 1) Which choice represents the shaded portion of the number wheel?



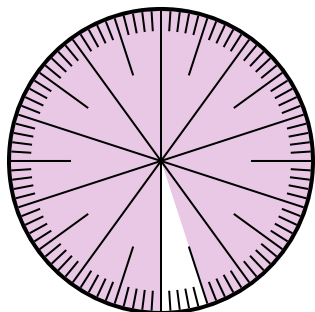
- A. $\frac{25}{75}$ B. $\frac{0.25}{100}$
 C. $\frac{25}{100}$ D. 2.50

- 2) Which choice represents the shaded portion of the number wheel?



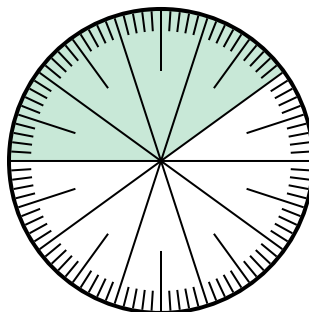
- A. $\frac{8}{100}$ B. 0.080
 C. $\frac{0.8}{100}$ D. $\frac{80}{100}$

- 3) Which choice represents the un-shaded portion of the number wheel?



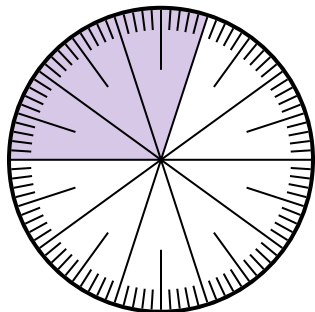
- A. $\frac{5}{100}$ B. 0.5
 C. $\frac{95}{5}$ D. $\frac{5}{95}$

- 4) Which choice represents the un-shaded portion of the number wheel?



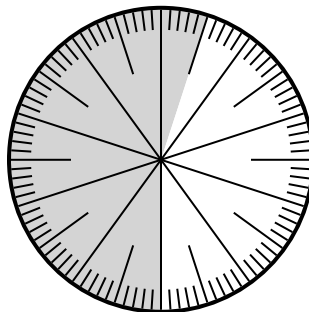
- A. $\frac{0.6}{100}$ B. 0.60
 C. $\frac{40}{60}$ D. 6.00

- 5) Which choice represents the shaded portion of the number wheel?



- A. 3 B. 0.30
 C. 30 D. $\frac{30}{70}$

- 6) Which choice represents the shaded portion of the number wheel?



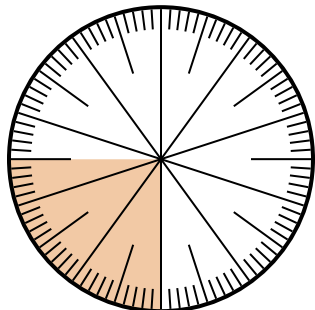
- A. $\frac{55}{100}$ B. 45
 C. 5.5 D. 45.0

1. _____
 2. _____
 3. _____
 4. _____
 5. _____
 6. _____



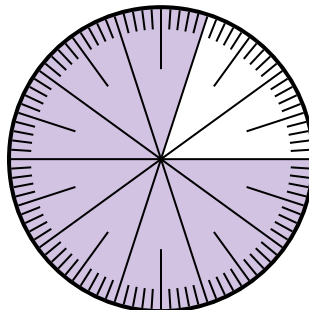
Solve each problem.

1) Which choice represents the shaded portion of the number wheel?



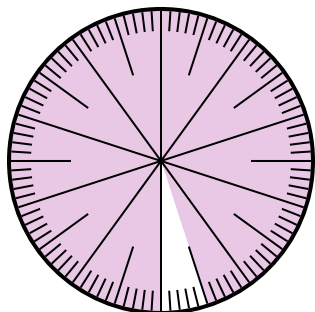
- A. $\frac{25}{75}$
- B. $\frac{0.25}{100}$
- C. $\frac{25}{100}$
- D. 2.50

2) Which choice represents the shaded portion of the number wheel?



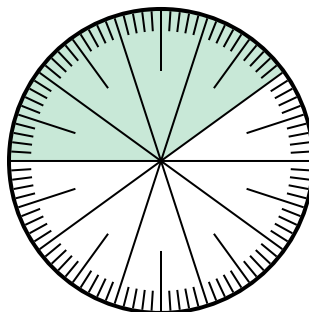
- A. $\frac{8}{100}$
- B. 0.080
- C. $\frac{0.8}{100}$
- D. $\frac{80}{100}$

3) Which choice represents the un-shaded portion of the number wheel?



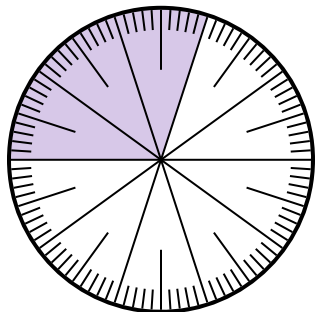
- A. $\frac{5}{100}$
- B. 0.5
- C. $\frac{95}{5}$
- D. $\frac{5}{95}$

4) Which choice represents the un-shaded portion of the number wheel?



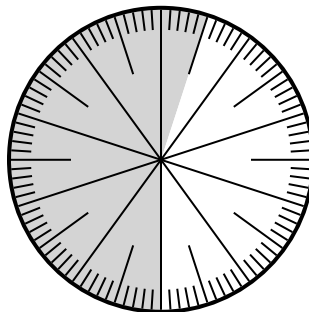
- A. $\frac{0.6}{100}$
- B. 0.60
- C. $\frac{40}{60}$
- D. 6.00

5) Which choice represents the shaded portion of the number wheel?



- A. 3
- B. 0.30
- C. 30
- D. $\frac{30}{70}$

6) Which choice represents the shaded portion of the number wheel?



- A. $\frac{55}{100}$
- B. 45
- C. 5.5
- D. 45.0

Answers

- 1. **C**
- 2. **D**
- 3. **A**
- 4. **B**
- 5. **B**
- 6. **A**