


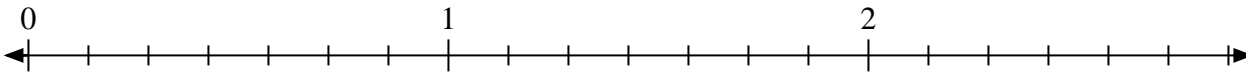


Solve each problem.

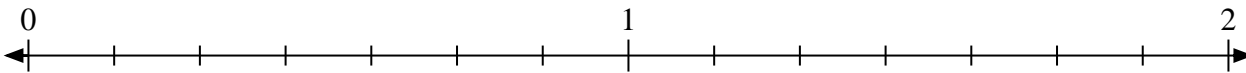
- 1) Mark the location of
- $\frac{5}{3}$



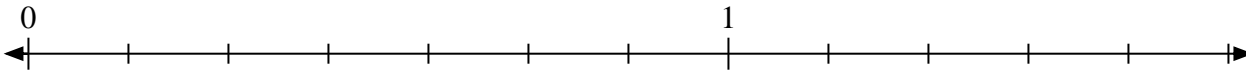
- 2) Mark the location of
- $\frac{16}{7}$



- 3) Mark the location of
- $\frac{13}{7}$



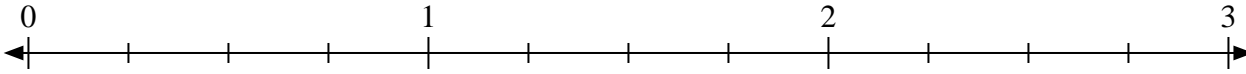
- 4) Mark the location of
- $\frac{8}{7}$



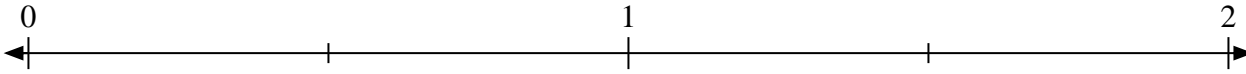
- 5) Mark the location of
- $\frac{10}{8}$



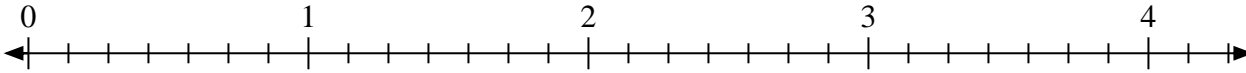
- 6) Mark the location of
- $\frac{10}{4}$



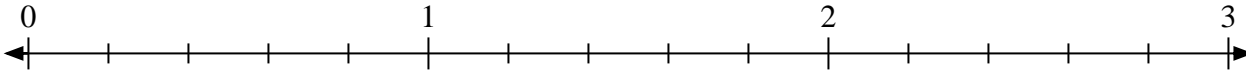
- 7) Mark the location of
- $\frac{3}{2}$



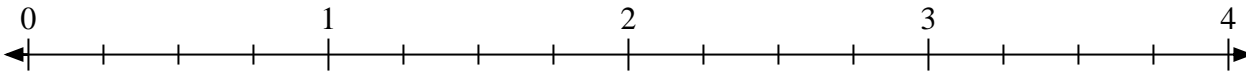
- 8) Mark the location of
- $\frac{14}{7}$



- 9) Mark the location of
- $\frac{6}{5}$




- 10) Mark the location of
- $\frac{11}{4}$



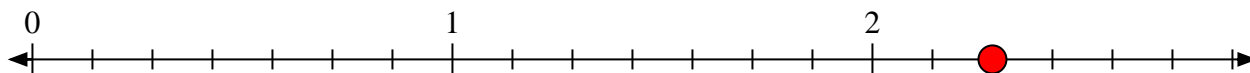


Solve each problem.

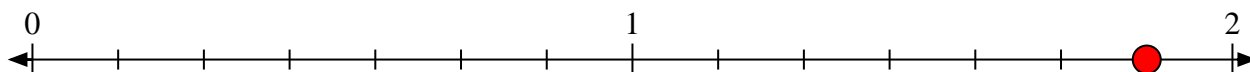
- 1) Mark the location of
- $\frac{5}{3}$



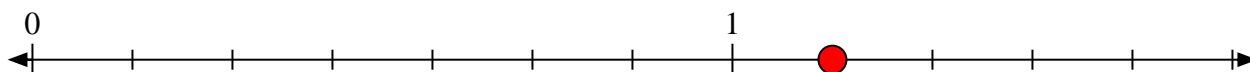
- 2) Mark the location of
- $\frac{16}{7}$




- 3) Mark the location of
- $\frac{13}{7}$



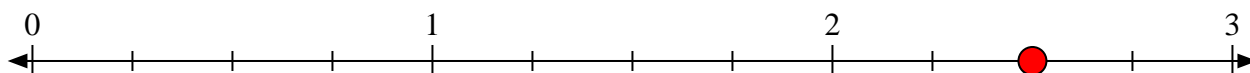
- 4) Mark the location of
- $\frac{8}{7}$



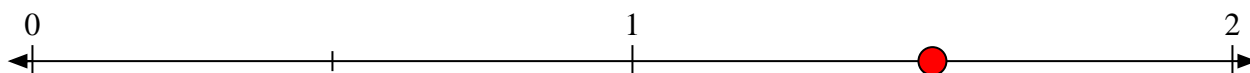
- 5) Mark the location of
- $\frac{10}{8}$



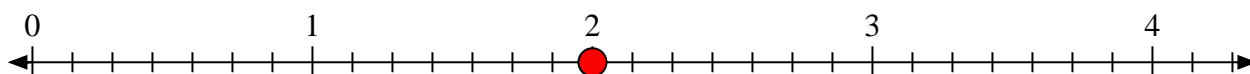
- 6) Mark the location of
- $\frac{10}{4}$



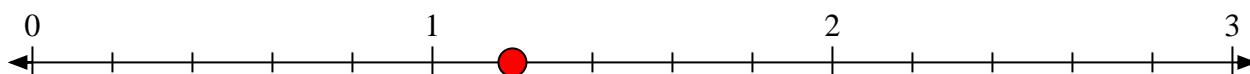
- 7) Mark the location of
- $\frac{3}{2}$



- 8) Mark the location of
- $\frac{14}{7}$



- 9) Mark the location of
- $\frac{6}{5}$



- 10) Mark the location of
- $\frac{11}{4}$

