



Use the visual model to solve each problem.

$$\frac{2}{4} \times 3 =$$

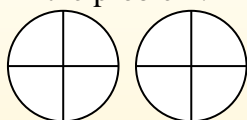
To solve multiplication problems with fractions one strategy is to think of them as addition problems.

For example the problem above is the same as:

$$\frac{2}{4} + \frac{2}{4} + \frac{2}{4}$$

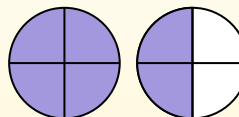
$$\frac{2}{4} \times 3 =$$

If we shade in $\frac{2}{4}$ on the fractions below 3 times we can see a visual representation of the problem.



$$\frac{2}{4} \times 3 = 1 \frac{2}{4}$$

After shading it in we can see why $\frac{2}{4}$ three times is equal to 1 whole and $\frac{2}{4}$.



Answers

1. _____
2. _____
3. _____
4. _____
5. _____
6. _____
7. _____
8. _____
9. _____
10. _____
11. _____
12. _____

1) $\frac{5}{10} \times 5 =$

2) $\frac{1}{5} \times 6 =$

3) $\frac{4}{8} \times 2 =$

4) $\frac{2}{6} \times 4 =$

5) $\frac{2}{5} \times 6 =$

6) $\frac{5}{12} \times 3 =$

7) $\frac{2}{3} \times 4 =$

8) $\frac{6}{8} \times 6 =$

9) $\frac{3}{8} \times 2 =$

10) $\frac{3}{4} \times 3 =$

11) $\frac{2}{4} \times 5 =$

12) $\frac{3}{10} \times 5 =$



Use the visual model to solve each problem.

$$\frac{2}{4} \times 3 =$$

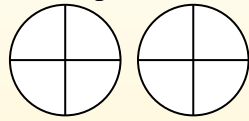
To solve multiplication problems with fractions one strategy is to think of them as addition problems.

For example the problem above is the same as:

$$\frac{2}{4} + \frac{2}{4} + \frac{2}{4}$$

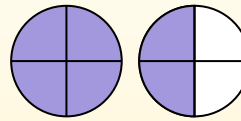
$$\frac{2}{4} \times 3 =$$

If we shade in $\frac{2}{4}$ on the fractions below 3 times we can see a visual representation of the problem.

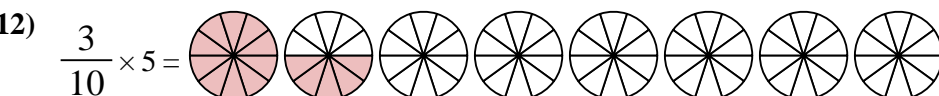
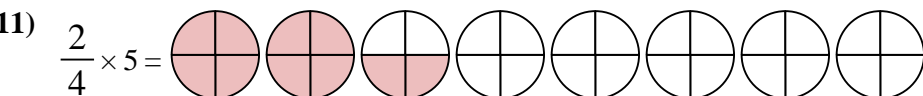
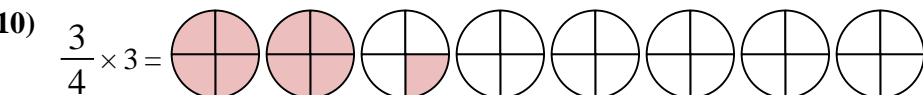
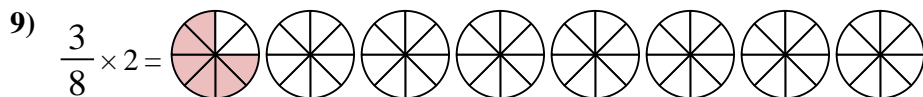
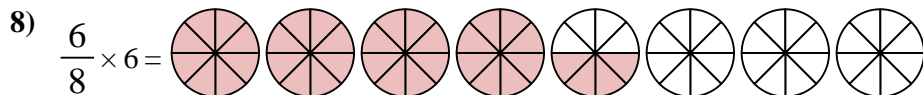
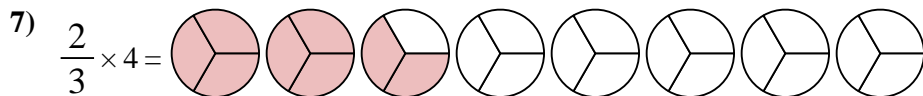
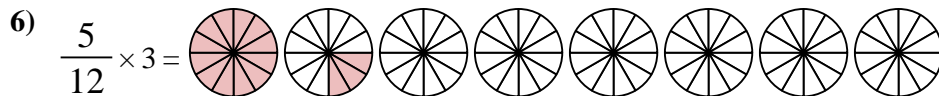
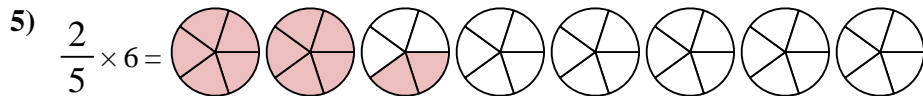
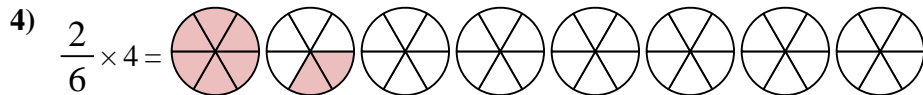
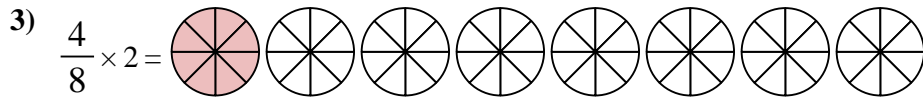
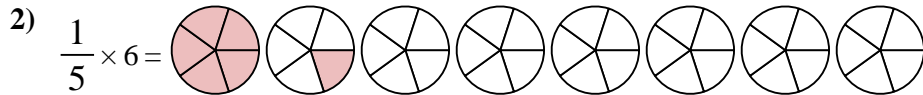
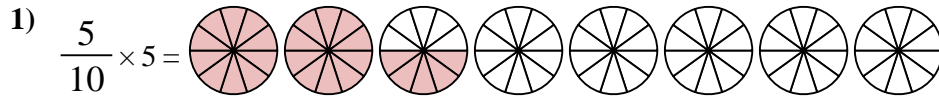


$$\frac{2}{4} \times 3 = 1 \frac{2}{4}$$

After shading it in we can see why $\frac{2}{4}$ three times is equal to 1 whole and $\frac{2}{4}$.



Answers



1. $2\frac{5}{10}$
2. $1\frac{1}{5}$
3. $1\frac{0}{8}$
4. $1\frac{2}{6}$
5. $2\frac{2}{5}$
6. $1\frac{3}{12}$
7. $2\frac{2}{3}$
8. $4\frac{4}{8}$
9. $\frac{6}{8}$
10. $2\frac{1}{4}$
11. $2\frac{2}{4}$
12. $1\frac{5}{10}$